



Solve each problem.

1) $5 + 0 = \underline{\quad}$

2) $4 + 0 = \underline{\quad}$

3) $2 + 0 = \underline{\quad}$

4) $1 + 1 = \underline{\quad}$

5) $4 + 1 = \underline{\quad}$

6) $1 + 4 = \underline{\quad}$

7) $1 + 2 = \underline{\quad}$

8) $2 + 3 = \underline{\quad}$

9) $4 - 4 = \underline{\quad}$

10) $5 - 5 = \underline{\quad}$

11) $2 - 2 = \underline{\quad}$

12) $5 - 3 = \underline{\quad}$

13) $5 - 4 = \underline{\quad}$

14) $3 - 3 = \underline{\quad}$

15) $4 - 1 = \underline{\quad}$

16) $3 - 2 = \underline{\quad}$

Answers

1. _____

2. _____

3. _____

4. _____

5. _____

6. _____

7. _____

8. _____

9. _____

10. _____

11. _____

12. _____

13. _____

14. _____

15. _____

16. _____



Solve each problem.

1) $5 + 0 = \underline{5}$

2) $4 + 0 = \underline{4}$

3) $2 + 0 = \underline{2}$

4) $1 + 1 = \underline{2}$

5) $4 + 1 = \underline{5}$

6) $1 + 4 = \underline{5}$

7) $1 + 2 = \underline{3}$

8) $2 + 3 = \underline{5}$

9) $4 - 4 = \underline{0}$

10) $5 - 5 = \underline{0}$

11) $2 - 2 = \underline{0}$

12) $5 - 3 = \underline{2}$

13) $5 - 4 = \underline{1}$

14) $3 - 3 = \underline{0}$

15) $4 - 1 = \underline{3}$


16) $3 - 2 = \underline{1}$

Answers1. 52. 43. 24. 25. 56. 57. 38. 59. 010. 011. 012. 213. 114. 015. 316. 1



Solve each problem.

1) 5 + 0 = _____



2) 4 + 0 = _____




3) 2 + 0 = _____



4) 1 + 1 = _____



5) 4 + 1 = _____



6) 1 + 4 = _____



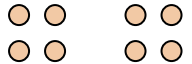
7) 1 + 2 = _____



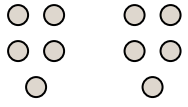
8) 2 + 3 = _____



9) 4 - 4 = _____



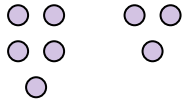
10) 5 - 5 = _____



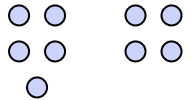
11) 2 - 2 = _____




12) 5 - 3 = _____




13) 5 - 4 = _____



14) 3 - 3 = _____



15) 4 - 1 = _____



16) 3 - 2 = _____



Answers

1. _____

2. _____

3. _____

4. _____

5. _____

6. _____

7. _____

8. _____

9. _____

10. _____

11. _____

12. _____

13. _____

14. _____

15. _____

16. _____