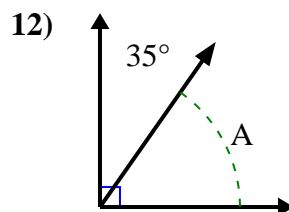
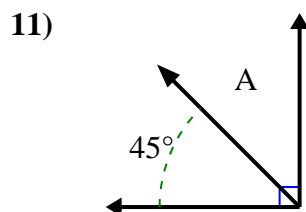
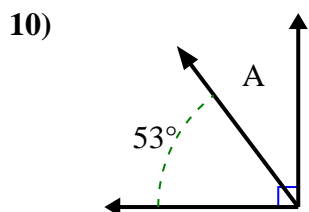
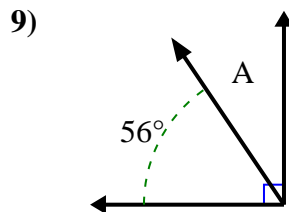
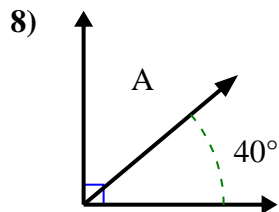
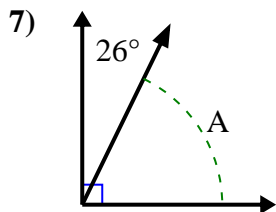
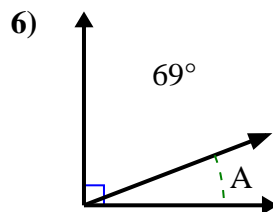
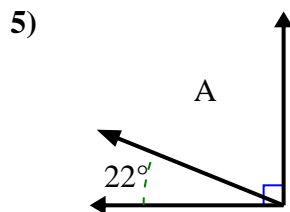
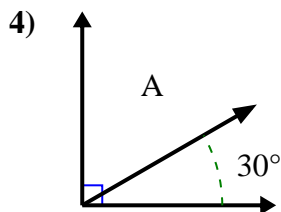
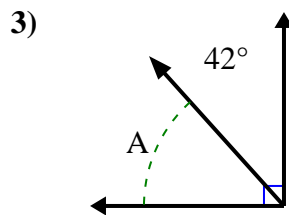
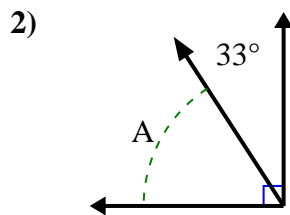
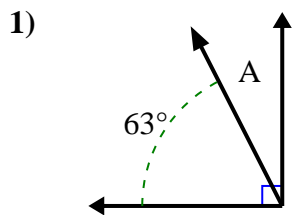




Find the value of 'A' in the set of complementary angles.

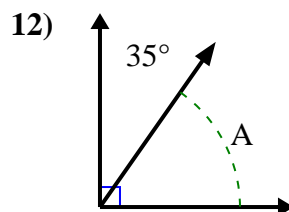
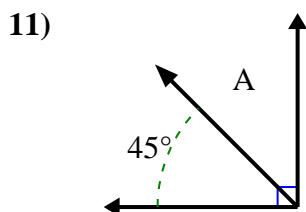
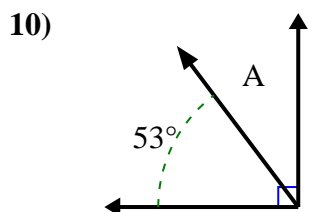
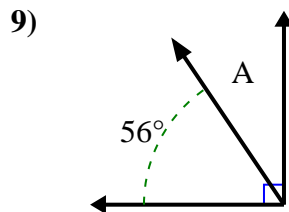
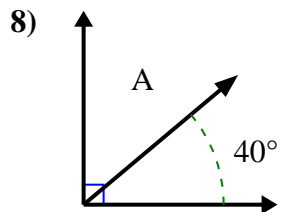
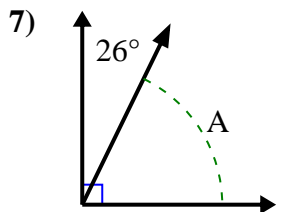
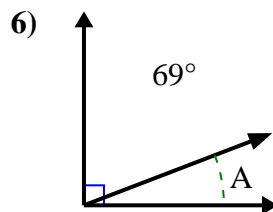
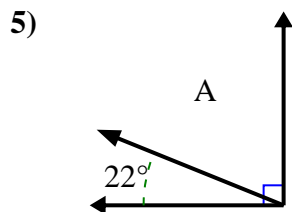
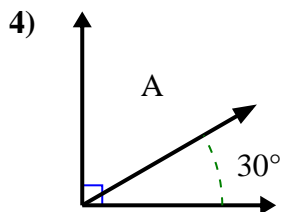
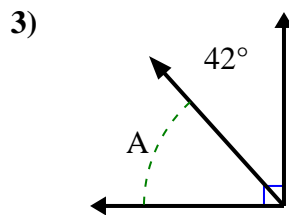
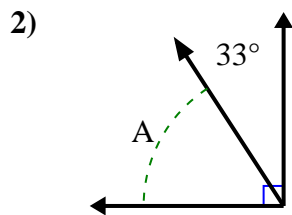
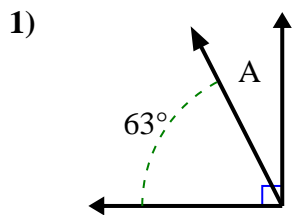
Answers



1. \_\_\_\_\_
2. \_\_\_\_\_
3. \_\_\_\_\_
4. \_\_\_\_\_
5. \_\_\_\_\_
6. \_\_\_\_\_
7. \_\_\_\_\_
8. \_\_\_\_\_
9. \_\_\_\_\_
10. \_\_\_\_\_
11. \_\_\_\_\_
12. \_\_\_\_\_



Find the value of 'A' in the set of complementary angles.



Answers

1. 27°

2. 57°

3. 48°

4. 60°

5. 68°

6. 21°

7. 64°

8. 50°

9. 34°

10. 37°

11. 45°

12. 55°