




Determine which letter best represents the weight.

Ounce (oz)

An ounce is about the weight of a slice of bread.



Pound (lb)

A pound is about the weight of a can of vegetables.



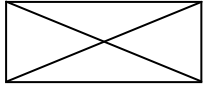
Remember:

There are 16 ounces in 1 pound.

Answers

1. _____
2. _____
3. _____
4. _____
5. _____
6. _____
7. _____
8. _____
9. _____

1)



Envelope

- A. 1 ounce
- B. 440 pounds
- C. 11 pounds
- D. 24 ounces

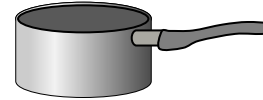
2)



Monitor

- A. 20 ounces
- B. 20 pounds
- C. 0.2 ounces
- D. 1000 pounds

3)



Cooking Pot

- A. 0.01 ounces
- B. 1.7 ounces
- C. 4 pounds
- D. 5 ounces

4)



Glue Stick

- A. 1 pound
- B. 2 pounds
- C. 2.2 ounces
- D. 15 ounces

5)



Frog

- A. 2 pounds
- B. 11000 pounds
- C. 2 ounces
- D. 17 ounces

6)



Phone

- A. 1 pound
- B. 5 pounds
- C. 0.2 ounces
- D. 10 pounds

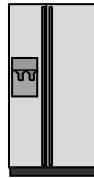
7)



Toothbrush

- A. 1100 pounds
- B. 16 ounces
- C. 30 pounds
- D. 1 ounce

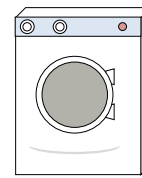
8)



Refrigerator

- A. 20 pounds
- B. 7 ounces
- C. 1 ounce
- D. 250 pounds

9)



Washing Machine


- A. 0.2 ounces
- B. 3 tons
- C. 165 pounds
- D. 16 pounds



Determine which letter best represents the weight.

Ounce (oz)

An ounce is about the weight of a slice of bread.



Pound (lb)

A pound is about the weight of a can of vegetables.

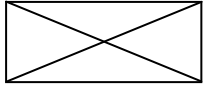


Remember:

There are 16 ounces in 1 pound.

Answers

1)



Envelope

- A. 1 ounce
- B. 440 pounds
- C. 11 pounds
- D. 24 ounces

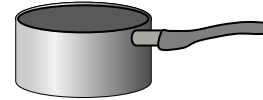
2)



Monitor

- A. 20 ounces
- B. 20 pounds
- C. 0.2 ounces
- D. 1000 pounds

3)



Cooking Pot

- A. 0.01 ounces
- B. 1.7 ounces
- C. 4 pounds
- D. 5 ounces

4)



Glue Stick

- A. 1 pound
- B. 2 pounds
- C. 2.2 ounces
- D. 15 ounces

5)



Frog

- A. 2 pounds
- B. 11000 pounds
- C. 2 ounces
- D. 17 ounces

6)



Phone

- A. 1 pound
- B. 5 pounds
- C. 0.2 ounces
- D. 10 pounds

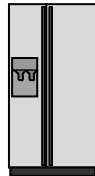
7)



Toothbrush

- A. 1100 pounds
- B. 16 ounces
- C. 30 pounds
- D. 1 ounce

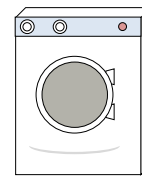
8)



Refrigerator

- A. 20 pounds
- B. 7 ounces
- C. 1 ounce
- D. 250 pounds

9)



Washing Machine

- A. 0.2 ounces
- B. 3 tons
- C. 165 pounds
- D. 16 pounds

- 1. **A**
- 2. **B**
- 3. **C**
- 4. **C**
- 5. **C**
- 6. **A**
- 7. **D**
- 8. **D**
- 9. **C**