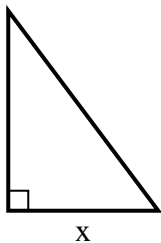


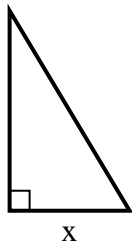


Find the value of X.

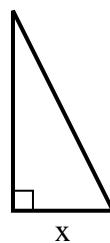
1) area = $24 u^2$



2) area = $7.5 u^2$



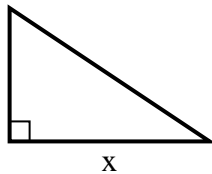
3) area = $9 u^2$



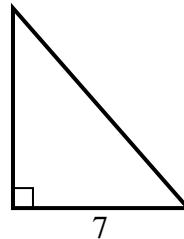
4) area = $5 u^2$



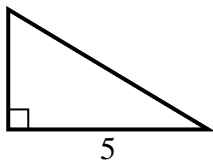
5) area = $27 u^2$



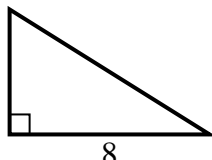
6) area = $28 u^2$



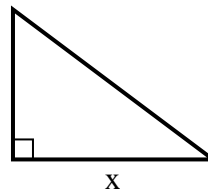
7) area = $7.5 u^2$



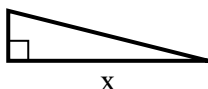
8) area = $20 u^2$



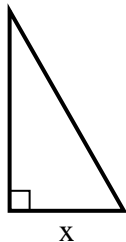
9) area = $6 u^2$



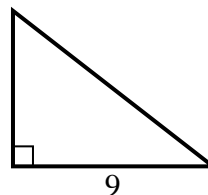
10) area = $8 u^2$



11) area = $14 u^2$



12) area = $31.5 u^2$



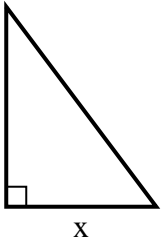
Answers

1. _____
2. _____
3. _____
4. _____
5. _____
6. _____
7. _____
8. _____
9. _____
10. _____
11. _____
12. _____

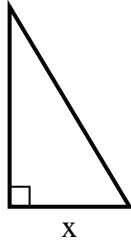


Find the value of X.

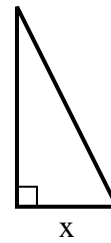
1) area = $24 u^2$



2) area = $7.5 u^2$



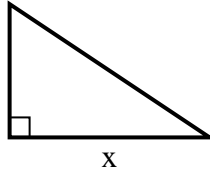
3) area = $9 u^2$



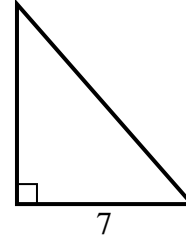
4) area = $5 u^2$



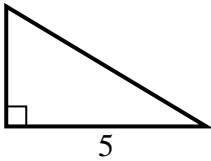
5) area = $27 u^2$



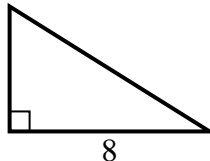
6) area = $28 u^2$



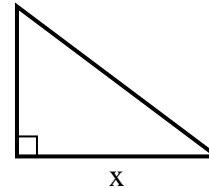
7) area = $7.5 u^2$



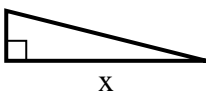
8) area = $20 u^2$



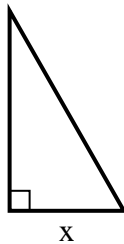
9) area = $6 u^2$



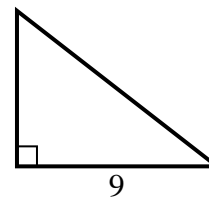
10) area = $8 u^2$



11) area = $14 u^2$



12) area = $31.5 u^2$



Answers

1. 6

2. 3

3. 3

4. 5

5. 9

6. 8

7. 3

8. 5

9. 4

10. 8

11. 4

12. 7