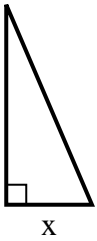




Find the value of X.

1) area =  $10.5 u^2$



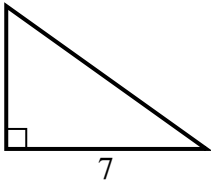
2) area =  $18 u^2$



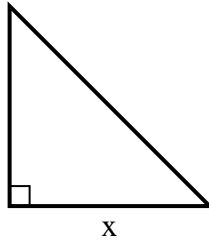
3) area =  $7 u^2$



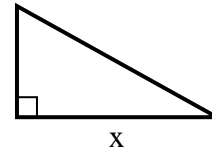
4) area =  $17.5 u^2$



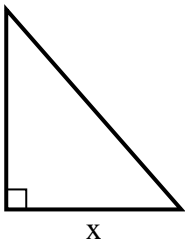
5) area =  $18 u^2$



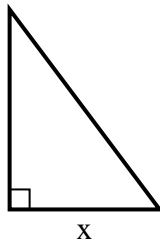
6) area =  $22.5 u^2$



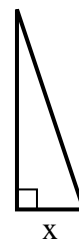
7) area =  $28 u^2$



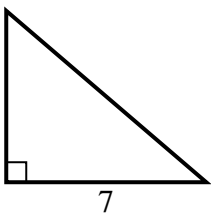
8) area =  $6 u^2$



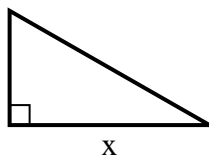
9) area =  $6 u^2$



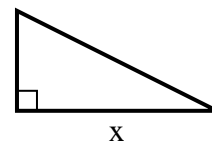
10) area =  $21 u^2$



11) area =  $14 u^2$



12) area =  $4 u^2$



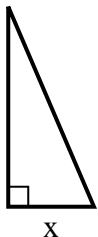
**Answers**

1. \_\_\_\_\_
2. \_\_\_\_\_
3. \_\_\_\_\_
4. \_\_\_\_\_
5. \_\_\_\_\_
6. \_\_\_\_\_
7. \_\_\_\_\_
8. \_\_\_\_\_
9. \_\_\_\_\_
10. \_\_\_\_\_
11. \_\_\_\_\_
12. \_\_\_\_\_



Find the value of X.

1) area =  $10.5 u^2$



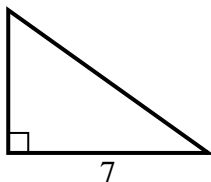
2) area =  $18 u^2$



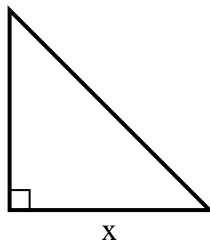
3) area =  $7 u^2$



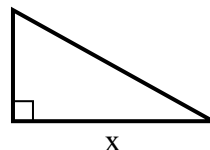
4) area =  $17.5 u^2$



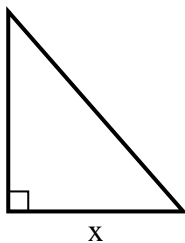
5) area =  $18 u^2$



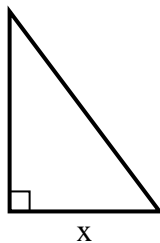
6) area =  $22.5 u^2$



7) area =  $28 u^2$



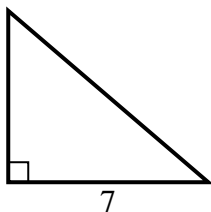
8) area =  $6 u^2$



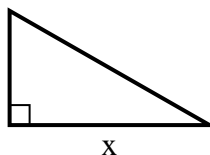
9) area =  $6 u^2$



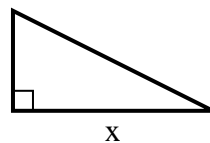
10) area =  $21 u^2$



11) area =  $14 u^2$



12) area =  $4 u^2$



Answers

1. 3

2. 9

3. 2

4. 5

5. 6

6. 9

7. 7

8. 3

9. 2

10. 6

11. 7

12. 4