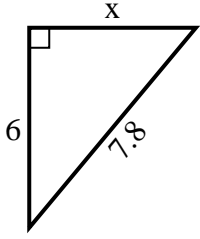


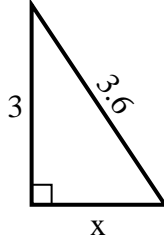


Find the value of X.

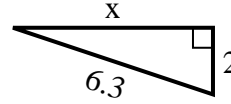
1) perimeter = 18.8 u



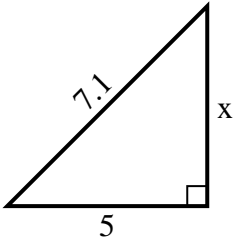
2) perimeter = 8.6 u



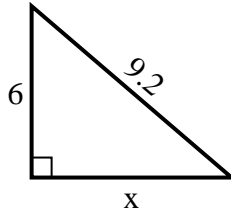
3) perimeter = 14.3 u



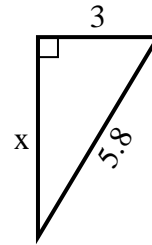
4) perimeter = 17.1 u



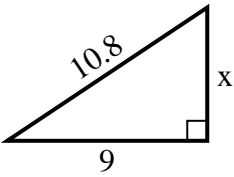
5) perimeter = 22.2 u



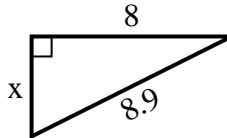
6) perimeter = 13.8 u



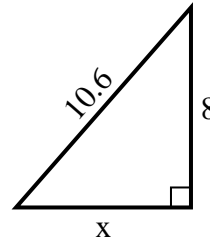
7) perimeter = 25.8 u



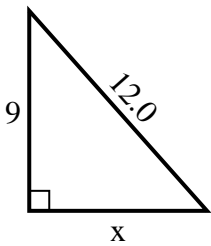
8) perimeter = 20.9 u



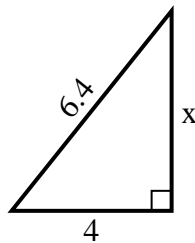
9) perimeter = 25.6 u



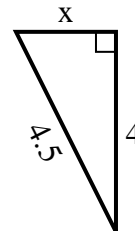
10) perimeter = 29 u



11) perimeter = 15.4 u



12) perimeter = 10.5 u



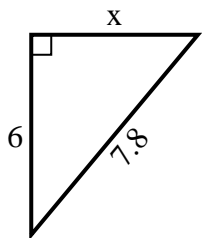
Answers

1. _____
2. _____
3. _____
4. _____
5. _____
6. _____
7. _____
8. _____
9. _____
10. _____
11. _____
12. _____

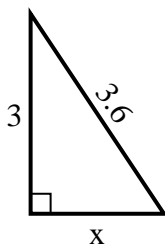


Find the value of X.

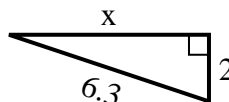
1) perimeter = 18.8 u



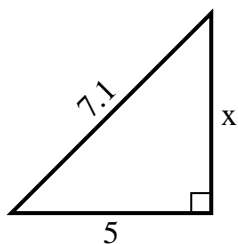
2) perimeter = 8.6 u



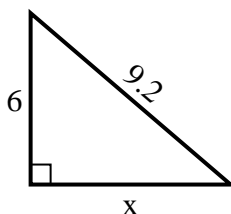
3) perimeter = 14.3 u



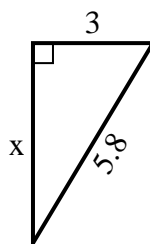
4) perimeter = 17.1 u



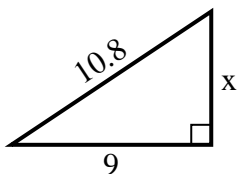
5) perimeter = 22.2 u



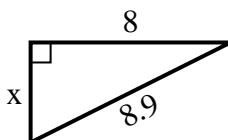
6) perimeter = 13.8 u



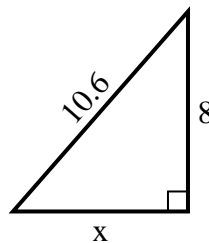
7) perimeter = 25.8 u



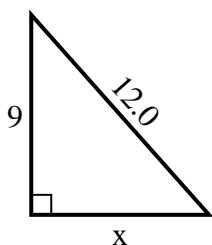
8) perimeter = 20.9 u



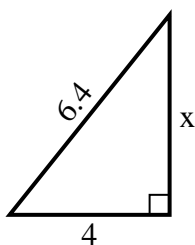
9) perimeter = 25.6 u



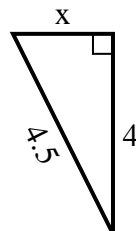
10) perimeter = 29 u



11) perimeter = 15.4 u



12) perimeter = 10.5 u



Answers

1. 5

2. 2

3. 6

4. 5

5. 7

6. 5

7. 6

8. 4

9. 7

10. 8

11. 5

12. 2