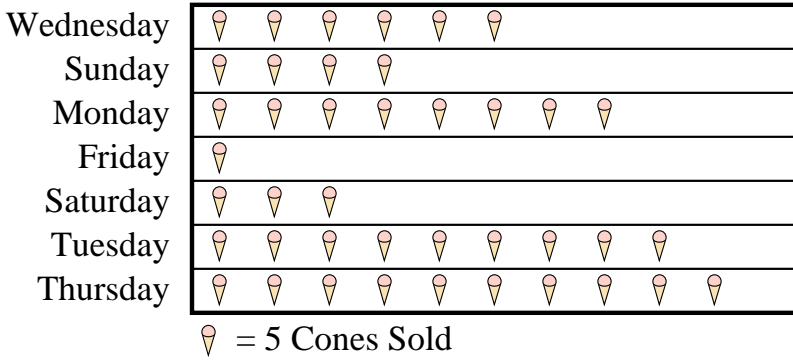




Answers

At a fundraiser students from Mrs. Long's class were selling ice cream cones. Mrs. Long recorded their sales information in the pictograph below.

**Cones Sold**

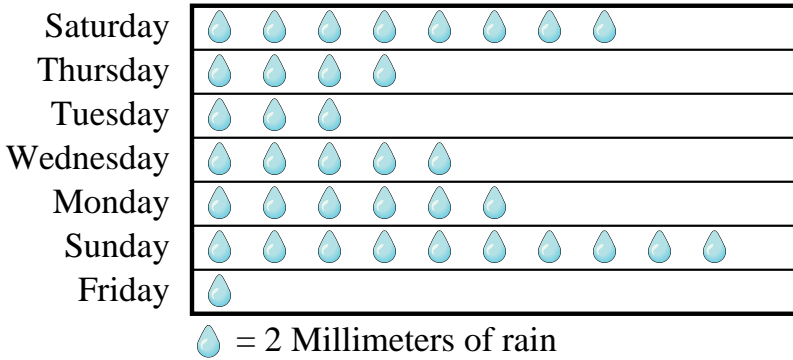


- How many ice cream cones did they sell on Monday?
- Which day did they sell exactly 5 ice cream cones?
- Which day did they sell the fewest ice cream cones?
- Did they sell more cones on Wednesday or Sunday?
- Which day did they sell the most ice cream cones?

- \_\_\_\_\_
- \_\_\_\_\_
- \_\_\_\_\_
- \_\_\_\_\_
- \_\_\_\_\_
- \_\_\_\_\_
- \_\_\_\_\_
- \_\_\_\_\_
- \_\_\_\_\_
- \_\_\_\_\_

Mr. Sanders class was performing an experiment to see which day of the week had the most rain. His class recorded their information in the pictograph below.

**Millimeters of Rain**

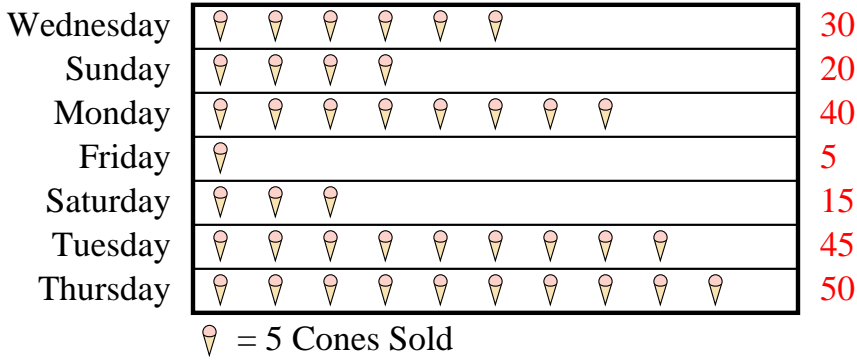


- Which day had the most rain?
- Which day was there exactly 10 millimeters of rain?
- How much rain was there on Tuesday?
- Did it rain more on Saturday or Thursday?
- Which day had the least rain?



At a fundraiser students from Mrs. Long's class were selling ice cream cones. Mrs. Long recorded their sales information in the pictograph below.

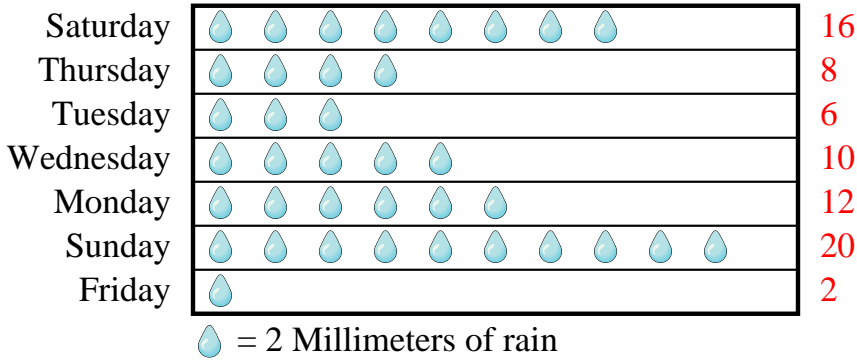
**Cones Sold**



- How many ice cream cones did they sell on Monday?
- Which day did they sell exactly 5 ice cream cones?
- Which day did they sell the fewest ice cream cones?
- Did they sell more cones on Wednesday or Sunday?
- Which day did they sell the most ice cream cones?

Mr. Sanders class was performing an experiment to see which day of the week had the most rain. His class recorded their information in the pictograph below.

**Millimeters of Rain**



- Which day had the most rain?
- Which day was there exactly 10 millimeters of rain?
- How much rain was there on Tuesday?
- Did it rain more on Saturday or Thursday?
- Which day had the least rain?

Answers

- 40
- Friday
- Friday
- Wednesday
- Thursday
- Sunday
- Wednesday
- 6
- Saturday
- Friday