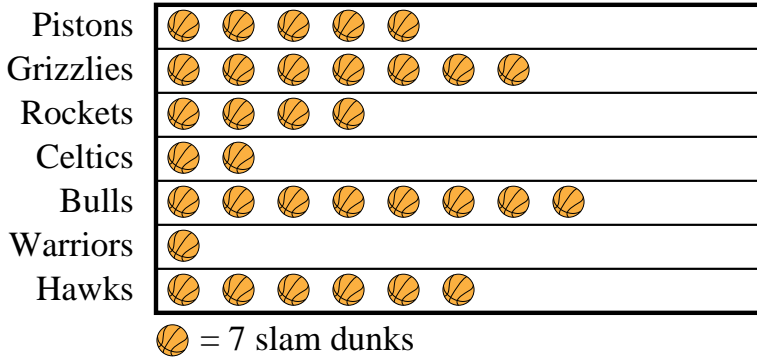




Answers

Roger was recording how many slam dunks his favorite teams scored. He organized the information in the pictograph below.

Slam Dunks

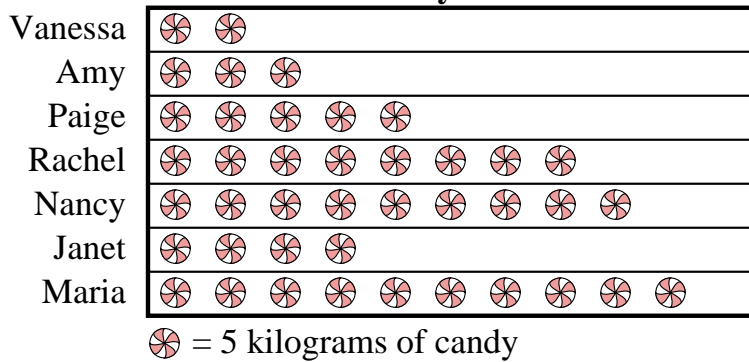


- 1) Which team scored exactly 14 slam dunks?
- 2) Which team had the fewest number of slam dunks?
- 3) Which team had more slam dunks, Pistons or Grizzlies?
- 4) How many slam dunks did the Rockets make?
- 5) Which team had the largest number of slam dunks?

1. _____
2. _____
3. _____
4. _____
5. _____
6. _____
7. _____
8. _____
9. _____
10. _____

Amy and her friends were comparing the amount of candy they received on Halloween. They recorded their information in the pictograph below.


Candy Haul



- 6) Who got the least amount of candy?
- 7) Who got exactly 40 kilograms of candy?
- 8) Who got more candy, Vanessa or Amy?
- 9) How many kilograms of candy did Paige get?
- 10) Who got the most candy?

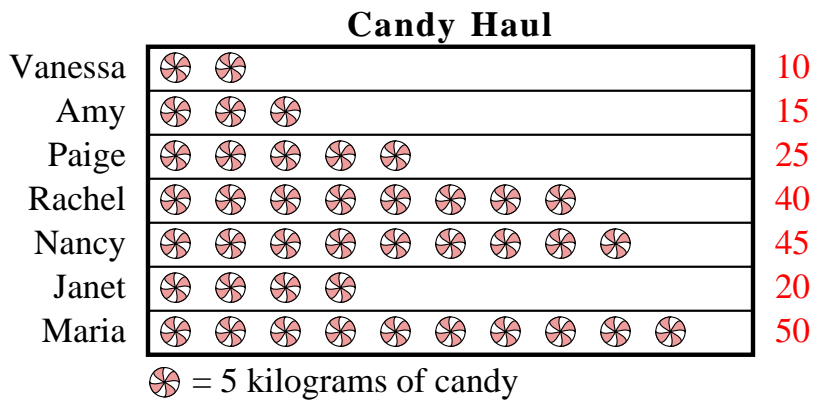


Roger was recording how many slam dunks his favorite teams scored. He organized the information in the pictograph below.



- Which team scored exactly 14 slam dunks?
- Which team had the fewest number of slam dunks?
- Which team had more slam dunks, Pistons or Grizzlies?
- How many slam dunks did the Rockets make?
- Which team had the largest number of slam dunks?

Amy and her friends were comparing the amount of candy they received on Halloween. They recorded their information in the pictograph below.



- Who got the least amount of candy?
- Who got exactly 40 kilograms of candy?
- Who got more candy, Vanessa or Amy?
- How many kilograms of candy did Paige get?
- Who got the most candy?

Answers

- Celtics
- Warriors
- Grizzlies
- 28
- Bulls
- Vanessa
- Rachel
- Amy
- 25
- Maria