



Determine if the angle shown is 'less', 'more' or 'equal' to 90°.

Answers

Ex)



1)



2)

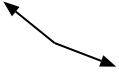


Ex. less

1. \_\_\_\_\_

2. \_\_\_\_\_

3)



4)



5)

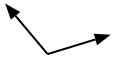


3. \_\_\_\_\_

4. \_\_\_\_\_

5. \_\_\_\_\_

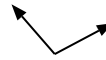
6)



7)



8)



6. \_\_\_\_\_

7. \_\_\_\_\_

8. \_\_\_\_\_

9)



10)



11)

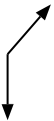


9. \_\_\_\_\_

10. \_\_\_\_\_

11. \_\_\_\_\_

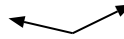
12)



13)



14)

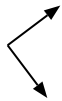


12. \_\_\_\_\_

13. \_\_\_\_\_

14. \_\_\_\_\_

15)



16)



17)



15. \_\_\_\_\_

16. \_\_\_\_\_

17. \_\_\_\_\_

18)



19)



20)



18. \_\_\_\_\_

19. \_\_\_\_\_

20. \_\_\_\_\_



Determine if the angle shown is 'less', 'more' or 'equal' to 90°.

Ex)



1)



2)



Answers

Ex. less

1. less

2. less

3. more

4. equal

5. less

6. more

7. more

8. more

9. equal

10. less

11. less

12. more

13. equal

14. more

15. equal

16. equal

17. more

18. equal

19. equal

20. less

3)



4)



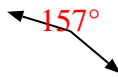
5)



6)



7)



8)



9)



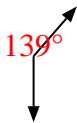
10)



11)



12)



13)



14)



15)



16)



17)



18)



19)



20)

