



Determine if the angle shown is 'less', 'more' or 'equal' to 90°.

Answers

Ex)



1)



2)



Ex. **less**

1. _____

2. _____

3)



4)



5)



3. _____

4. _____

5. _____

6)



7)



8)



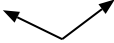
6. _____

7. _____

9)



10)



11)



8. _____

9. _____

10. _____

11. _____

12)



13)



14)



12. _____

13. _____

14. _____

15)



16)



17)



15. _____

16. _____

17. _____

18)



19)



20)









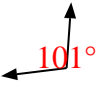



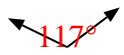




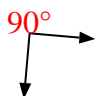


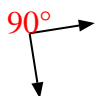


18. _____

19. _____

20. _____



Determine if the angle shown is 'less', 'more' or 'equal' to 90°.

Ex) 	1) 	2) 
3) 	4) 	5) 
6) 	7) 	8) 
9) 	10) 	11) 
12) 	13) 	14) 
15) 	16) 	17) 
18) 	19) 	20) 

Answers

- Ex. less
1. equal
2. more
3. less
4. equal
5. less
6. more
7. equal
8. more
9. less
10. more
11. equal
12. more
13. less
14. less
15. equal
16. more
17. more
18. equal
19. equal
20. equal