

**Solve each problem.****Answers**

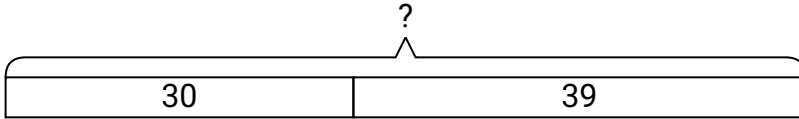
- 1) For Halloween Frank got 30 ounces of candy and Robin got 39 ounces of candy. What is the combined weight they received?
- 2) Paul had \$45. Later he sold some of his old toys and got another \$12. How much money does he have total?
- 3) At the zoo Vanessa took 15 pictures. If her sister took another 49 pictures, how many did they take total?
- 4) Will collected 44 cans to recycle on Monday and 19 more on Tuesday. How many cans did Will collect all together?
- 5) Sarah had 41 books. If she bought 36 more at a yard sale how many would she have total?
- 6) On Saturday Oliver bought 15 trading cards. On Sunday he bought 17 more. How many cards did he buy total?
- 7) Lana picked up 12 pieces of paper from the floor. If Dave picked up 36 pieces, how many did they pick up total?

1. _____
2. _____
3. _____
4. _____
5. _____
6. _____
7. _____

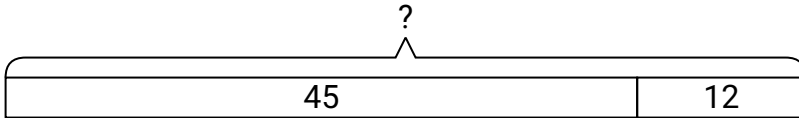


Solve each problem.

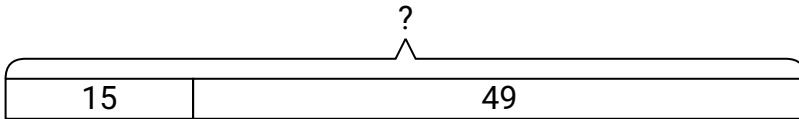
- 1) For Halloween Frank got 30 ounces of candy and Robin got 39 ounces of candy. What is the combined weight they received?



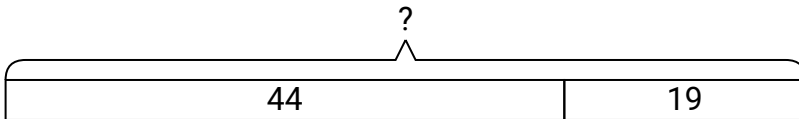
- 2) Paul had \$45. Later he sold some of his old toys and got another \$12. How much money does he have total?



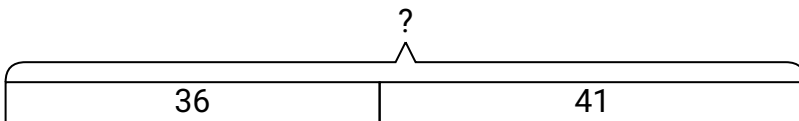
- 3) At the zoo Vanessa took 15 pictures. If her sister took another 49 pictures, how many did they take total?



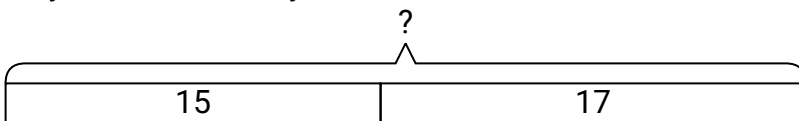
- 4) Will collected 44 cans to recycle on Monday and 19 more on Tuesday. How many cans did Will collect all together?



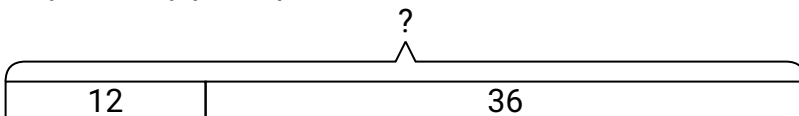
- 5) Sarah had 41 books. If she bought 36 more at a yard sale how many would she have total?



- 6) On Saturday Oliver bought 15 trading cards. On Sunday he bought 17 more. How many cards did he buy total?



- 7) Lana picked up 12 pieces of paper from the floor. If Dave picked up 36 pieces, how many did they pick up total?

**Answers**

1. **69**
2. **57**
3. **64**
4. **63**
5. **77**
6. **32**
7. **48**