

**Solve each problem.****Answers**

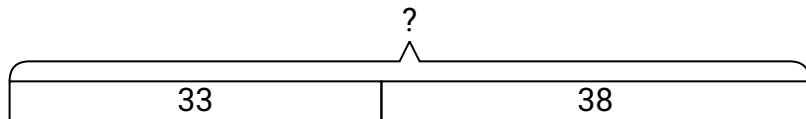
- 1) In the first half of a trivia game Kaleb scored 33 points. In the second half he scored 38 points. How many points did he score total?
- 2) Ned had \$28. Later he sold some of his old toys and got another \$39. How much money does he have total?
- 3) Dave had 35 dollars saved up. After doing some chores his mother gave him another 25 dollars. How much money does he have total?
- 4) Faye had 22 sheets of paper in her desk and 23 more in her backpack. How many did she have total?
- 5) Amy went to the movies 44 times last year and 37 times this year. How many times did Amy go to the movies total?
- 6) While playing a game Paul had 24 points. If he scored another 33 points, how many points would he have total?
- 7) On Facebook Katie had 24 photos of her friends and 48 photos of her family. How many photos did she have total?

1. _____
2. _____
3. _____
4. _____
5. _____
6. _____
7. _____

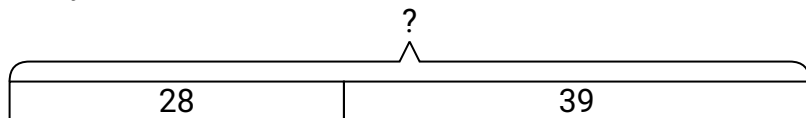


Solve each problem.

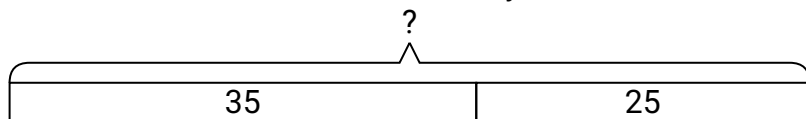
- 1) In the first half of a trivia game Kaleb scored 33 points. In the second half he scored 38 points. How many points did he score total?



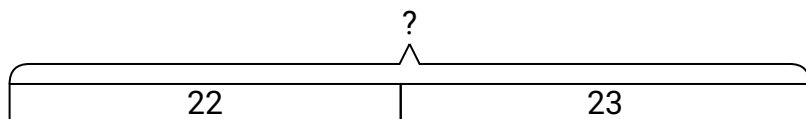
- 2) Ned had \$28. Later he sold some of his old toys and got another \$39. How much money does he have total?



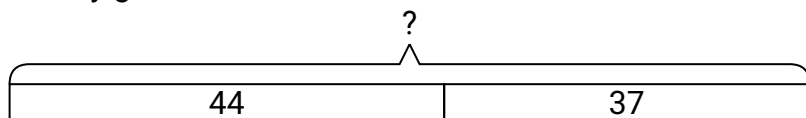
- 3) Dave had 35 dollars saved up. After doing some chores his mother gave him another 25 dollars. How much money does he have total?



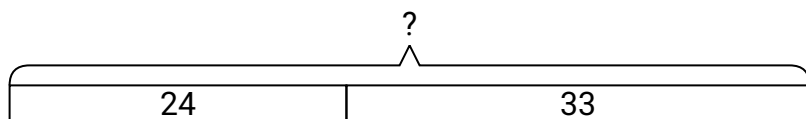
- 4) Faye had 22 sheets of paper in her desk and 23 more in her backpack. How many did she have total?



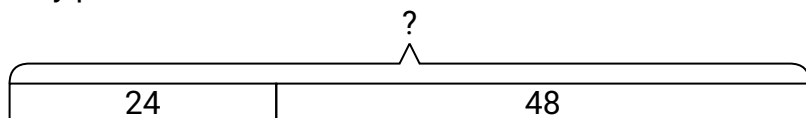
- 5) Amy went to the movies 44 times last year and 37 times this year. How many times did Amy go to the movies total?



- 6) While playing a game Paul had 24 points. If he scored another 33 points, how many points would he have total?



- 7) On Facebook Katie had 24 photos of her friends and 48 photos of her family. How many photos did she have total?

**Answers**

1. **71**
2. **67**
3. **60**
4. **45**
5. **81**
6. **57**
7. **72**