



Solve each problem.

Answers

1) For Halloween Kaleb got 48 ounces of candy and Tiffany got 32 ounces of candy. What is the combined weight they received?

1. \_\_\_\_\_

2) Paul owned 25 baseball cards. For his birthday he got 38 more. How many cards does Paul have total?

2. \_\_\_\_\_

3) For a party Henry spent 20 dollars on food and 44 dollars on drinks. How much did Henry spend total?

3. \_\_\_\_\_

4) At the arcade Sam had won 48 tickets. Later he won 49 more tickets. How many tickets did Sam have total?

4. \_\_\_\_\_

5) Paige went to the movies 23 times last year and 39 times this year. How many times did Paige go to the movies total?

5. \_\_\_\_\_

6) Katie spent 19 minutes drawing at school and 25 minutes drawing at home. How many minutes total did she spend drawing?

6. \_\_\_\_\_

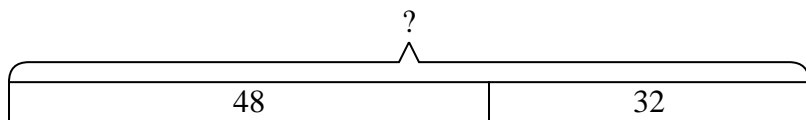
7) A store sold 14 cold drinks and 17 hot drinks. How many drinks did they sell total?

7. \_\_\_\_\_

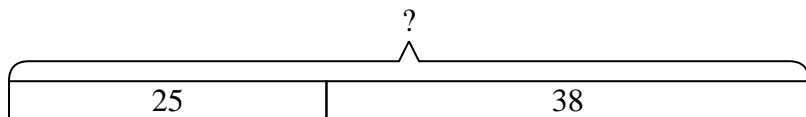


Solve each problem.

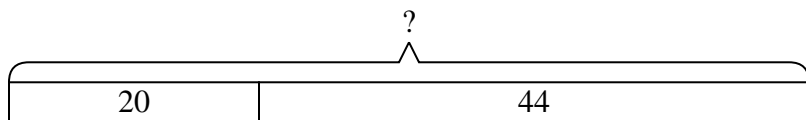
- 1) For Halloween Kaleb got 48 ounces of candy and Tiffany got 32 ounces of candy. What is the combined weight they received?



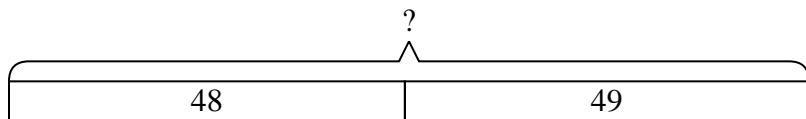
- 2) Paul owned 25 baseball cards. For his birthday he got 38 more. How many cards does Paul have total?



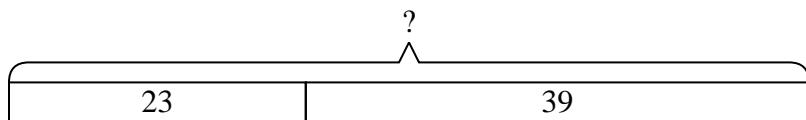
- 3) For a party Henry spent 20 dollars on food and 44 dollars on drinks. How much did Henry spend total?



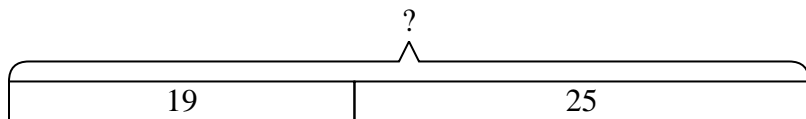
- 4) At the arcade Sam had won 48 tickets. Later he won 49 more tickets. How many tickets did Sam have total?



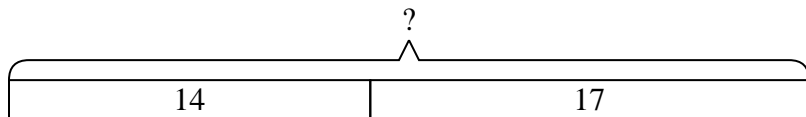
- 5) Paige went to the movies 23 times last year and 39 times this year. How many times did Paige go to the movies total?



- 6) Katie spent 19 minutes drawing at school and 25 minutes drawing at home. How many minutes total did she spend drawing?



- 7) A store sold 14 cold drinks and 17 hot drinks. How many drinks did they sell total?



Answers

1. 80

2. 63

3. 64

4. 97

5. 62

6. 44

7. 31