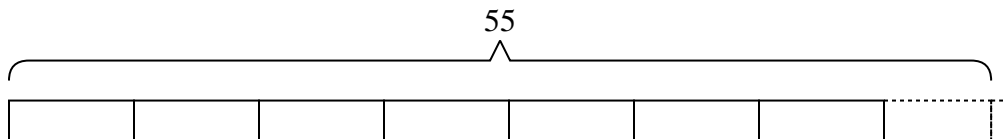




Solve each problem.

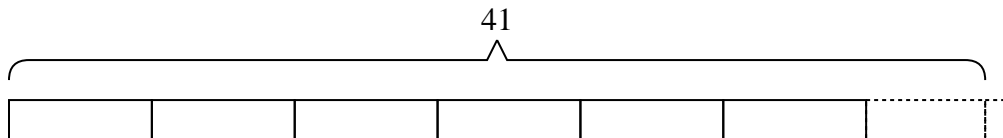
Answers

- 1) At the carnival, {seven} friends bought {fifty-five} tickets. If they wanted to split all the tickets so each friend got the same amount, how many more tickets would they need to buy?



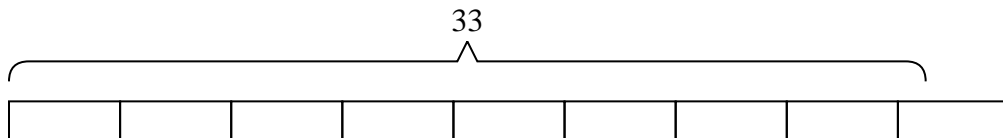
1. _____

- 2) A container can hold {six} orange slices. If a company had {forty-one} orange slices to put into containers, how many more slices would they need to fill up the last container?



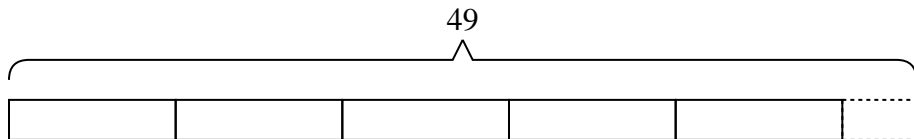
2. _____

- 3) Jerry was trying to beat his old score of {thirty-three} points in a video game. If he scores exactly {four} points each round, how many rounds would he need to play to beat his old score?



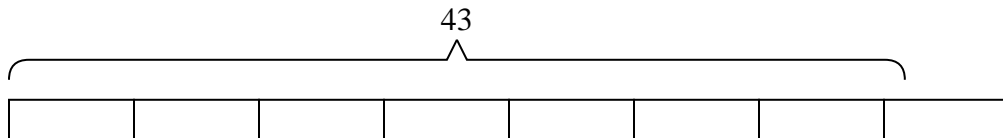
3. _____

- 4) A vat of orange juice was {forty-nine} pints. If you wanted to pour the vat into {nine} glasses with the same amount in each glass, how many pints would be in each glass?



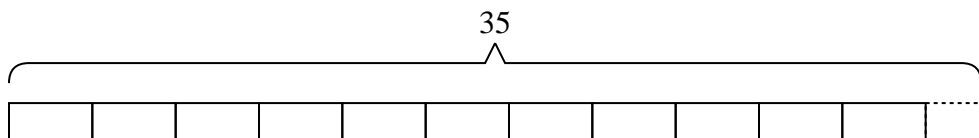
4. _____

- 5) A movie theater needed {forty-three} popcorn buckets. If each package has {six} buckets in it, how many packages will they need to buy?



5. _____

- 6) A machine in a candy company creates {thirty-five} pieces of candy a minute. If a small box of candy has {three} pieces in it how many full boxes does the machine make in a minute?

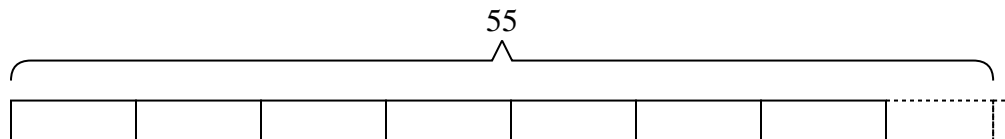


6. _____

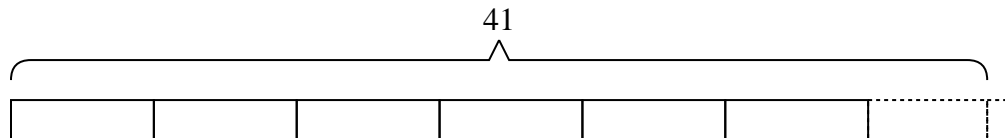


Solve each problem.

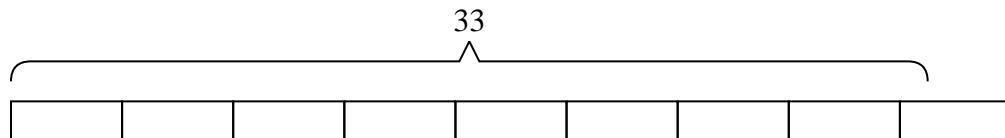
- 1) At the carnival, {seven} friends bought {fifty-five} tickets. If they wanted to split all the tickets so each friend got the same amount, how many more tickets would they need to buy?



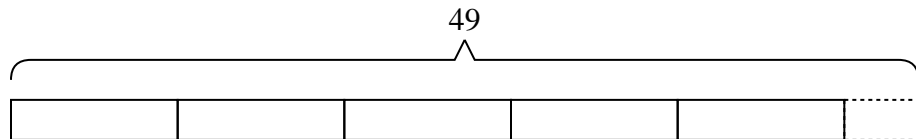
- 2) A container can hold {six} orange slices. If a company had {forty-one} orange slices to put into containers, how many more slices would they need to fill up the last container?



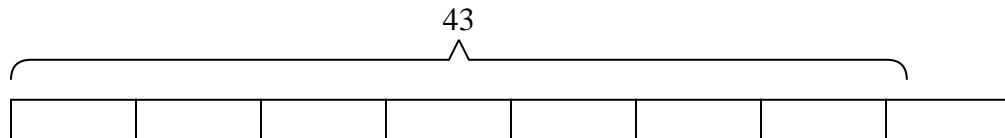
- 3) Jerry was trying to beat his old score of {thirty-three} points in a video game. If he scores exactly {four} points each round, how many rounds would he need to play to beat his old score?



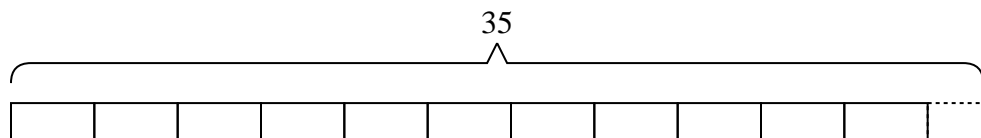
- 4) A vat of orange juice was {forty-nine} pints. If you wanted to pour the vat into {nine} glasses with the same amount in each glass, how many pints would be in each glass?



- 5) A movie theater needed {forty-three} popcorn buckets. If each package has {six} buckets in it, how many packages will they need to buy?



- 6) A machine in a candy company creates {thirty-five} pieces of candy a minute. If a small box of candy has {three} pieces in it how many full boxes does the machine make in a minute?



Answers

1. 1

2. 1

3. 9

4. 5

5. 8

6. 11