



Solve each problem using a tape diagram.

Answers

1) A school principal was looking over grades. In math 29 students scored a C. 2 times as many students scored a B. And 3 times as many students scored an A as scored a B. How many students scored an A, B or C?

1. \_\_\_\_\_

2) On week 1 a football player jogged for 22 minutes. On week 2 he jogged for 3 times as long. On week 3 he jogged for 2 times as long as he jogged on week 2. How many minute did he jog across all 3 weeks?

2. \_\_\_\_\_

3. \_\_\_\_\_

3) In one day a restaurant used 43 knives. They also used 2 as many forks as they used knives. And 3 times as many spoons as forks. How many utensils do they use in a day?

4. \_\_\_\_\_

5. \_\_\_\_\_


4) On week 1 a football player jogged for 33 minutes. On week 2 he jogged for 6 times as long. On week 3 he jogged for 8 times as long as he jogged on week 2. How many minute did he jog across all 3 weeks?

5) A school principal was looking over grades. In math 41 students scored a C. 4 times as many students scored a B. And 9 times as many students scored an A as scored a B. How many students scored an A, B or C?




Solve each problem using a tape diagram.

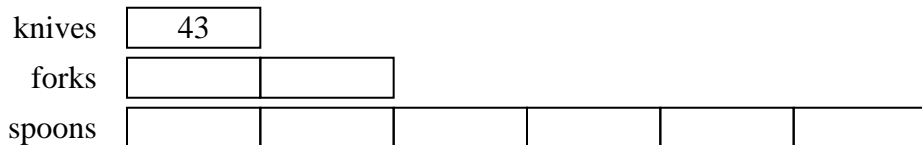
- 1) A school principal was looking over grades. In math 29 students scored a C. 2 times as many students scored a B. And 3 times as many students scored an A as scored a B. How many students scored an A, B or C?



- 2) On week 1 a football player jogged for 22 minutes. On week 2 he jogged for 3 times as long. On week 3 he jogged for 2 times as long as he jogged on week 2. How many minutes did he jog across all 3 weeks?



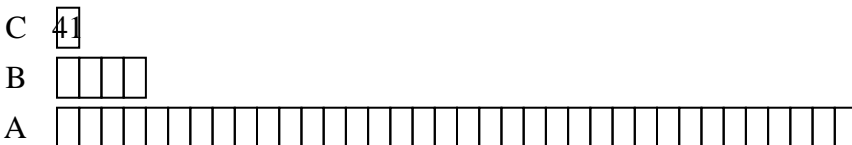
- 3) In one day a restaurant used 43 knives. They also used 2 as many forks as they used knives. And 3 times as many spoons as forks. How many utensils do they use in a day?



- 4) On week 1 a football player jogged for 33 minutes. On week 2 he jogged for 6 times as long. On week 3 he jogged for 8 times as long as he jogged on week 2. How many minutes did he jog across all 3 weeks?



- 5) A school principal was looking over grades. In math 41 students scored a C. 4 times as many students scored a B. And 9 times as many students scored an A as scored a B. How many students scored an A, B or C?



Answers

1. **261**  
 2. **220**  
 3. **387**  
 4. **1815**  
 5. **1681**