



Solve each problem using a tape diagram.

Answers

1) For a party Billy bought 77 cupcakes. If 36 were eaten, how many cupcakes would Billy have left?

1. \_\_\_\_\_

2) Isabel had 68 pieces of candy. 41 pieces are chocolate and the rest are sugary. How many pieces of candy does Isabel have that are sugary?

2. \_\_\_\_\_

3) A store had 52 sodas on Monday. If they sold 41 of them on Tuesday, how many would they have left on Wednesday?

3. \_\_\_\_\_

4) For Halloween Paul got 54 pounds of candy. If he gave 42 pounds to Debby, how many pounds would he have left?

4. \_\_\_\_\_

5) A pet store had 56 gerbils. If they sold 34 of them, how many would they have left?

5. \_\_\_\_\_

6) A museum had 88 paintings. If they got rid of 42 of them, how many pictures would they have left?

6. \_\_\_\_\_

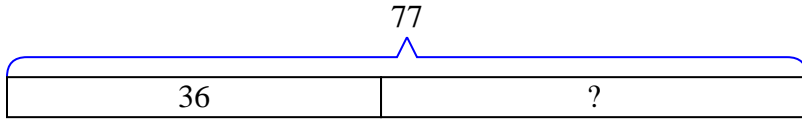
7) George had 50 cherries. He ate 10 of them. How many cherries does George have left?

7. \_\_\_\_\_

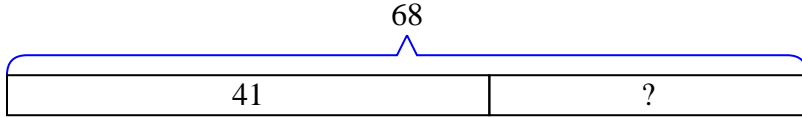


Solve each problem using a tape diagram.

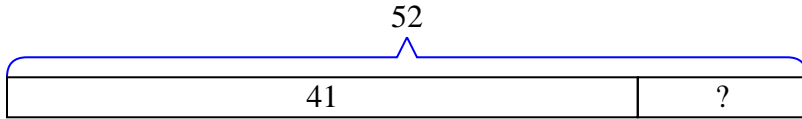
- 1) For a party Billy bought 77 cupcakes. If 36 were eaten, how many cupcakes would Billy have left?



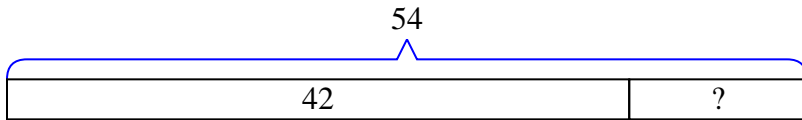
- 2) Isabel had 68 pieces of candy. 41 pieces are chocolate and the rest are sugary. How many pieces of candy does Isabel have that are sugary?



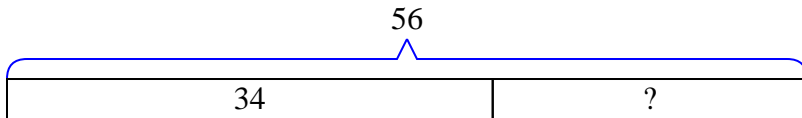
- 3) A store had 52 sodas on Monday. If they sold 41 of them on Tuesday, how many would they have left on Wednesday?



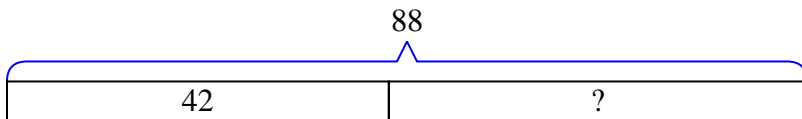
- 4) For Halloween Paul got 54 pounds of candy. If he gave 42 pounds to Debby, how many pounds would he have left?



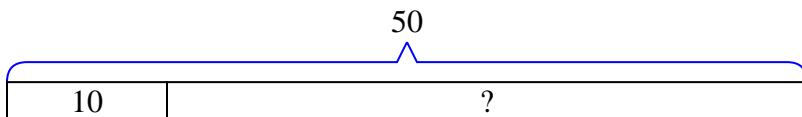
- 5) A pet store had 56 gerbils. If they sold 34 of them, how many would they have left?



- 6) A museum had 88 paintings. If they got rid of 42 of them, how many pictures would they have left?



- 7) George had 50 cherries. He ate 10 of them. How many cherries does George have left?

Answers1. 412. 273. 114. 125. 226. 467. 40