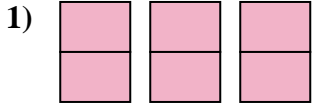


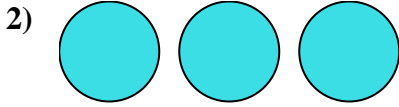


Write the shaded amount as a fraction.

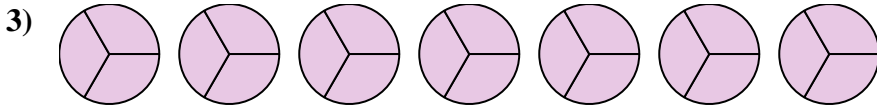
Answers



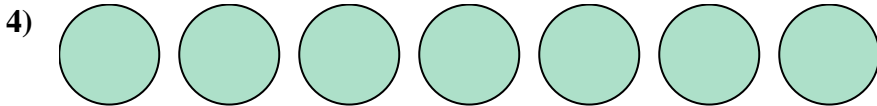
1. _____



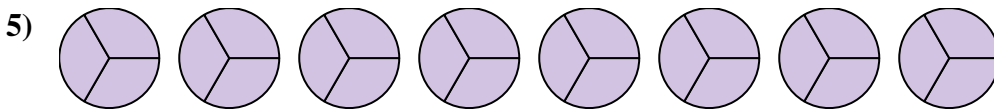
2. _____



3. _____



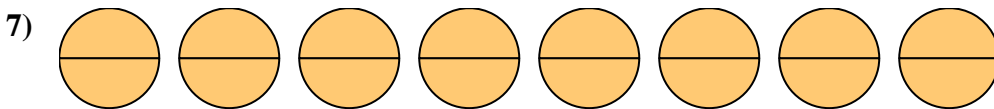
5. _____



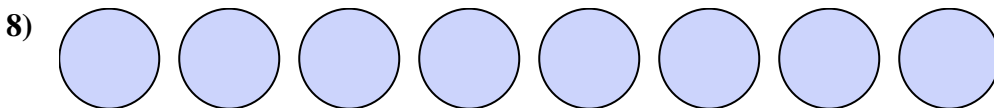
6. _____



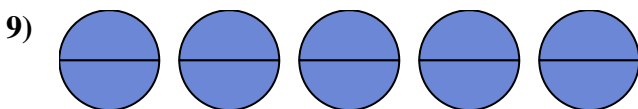
7. _____



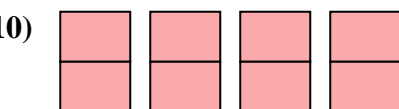
8. _____



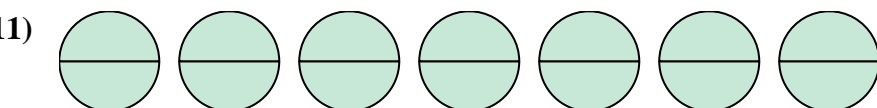
9. _____




10. _____



11. _____



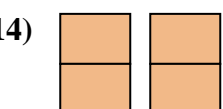
12. _____



13. _____

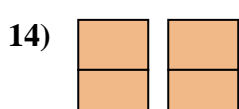

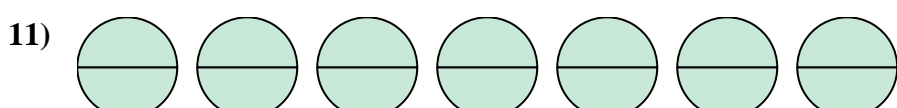
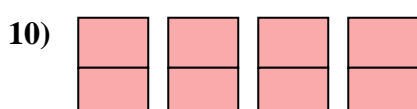
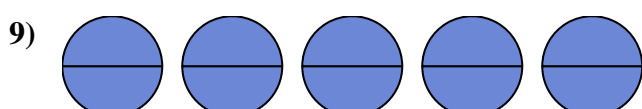
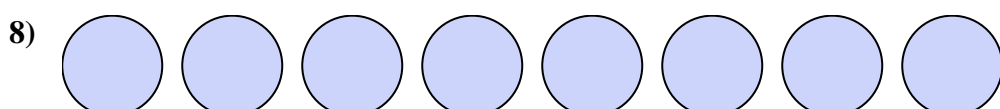
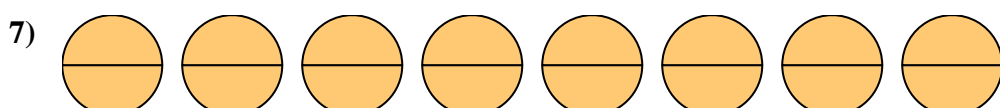
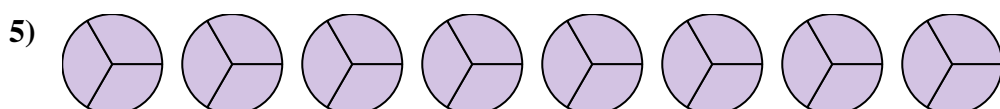

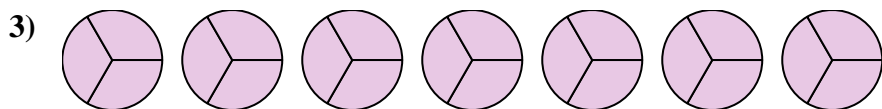

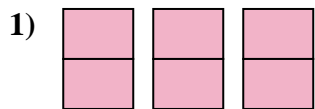


14. _____





Write the shaded amount as a fraction.



Answers

1. $\frac{6}{2}$

2. $\frac{3}{1}$

3. $\frac{21}{3}$

4. $\frac{7}{1}$

5. $\frac{24}{3}$

6. $\frac{12}{3}$

7. $\frac{16}{2}$

8. $\frac{8}{1}$

9. $\frac{10}{2}$

10. $\frac{8}{2}$

11. $\frac{14}{2}$

12. $\frac{4}{1}$

13. $\frac{6}{1}$

14. $\frac{4}{2}$