



Determine if the angle shown is acute, obtuse, right or straight.

Answers

Ex)

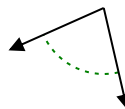


Ex. **acute**

1)



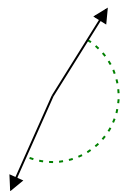
2)



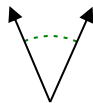
1. _____

2. _____

3)



4)



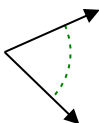
5)



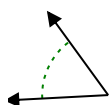
3. _____

4. _____

6)



7)



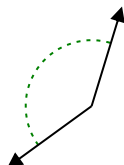
8)



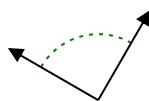
6. _____

7. _____

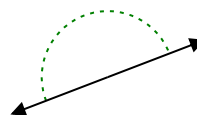
9)



10)



11)



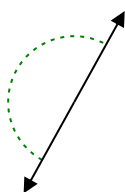
9. _____

10. _____

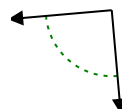
12)



13)



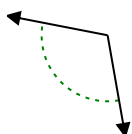
14)



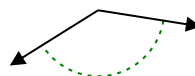
11. _____

12. _____

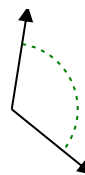
15)



16)



17)



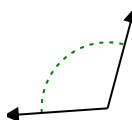
13. _____

14. _____

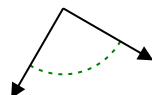
15. _____

16. _____

18)



19)



20)



17. _____

18. _____

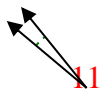
19. _____

20. _____

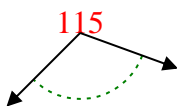


Determine if the angle shown is acute, obtuse, right or straight.

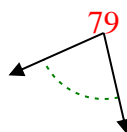
Ex)



1)



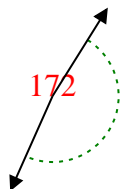
2)



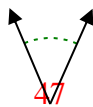
Answers

Ex. **acute**

3)



4)



5)



1. **obtuse**

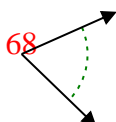
2. **acute**

3. **obtuse**

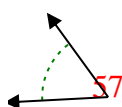
4. **acute**

5. **acute**

6)



7)



8)



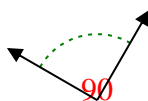
6. **acute**

7. **acute**

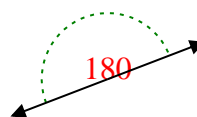
9)



10)



11)



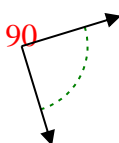
8. **acute**

9. **obtuse**

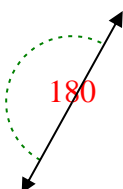
10. **right**

11. **straight**

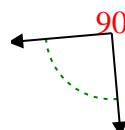
12)



13)



14)

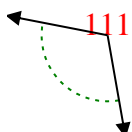


12. **right**

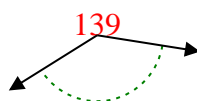
13. **straight**

14. **right**

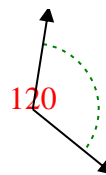
15)



16)



17)

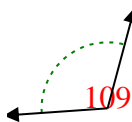


15. **obtuse**

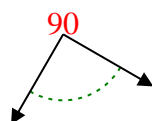
16. **obtuse**

17. **obtuse**

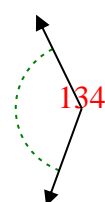
18)



19)



20)



18. **obtuse**

19. **right**

20. **obtuse**