




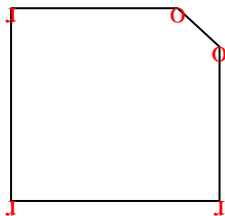


Count the number of Acute, Obtuse and Right angles inside each shape.

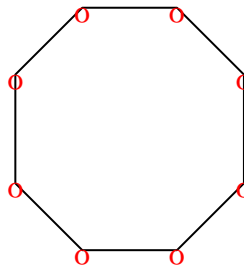
Ex)



1)



2)



Answers

Ex. 0 0 4

1. 0 2 3

2. 0 8 0

3. 2 2 0

4. 1 3 1

5. 0 4 2

6. 3 0 0

7. 2 0 1

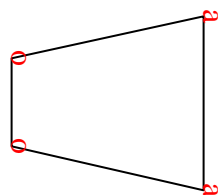
8. 1 4 0

9. 0 7 0

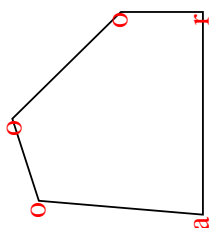
10. 1 2 1

11. 2 2 0

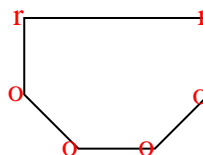
3)



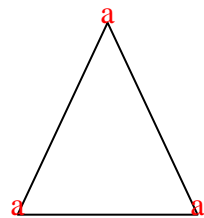
4)



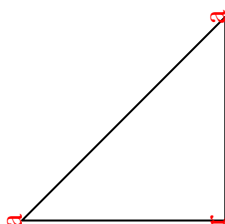
5)



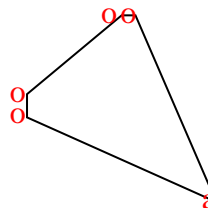
6)



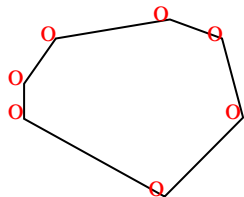
7)



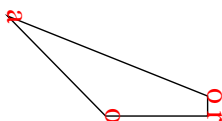
8)



9)



10)



11)

