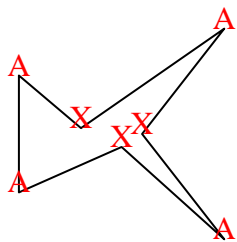




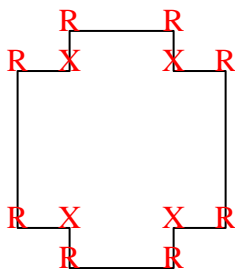


Count the number of Acute, Obtuse, Right and Reflex angles in each shape.

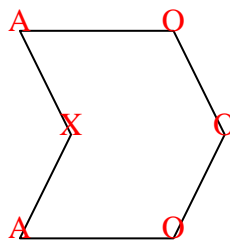
Ex)



1)



2)



Answers

Ex. 4 0 0 3

1. 0 0 8 4

2. 2 3 0 1

3. 2 2 0 0

4. 2 1 1 1

5. 2 1 4 4

6. 5 0 0 5

7. 0 3 2 0

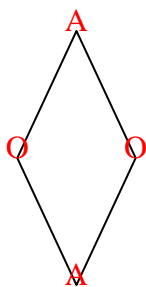
8. 4 2 0 4

9. 2 2 0 0

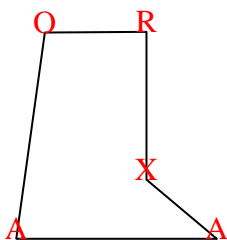
10. 0 0 4 0

11. 4 1 0 3

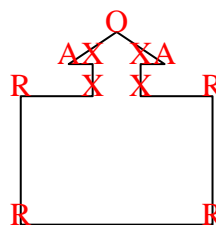
3)



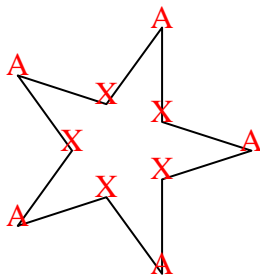
4)



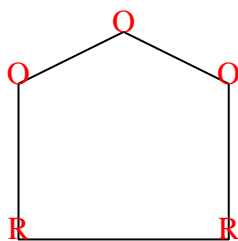
5)



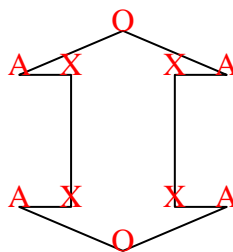
6)



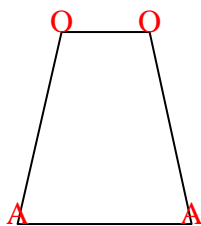
7)



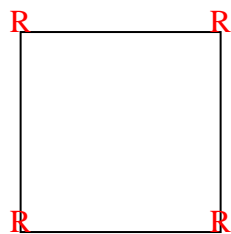
8)



9)



10)



11)

