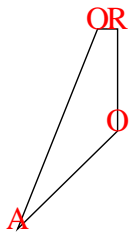




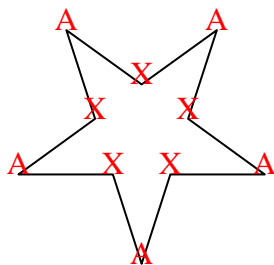


Count the number of Acute, Obtuse, Right and Reflex angles in each shape.

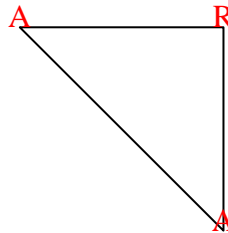
Ex)



1)



2)



Answers

Ex. 1 2 1 0

1. 5 0 0 5

2. 2 0 1 0

3. 0 8 0 0

4. 2 2 0 0

5. 4 0 0 3

6. 0 2 3 0

7. 1 3 4 3

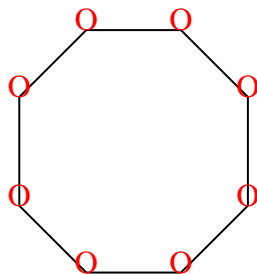
8. 1 1 2 0

9. 0 0 4 0

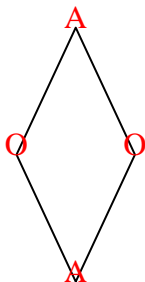
10. 4 2 0 4

11. 0 0 6 0

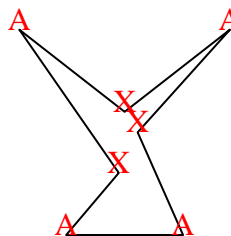
3)



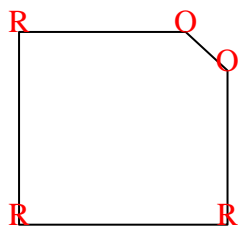
4)



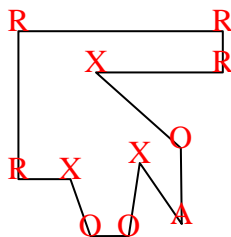
5)



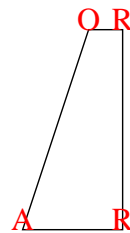
6)




7)



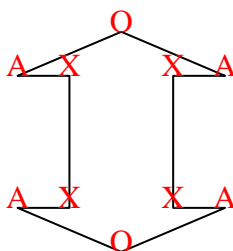
8)



9)



10)



11)

