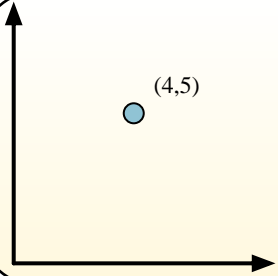


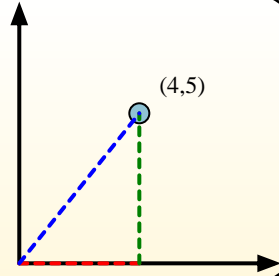


Calculate the angle of the circle relative to (0,0).

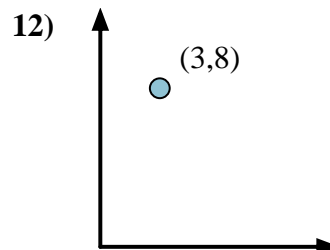
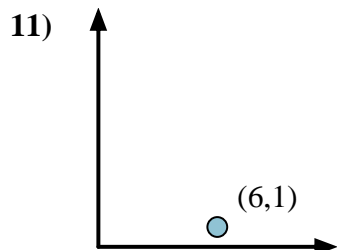
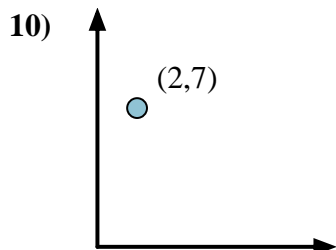
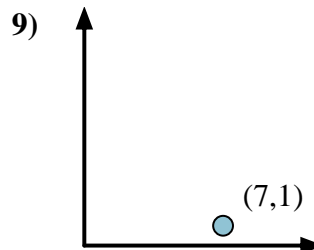
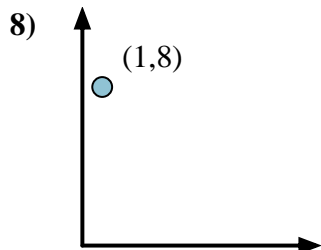
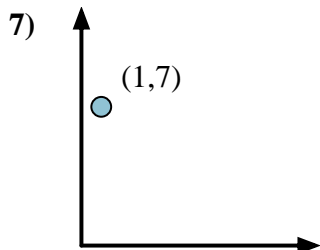
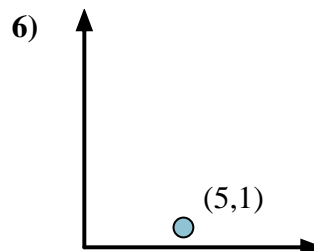
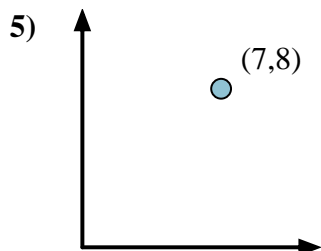
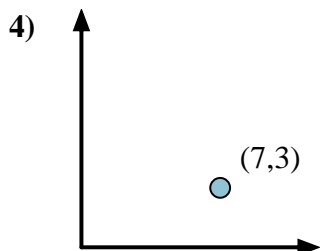
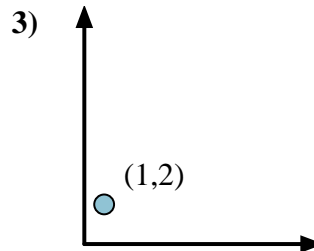
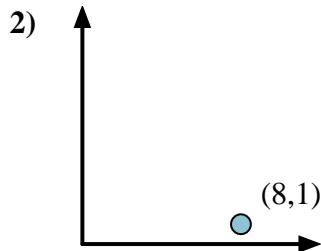
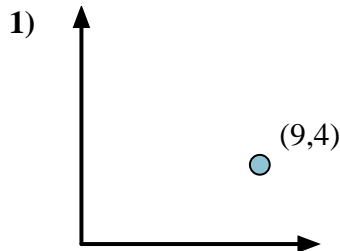


First find the slope.
 $(y_2 - y_1) \div (x_2 - x_1) = m$
 $(5 - 0) \div (4 - 0) = 1.25$

Then find the arc tangent (aka. inverse tangent) of the slope.
 $\arctan(1.25) = 51.34^\circ$



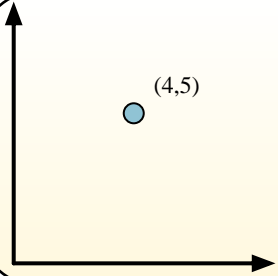
Answers



1. _____
2. _____
3. _____
4. _____
5. _____
6. _____
7. _____
8. _____
9. _____
10. _____
11. _____
12. _____

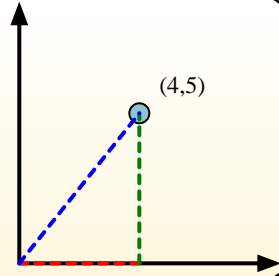


Calculate the angle of the circle relative to (0,0).

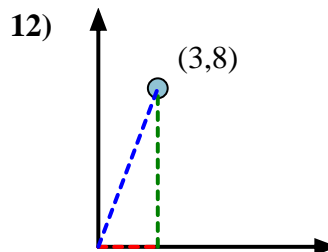
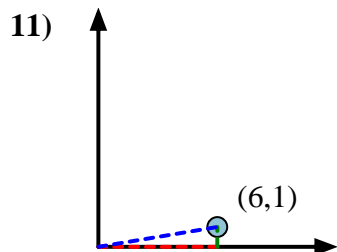
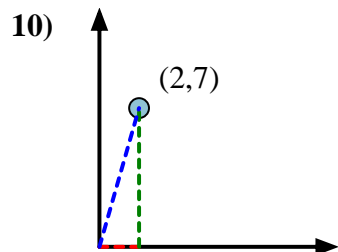
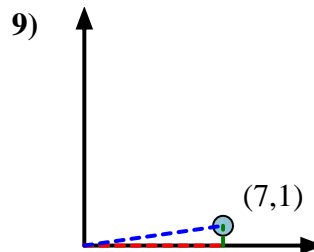
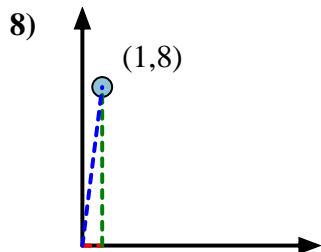
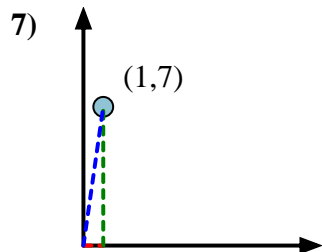
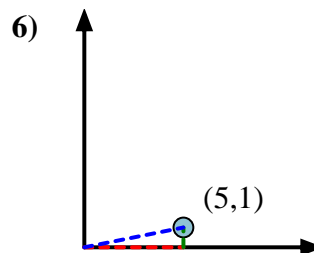
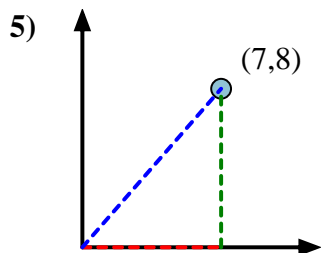
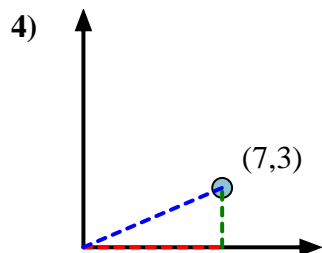
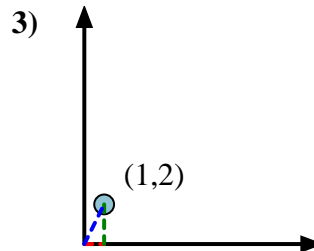
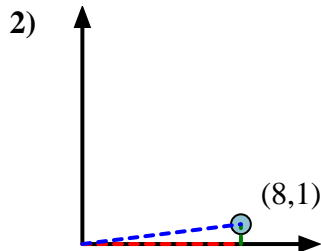
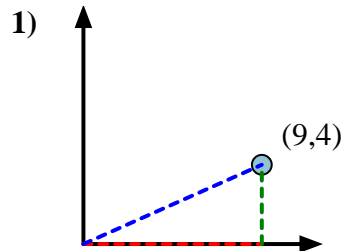


First find the slope.
 $(y_2 - y_1) \div (x_2 - x_1) = m$
 $(5 - 0) \div (4 - 0) = 1.25$

Then find the arc tangent (aka. inverse tangent) of the slope.
 $\arctan(1.25) = 51.34^\circ$



Answers



1. **23.96**

2. **7.13**

3. **63.43**

4. **23.20**

5. **48.81**

6. **11.31**

7. **81.87**

8. **82.87**

9. **8.13**

10. **74.05**

11. **9.46**

12. **69.44**