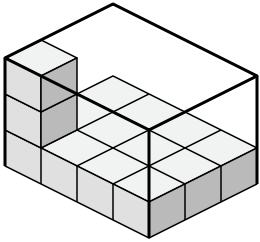




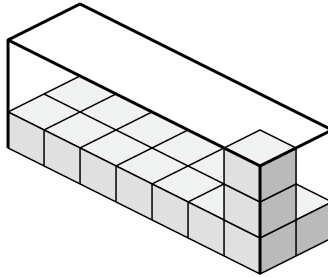
Create an expression to determine the volume of each box.

Answers

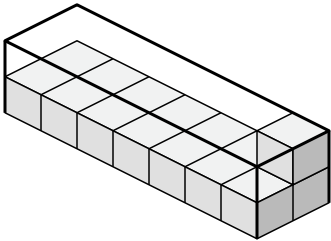
1)



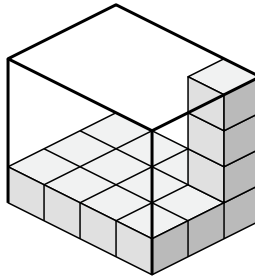
2)



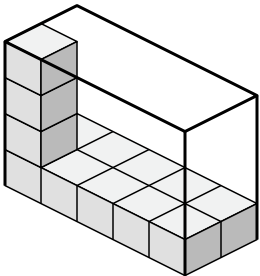
3)



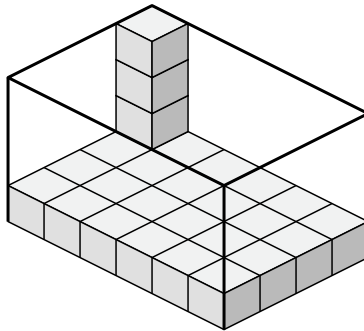
4)



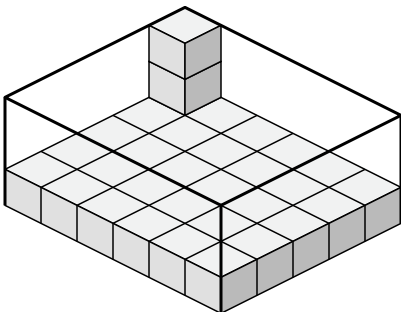
5)



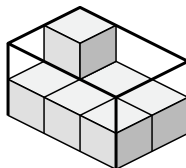
6)



7)



8)



1. _____

2. _____

3. _____

4. _____

5. _____

6. _____

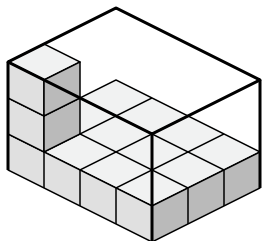
7. _____

8. _____

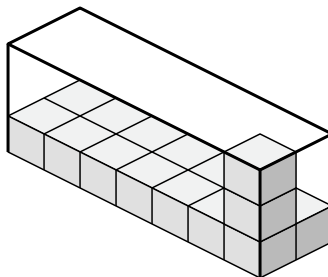


Create an expression to determine the volume of each box.

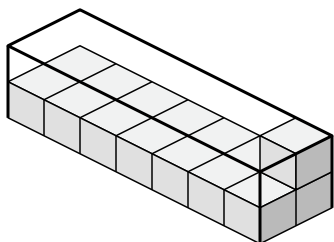
1)



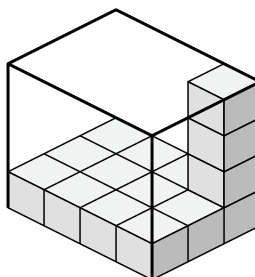
2)



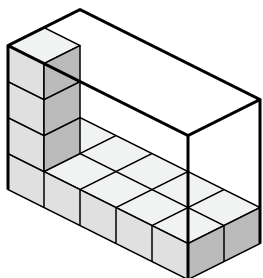
3)



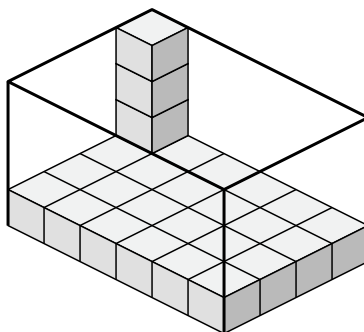
4)



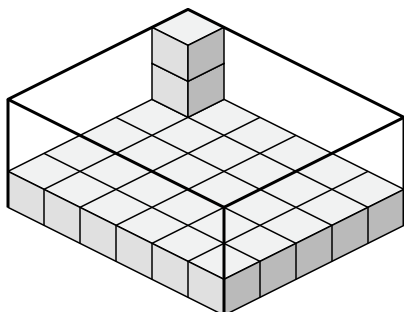
5)



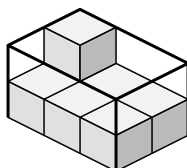
6)



7)



8)



Answers

1. 4×3×3

2. 7×2×3

3. 7×2×2

4. 4×3×4

5. 5×2×4

6. 6×4×4

7. 6×5×3

8. 3×2×2