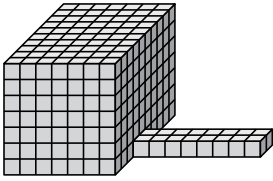




Find the total volume of each figure. Measurement is in cm (not to scale).

Answers

1)



1. _____

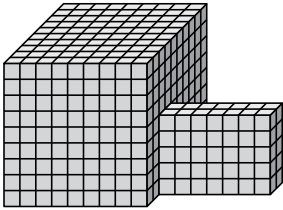
2. _____

3. _____

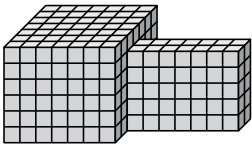
4. _____

5. _____

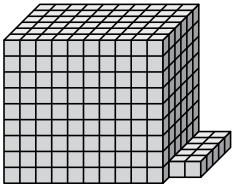
2)



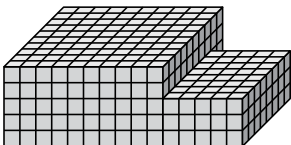
3)



4)



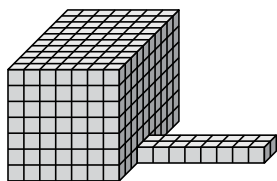
5)





Find the total volume of each figure. Measurement is in cm (not to scale).

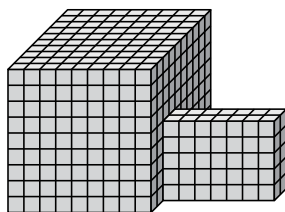
1)



$$7 \times 10 \times 7 = 490$$

$$8 \times 2 \times 1 = 16$$

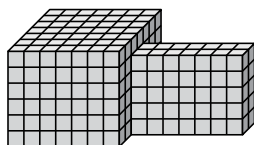
2)



$$9 \times 10 \times 9 = 810$$

$$7 \times 2 \times 5 = 70$$

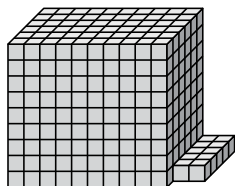
3)



$$7 \times 7 \times 6 = 294$$

$$7 \times 2 \times 5 = 70$$

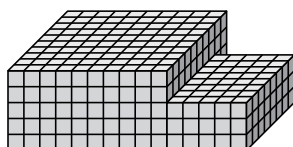
4)



$$10 \times 6 \times 9 = 540$$

$$2 \times 5 \times 1 = 10$$

5)



$$10 \times 10 \times 5 = 500$$

$$5 \times 8 \times 3 = 120$$

Answers

1. 506 cm³

2. 880 cm³

3. 364 cm³

4. 550 cm³

5. 620 cm³