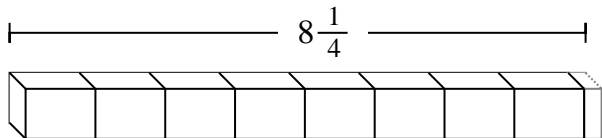




Determine the number of smaller fractional pieces that can be made from the larger piece.

Answers

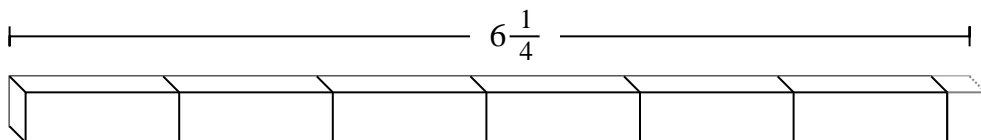
Ex)



Ex. **33**

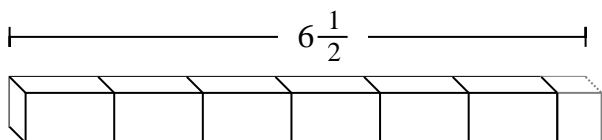
1. \_\_\_\_\_

1)



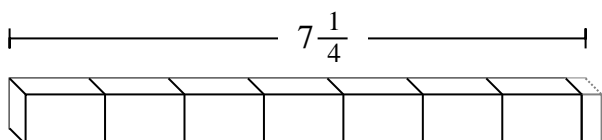
2. \_\_\_\_\_

2)



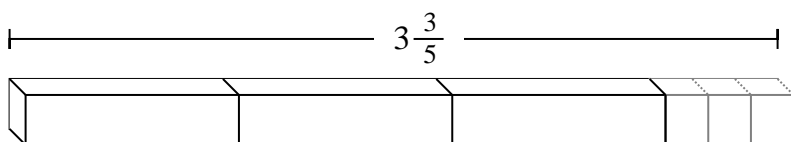
3. \_\_\_\_\_

3)



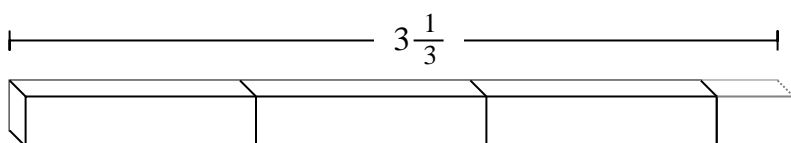
4. \_\_\_\_\_

4)



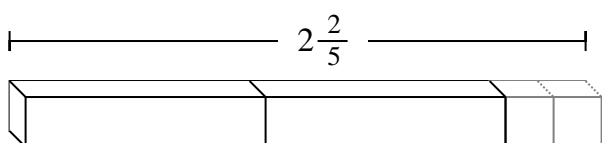
5. \_\_\_\_\_

5)



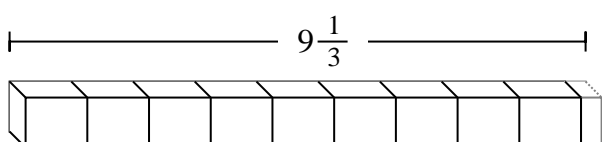
6. \_\_\_\_\_

6)



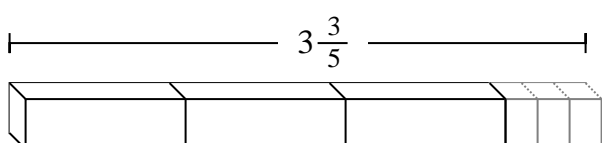
7. \_\_\_\_\_

7)



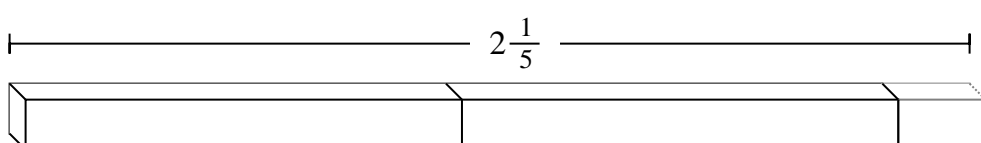
8. \_\_\_\_\_

8)



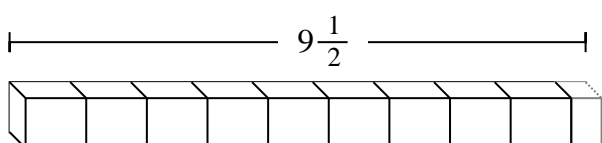
9. \_\_\_\_\_

9)



10. \_\_\_\_\_

10)





Determine the number of smaller fractional pieces that can be made from the larger piece.

Answers

Ex)  $8\frac{1}{4}$

1)  $6\frac{1}{4}$

2)  $6\frac{1}{2}$

3)  $7\frac{1}{4}$

4)  $3\frac{3}{5}$

5)  $3\frac{1}{3}$

6)  $2\frac{2}{5}$

7)  $9\frac{1}{3}$

8)  $3\frac{3}{5}$

9)  $2\frac{1}{5}$

10)  $9\frac{1}{2}$

- Ex. 33
1. 25
2. 13
3. 29
4. 18
5. 10
6. 12
7. 28
8. 18
9. 11
10. 19