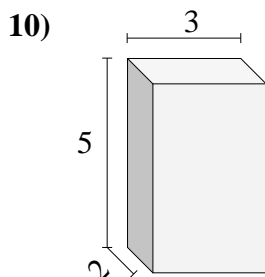
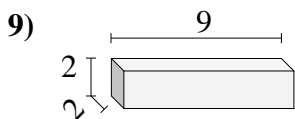
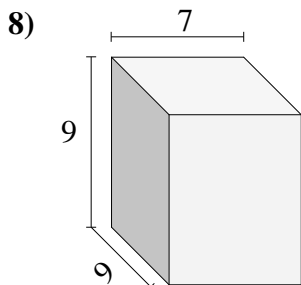
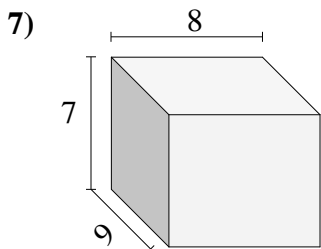
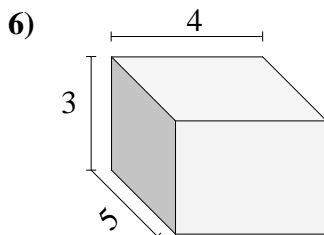
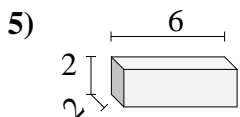
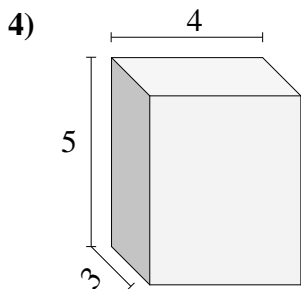
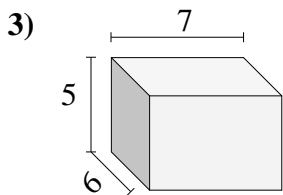
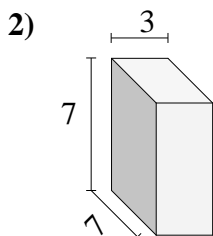
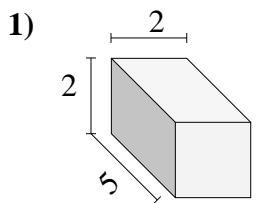




Find the volume of each of the rectangular prisms. Measured in cm (not to scale).

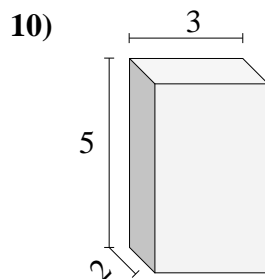
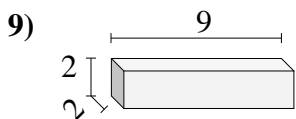
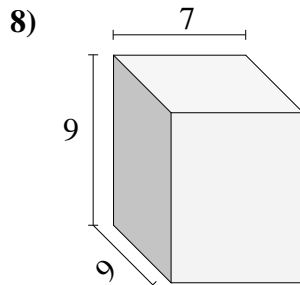
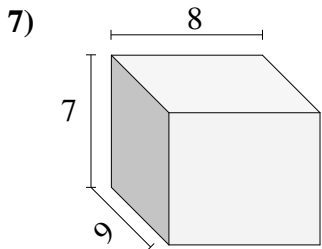
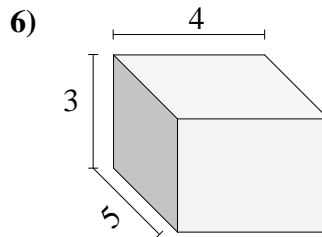
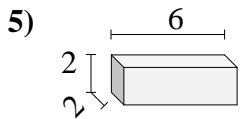
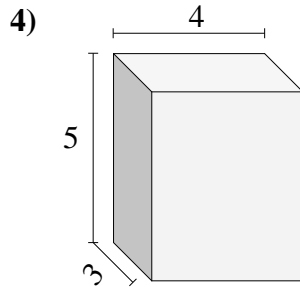
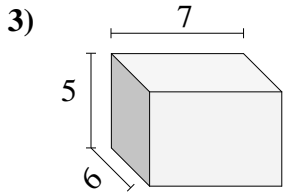
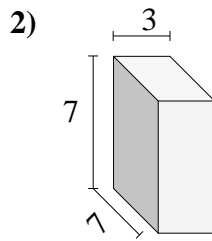
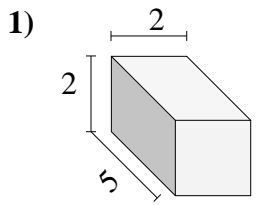


Answers

- 1. _____
- 2. _____
- 3. _____
- 4. _____
- 5. _____
- 6. _____
- 7. _____
- 8. _____
- 9. _____
- 10. _____



Find the volume of each of the rectangular prisms. Measured in cm (not to scale).



Answers

- 1. 20
- 2. 147
- 3. 210
- 4. 60
- 5. 24
- 6. 60
- 7. 504
- 8. 567
- 9. 36
- 10. 30