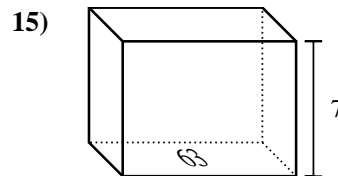
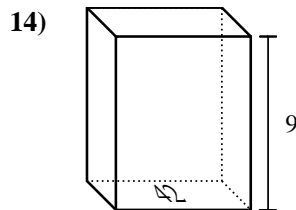
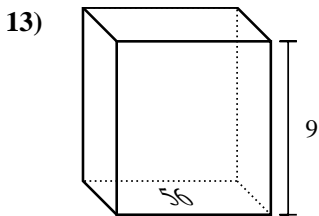
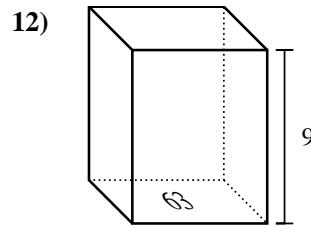
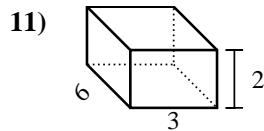
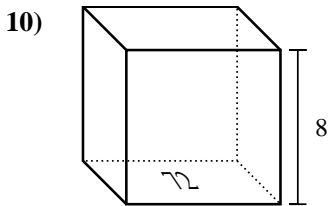
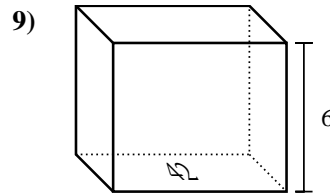
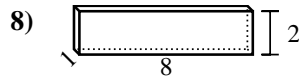
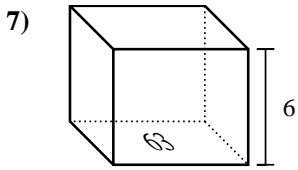
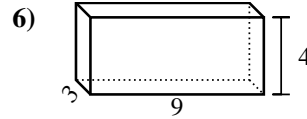
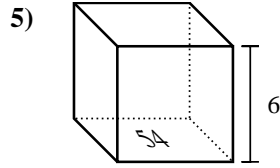
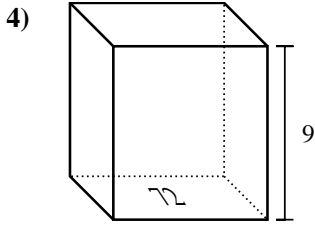
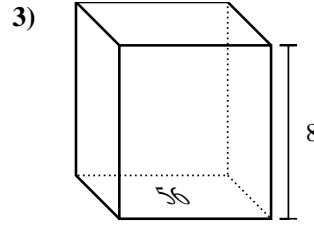
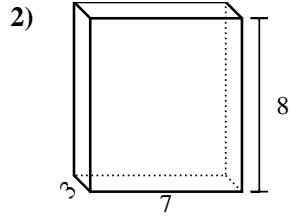
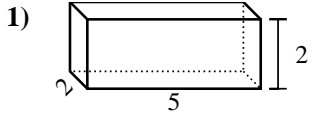




Find the volume of each rectangular prism. Units are in cm (not to scale). Remember $V = BH$ and $V = L \times W \times H$

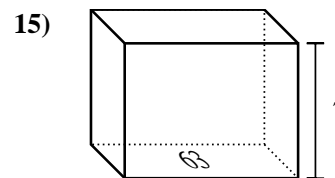
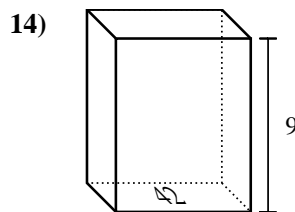
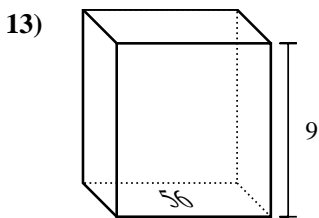
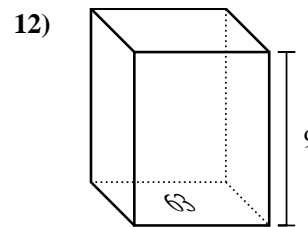
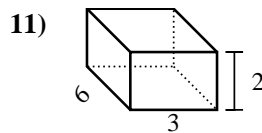
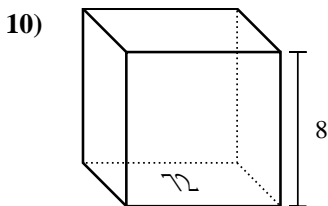
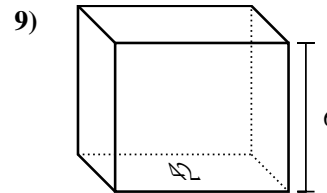
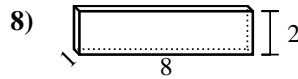
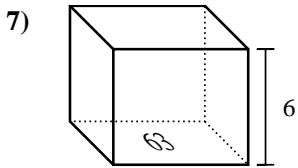
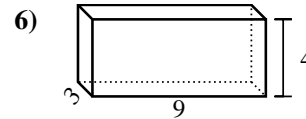
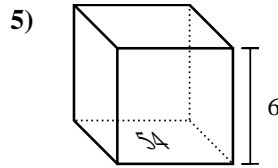
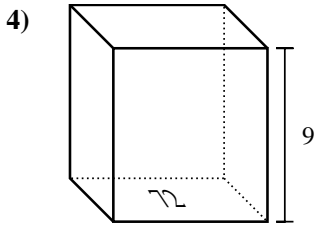
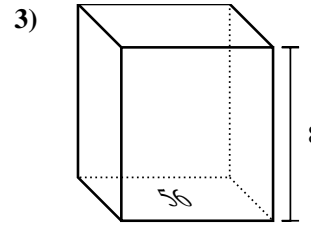
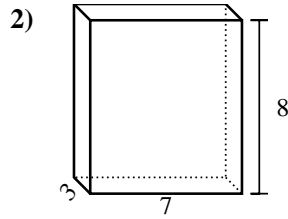
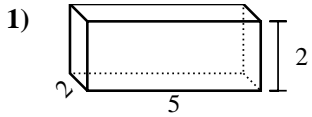


Answers

1. _____
2. _____
3. _____
4. _____
5. _____
6. _____
7. _____
8. _____
9. _____
10. _____
11. _____
12. _____
13. _____
14. _____
15. _____



Find the volume of each rectangular prism. Units are in cm (not to scale). Remember $V = BH$ and $V = L \times W \times H$



Answers

1. 20 cm³

2. 168 cm³

3. 448 cm³

4. 648 cm³

5. 324 cm³

6. 108 cm³

7. 378 cm³

8. 16 cm³

9. 252 cm³

10. 576 cm³

11. 36 cm³

12. 567 cm³

13. 504 cm³

14. 378 cm³

15. 441 cm³