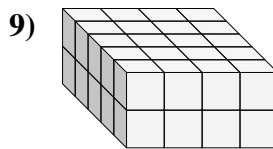
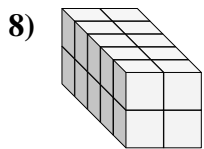
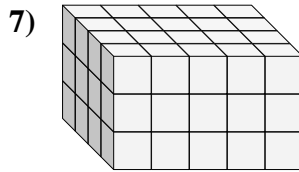
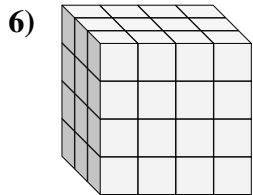
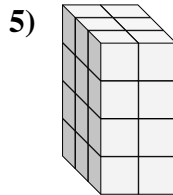
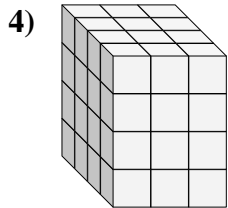
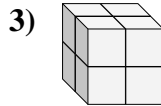
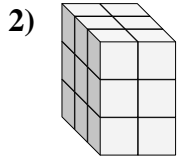
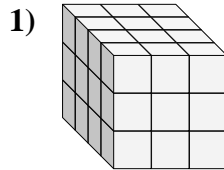
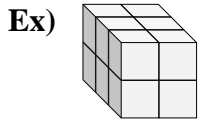




Find the length, width and height of the rectangular prism. Then find the volume.



Answers

Ex. 3 2 2 12

1. _____

2. _____

3. _____

4. _____

5. _____

6. _____

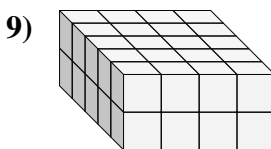
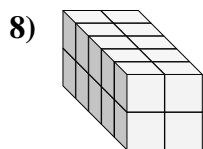
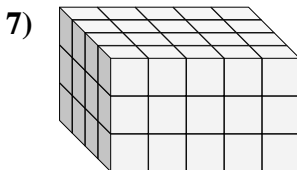
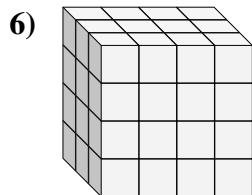
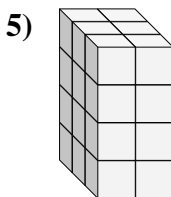
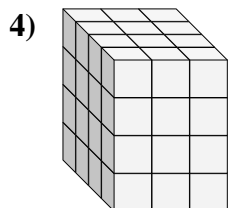
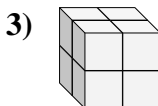
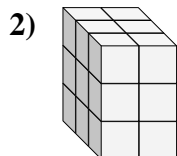
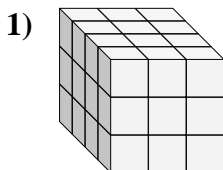
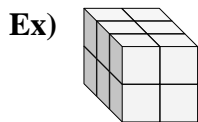
7. _____

8. _____

9. _____



Find the length, width and height of the rectangular prism. Then find the volume.



Answers

Ex. 3 2 2 12

1. 4 3 3 36

2. 3 2 3 18

3. 2 2 2 8

4. 4 3 4 48

5. 3 2 4 24

6. 3 4 4 48

7. 4 5 3 60

8. 5 2 2 20

9. 5 4 2 40