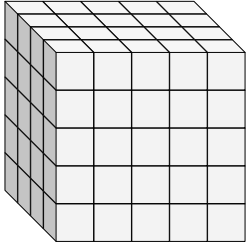


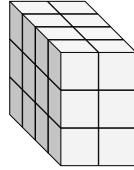


Find the length, width and height of the rectangular prism. Then find the volume.

Ex)



1)



Answers

Ex. 4 5 5 100

1. _____

2. _____

3. _____

4. _____

5. _____

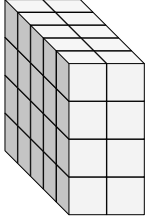
6. _____

7. _____

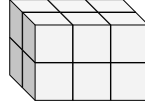
8. _____

9. _____

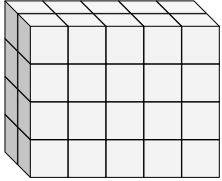
2)



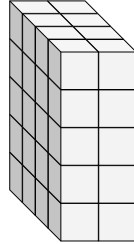
3)



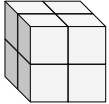
4)



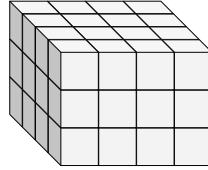
5)



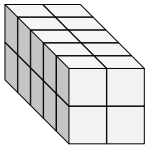
6)



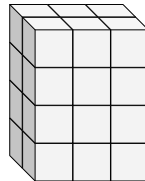
7)



8)

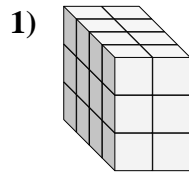
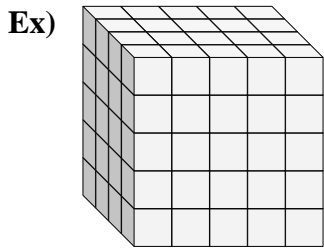


9)





Find the length, width and height of the rectangular prism. Then find the volume.



Answers
Ex. 4 5 5 100

1. 4 2 3 24

2. 5 2 4 40

3. 2 3 2 12

4. 2 5 4 40

5. 4 2 5 40

6. 2 2 2 8

7. 4 4 3 48

8. 5 2 2 20

9. 2 3 4 24

