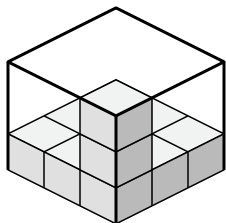


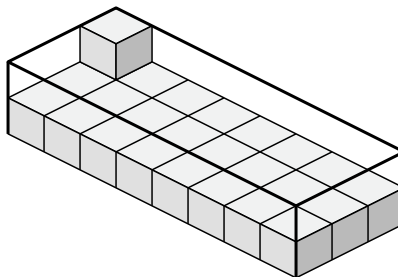


Determine the volume of each box. Each block is 1 cubic unit (u^3).

1)



2)



Answers

1. _____

2. _____

3. _____

4. _____

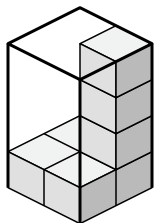
5. _____

6. _____

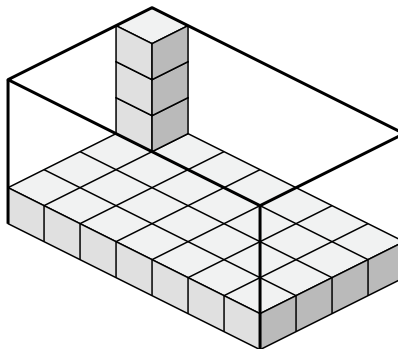
7. _____

8. _____

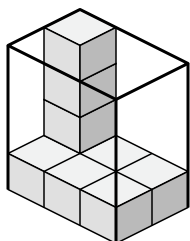
3)



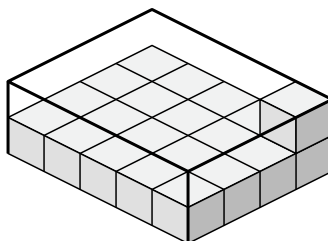
4)



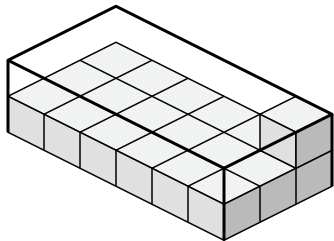
5)



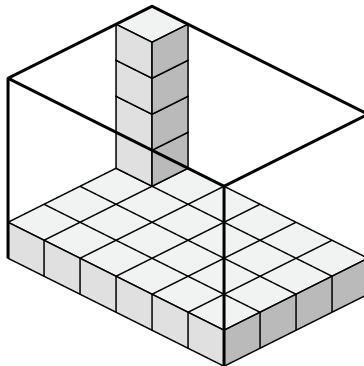
6)



7)



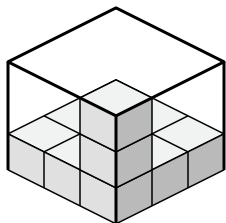
8)



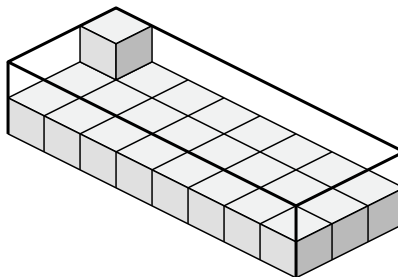


Determine the volume of each box. Each block is 1 cubic unit (u^3).

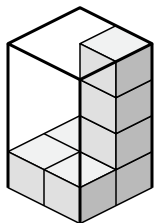
1)



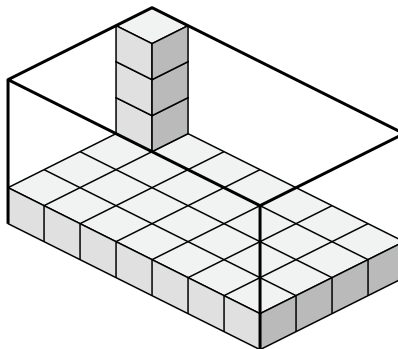
2)



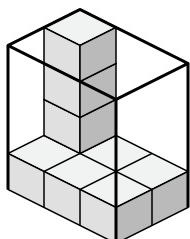
3)



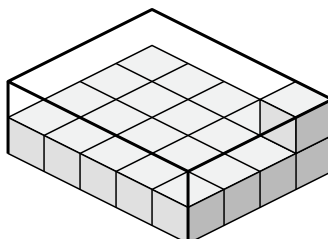
4)



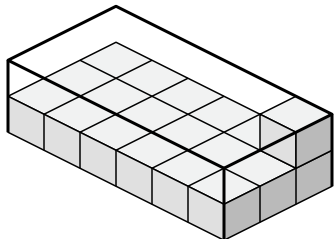
5)



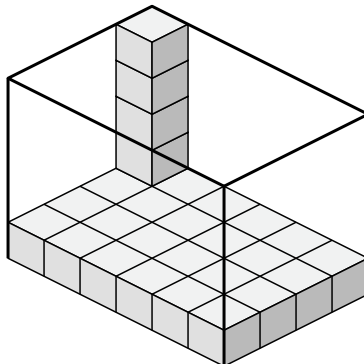
6)



7)



8)



Answers

1. 27 u^3

2. 48 u^3

3. 16 u^3

4. 112 u^3

5. 24 u^3

6. 40 u^3

7. 36 u^3

8. 120 u^3