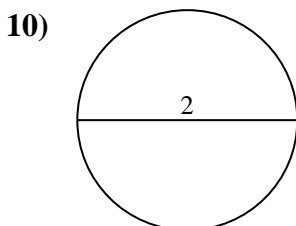
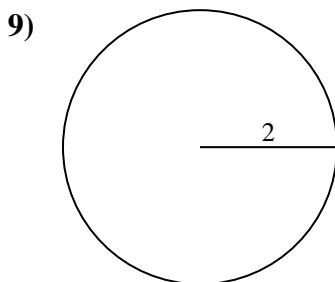
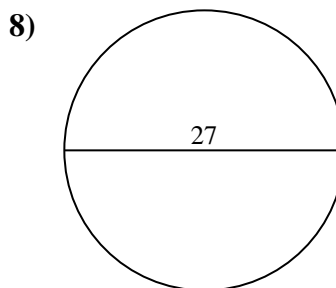
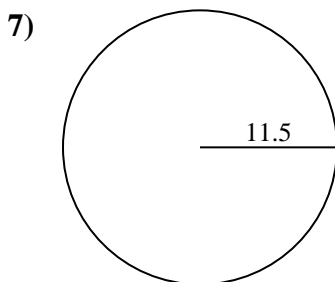
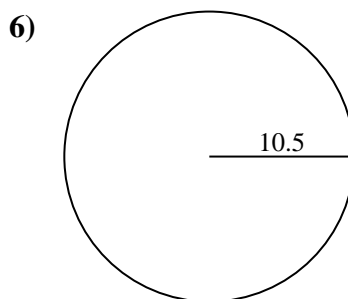
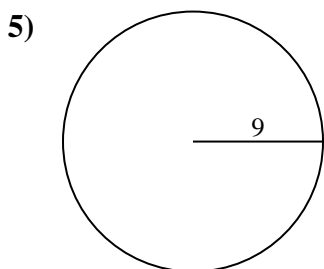
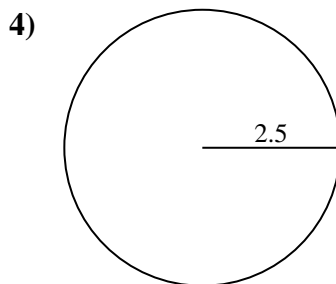
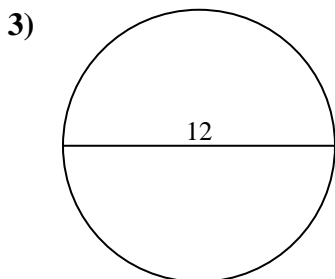
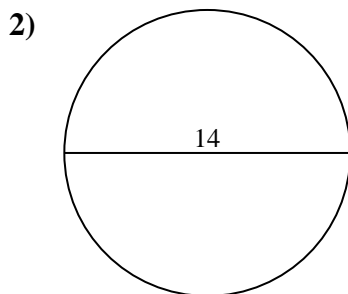
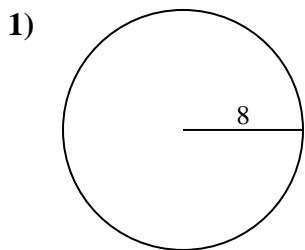




Find the area of the circle. Round to the nearest 10th.

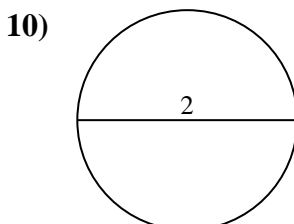
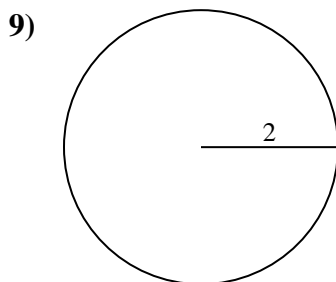
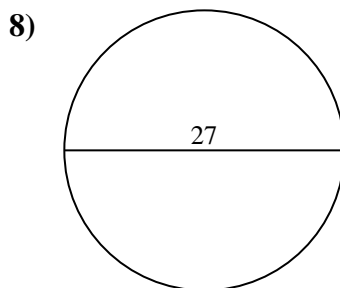
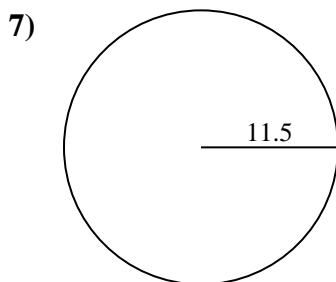
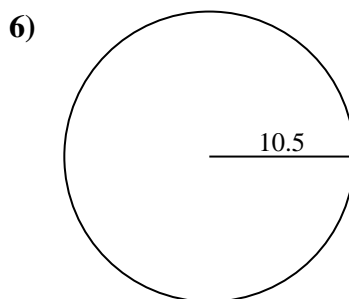
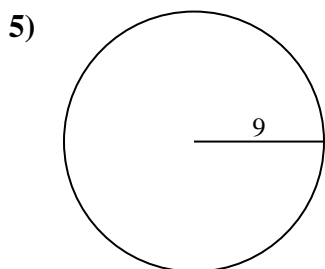
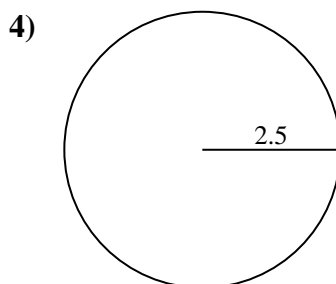
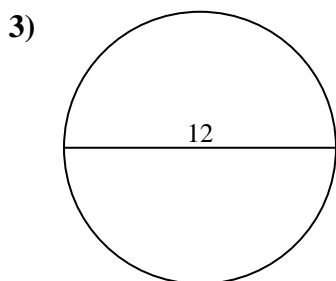
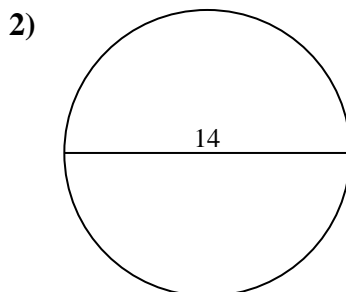
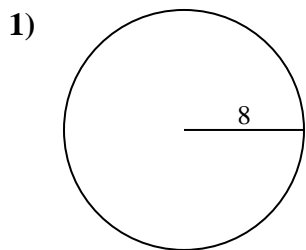
Answers



- 1. \_\_\_\_\_
- 2. \_\_\_\_\_
- 3. \_\_\_\_\_
- 4. \_\_\_\_\_
- 5. \_\_\_\_\_
- 6. \_\_\_\_\_
- 7. \_\_\_\_\_
- 8. \_\_\_\_\_
- 9. \_\_\_\_\_
- 10. \_\_\_\_\_



Find the area of the circle. Round to the nearest 10th.



Answers

- 1. 201.1
- 2. 153.9
- 3. 113.1
- 4. 19.6
- 5. 254.5
- 6. 346.4
- 7. 415.5
- 8. 572.6
- 9. 12.6
- 10. 3.1



Find the area of the circle. Round to the nearest 10th.

572.6	113.1	415.5	12.6	346.4
201.1	153.9	254.5	19.6	

Answers

1. \_\_\_\_\_
2. \_\_\_\_\_
3. \_\_\_\_\_
4. \_\_\_\_\_
5. \_\_\_\_\_
6. \_\_\_\_\_
7. \_\_\_\_\_
8. \_\_\_\_\_
9. \_\_\_\_\_

