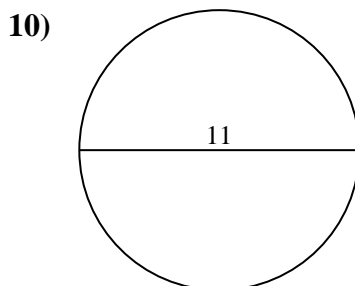
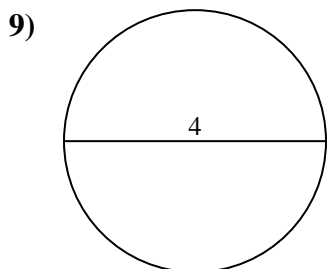
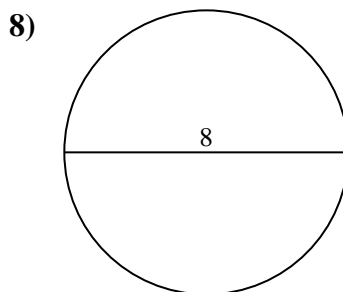
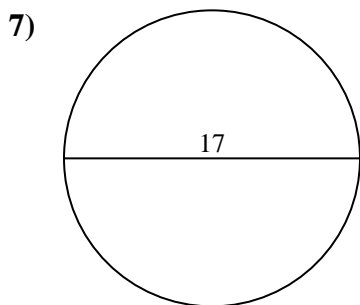
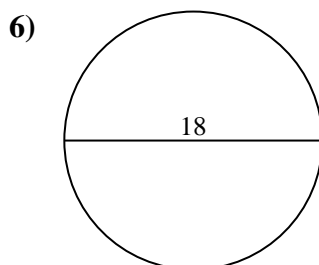
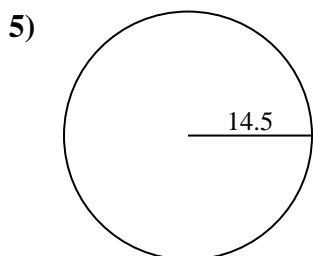
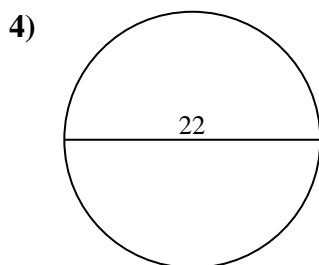
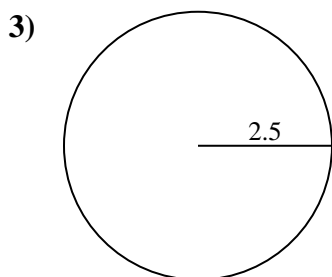
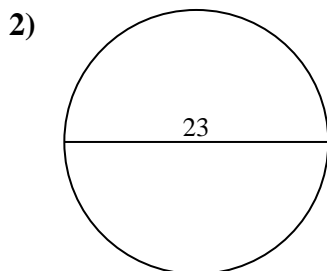
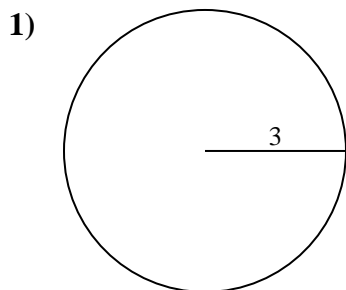




Find the area of the circle. Round to the nearest 10th.

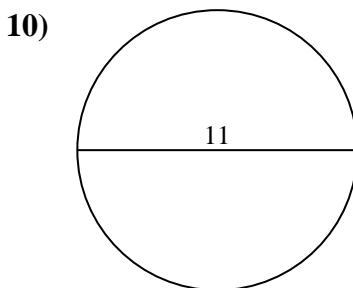
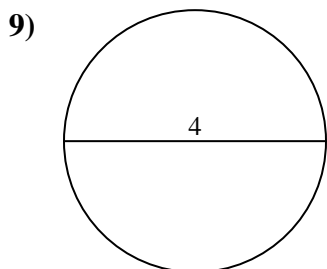
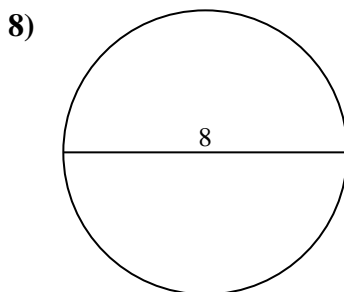
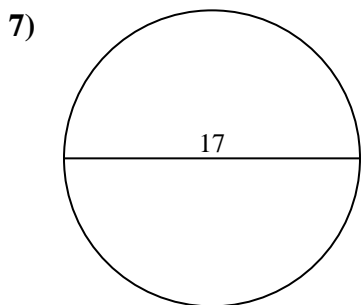
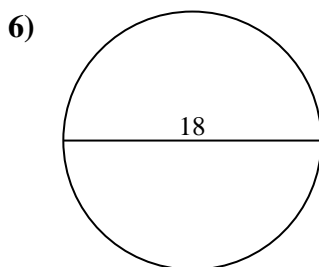
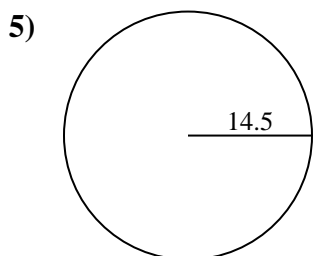
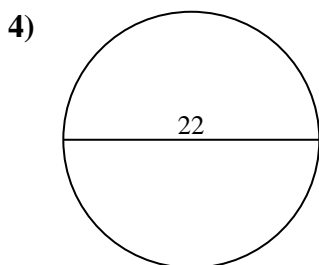
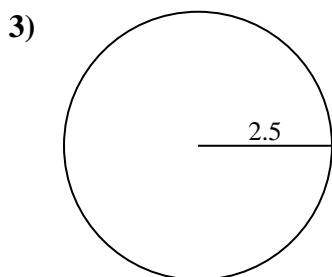
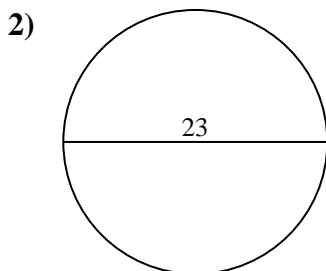
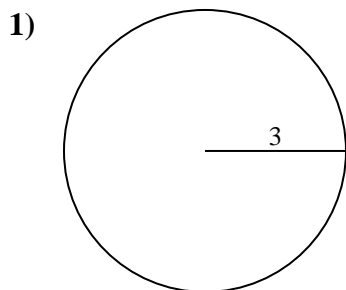
Answers



- 1. _____
- 2. _____
- 3. _____
- 4. _____
- 5. _____
- 6. _____
- 7. _____
- 8. _____
- 9. _____
- 10. _____



Find the area of the circle. Round to the nearest 10th.



Answers

- 1. 28.3
- 2. 415.5
- 3. 19.6
- 4. 380.1
- 5. 660.5
- 6. 254.5
- 7. 227
- 8. 50.3
- 9. 12.6
- 10. 95

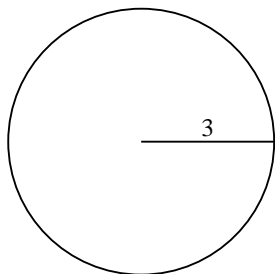


Find the area of the circle. Round to the nearest 10th.

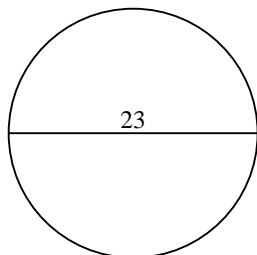
| | | | | |
|------|------|-------|-------|-----|
| 28.3 | 50.3 | 380.1 | 415.5 | 227 |
| 19.6 | 12.6 | 660.5 | 254.5 | |

Answers

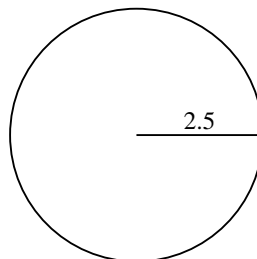
1)



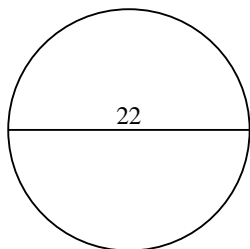
2)



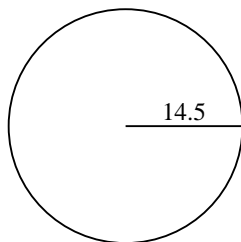
3)



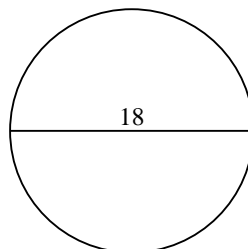
4)



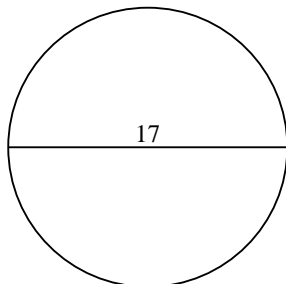
5)



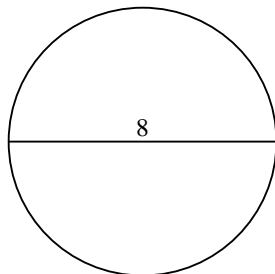
6)



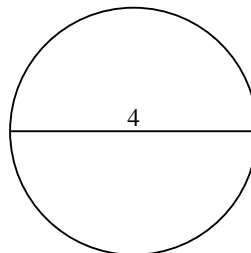
7)



8)



9)



1. _____
2. _____
3. _____
4. _____
5. _____
6. _____
7. _____
8. _____
9. _____