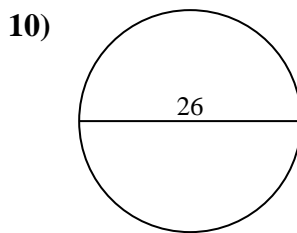
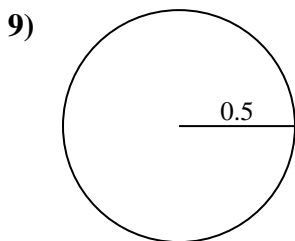
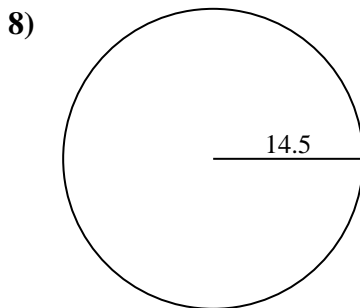
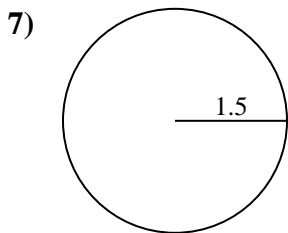
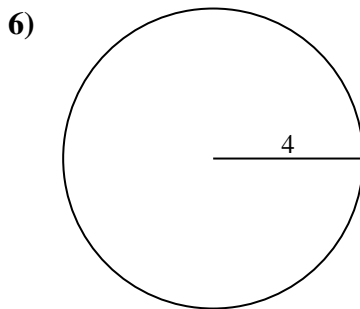
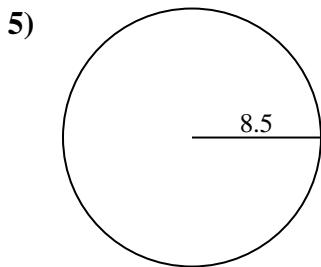
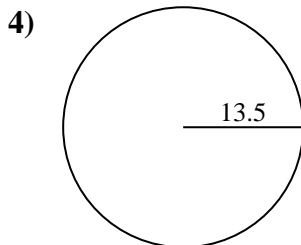
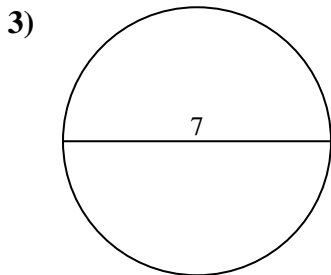
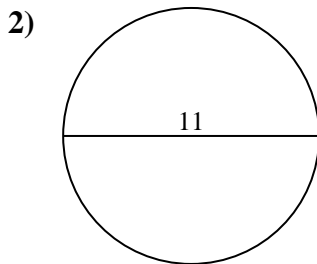
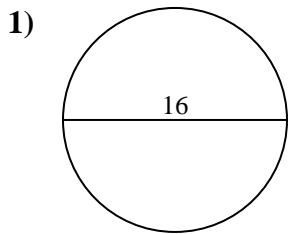




Find the circumference (in cm) of the circle. Circles are not to scale.

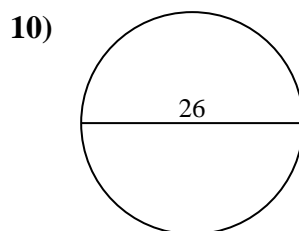
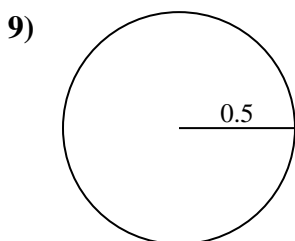
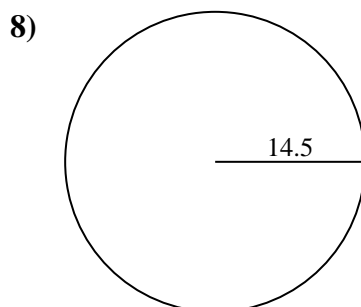
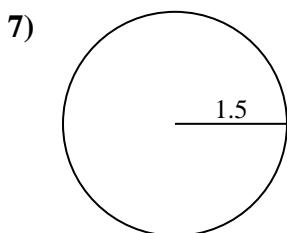
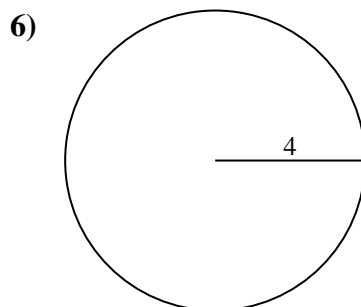
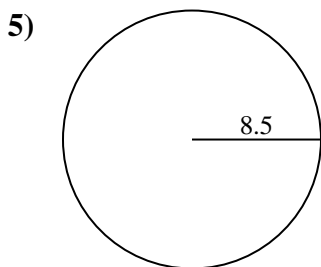
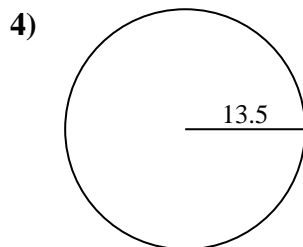
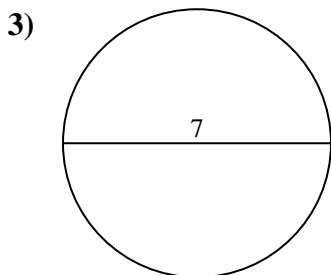
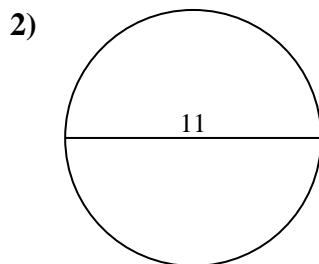
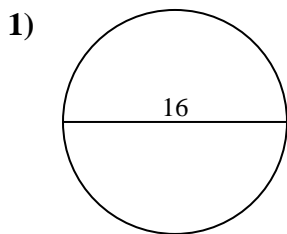


Answers

- 1. _____
- 2. _____
- 3. _____
- 4. _____
- 5. _____
- 6. _____
- 7. _____
- 8. _____
- 9. _____
- 10. _____



Find the circumference (in cm) of the circle. Circles are not to scale.

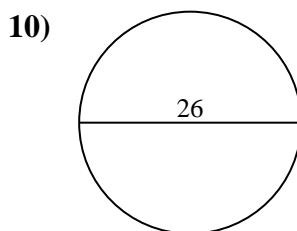
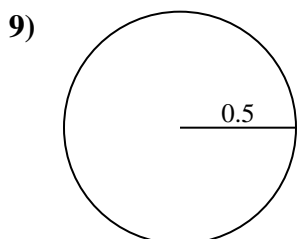
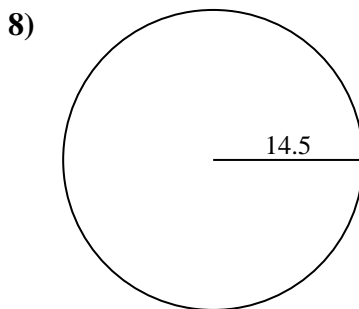
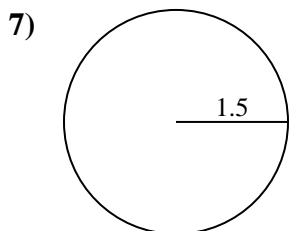
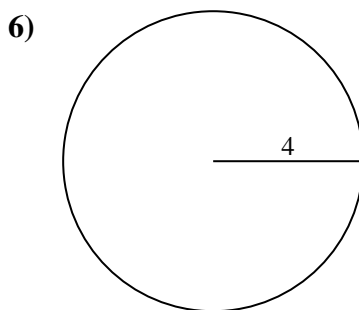
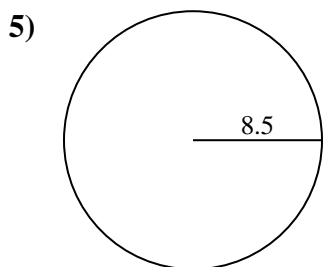
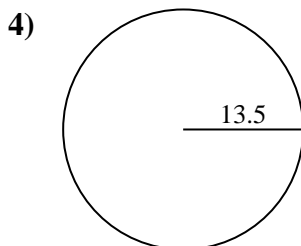
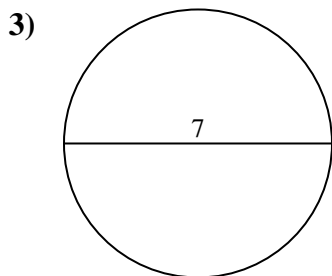
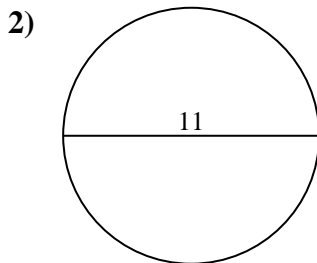
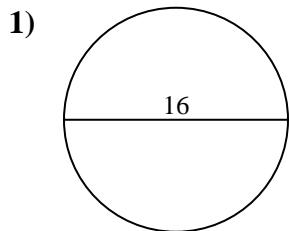
**Answers**

1. 50.27 cm
2. 34.56 cm
3. 21.99 cm
4. 84.82 cm
5. 53.41 cm
6. 25.13 cm
7. 9.42 cm
8. 91.11 cm
9. 3.14 cm
10. 81.68 cm



Find the circumference (in cm) of the circle. Circles are not to scale.

- | | | | | |
|----------|----------|----------|----------|----------|
| 25.13 cm | 81.68 cm | 53.41 cm | 91.11 cm | 50.27 cm |
| 34.56 cm | 9.42 cm | 21.99 cm | 3.14 cm | 84.82 cm |



Answers

1. _____
2. _____
3. _____
4. _____
5. _____
6. _____
7. _____
8. _____
9. _____
10. _____