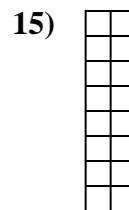

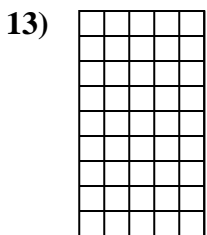
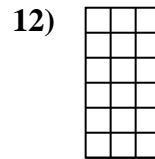
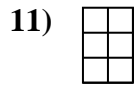
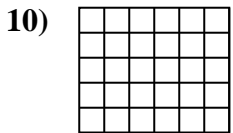


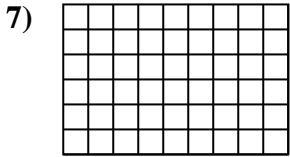

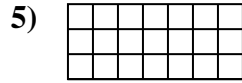
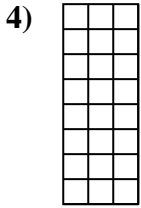
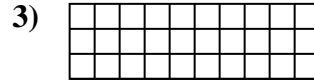
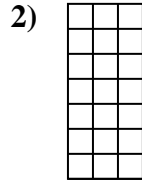





Determine the area. Each **SVGREPLACE** = 1 square unit ( $u^2$ ).

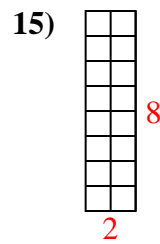
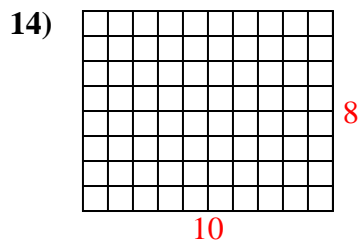
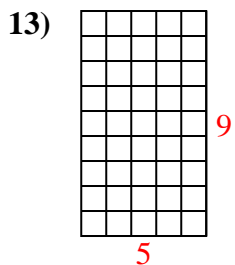
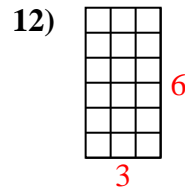
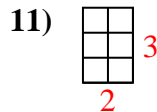
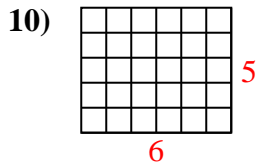
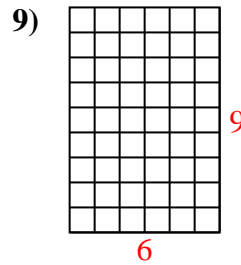
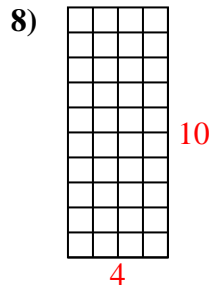
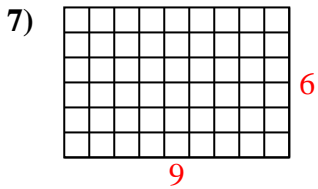
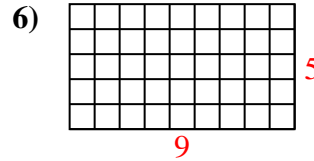
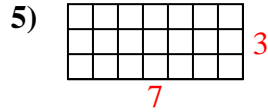
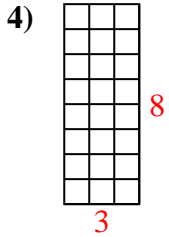
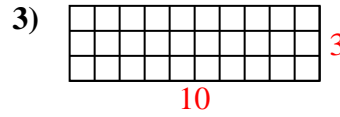
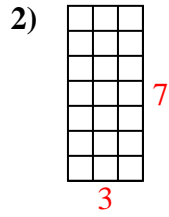
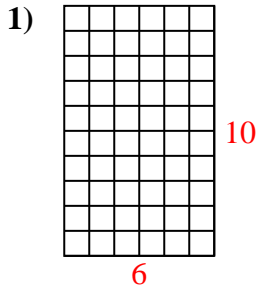
**Answers**



1. \_\_\_\_\_
2. \_\_\_\_\_
3. \_\_\_\_\_
4. \_\_\_\_\_
5. \_\_\_\_\_
6. \_\_\_\_\_
7. \_\_\_\_\_
8. \_\_\_\_\_
9. \_\_\_\_\_
10. \_\_\_\_\_
11. \_\_\_\_\_
12. \_\_\_\_\_
13. \_\_\_\_\_
14. \_\_\_\_\_
15. \_\_\_\_\_



Determine the area. Each **SVGREPLACE** = 1 square unit ( $u^2$ ).



Answers

1. 60  $u^2$

2. 21  $u^2$

3. 30  $u^2$

4. 24  $u^2$

5. 21  $u^2$

6. 45  $u^2$

7. 54  $u^2$

8. 40  $u^2$

9. 54  $u^2$

10. 30  $u^2$

11. 6  $u^2$

12. 18  $u^2$

13. 45  $u^2$

14. 80  $u^2$

15. 16  $u^2$