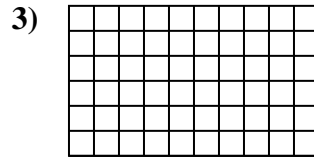
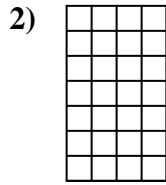
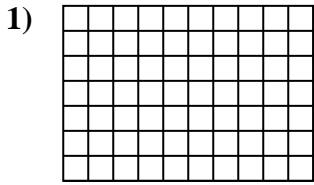




Determine the area. Each **SVGREPLACE** = 1 square unit ( $u^2$ ).

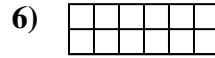
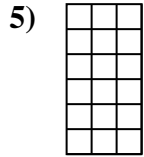
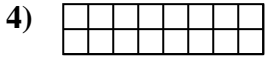
**Answers**



1. \_\_\_\_\_

2. \_\_\_\_\_

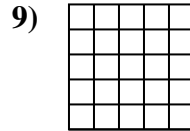
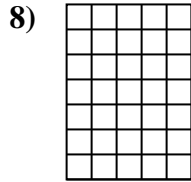
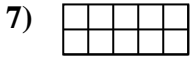
3. \_\_\_\_\_



4. \_\_\_\_\_

5. \_\_\_\_\_

6. \_\_\_\_\_


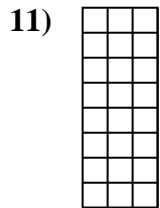
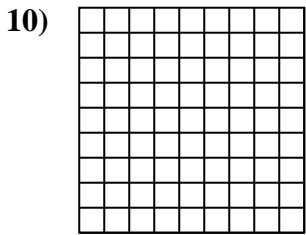


7. \_\_\_\_\_

8. \_\_\_\_\_

9. \_\_\_\_\_

10. \_\_\_\_\_



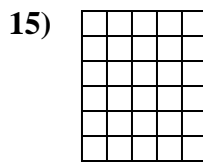
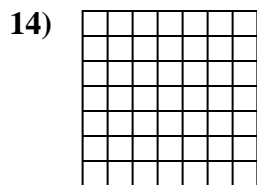
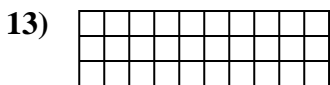
11. \_\_\_\_\_

12. \_\_\_\_\_

13. \_\_\_\_\_

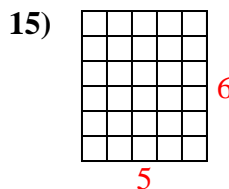
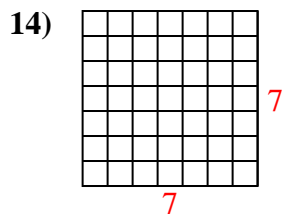
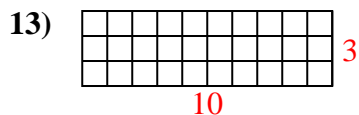
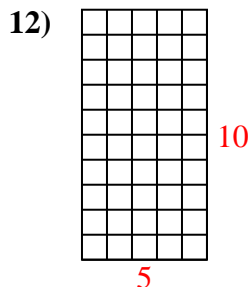
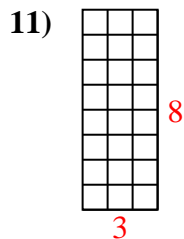
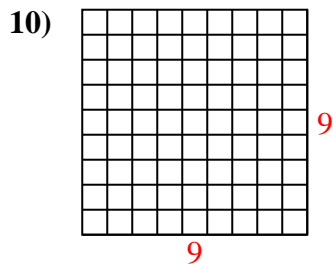
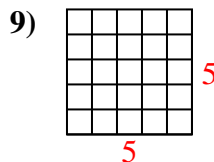
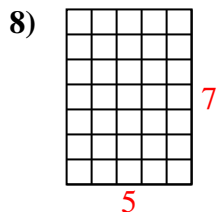
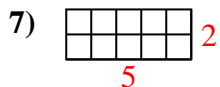
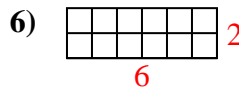
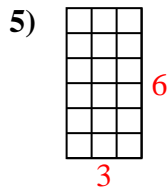
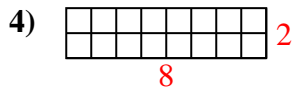
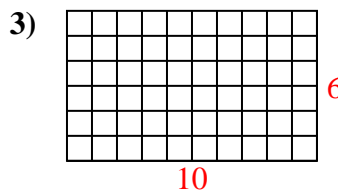
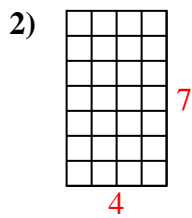
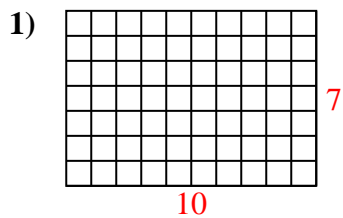
14. \_\_\_\_\_

15. \_\_\_\_\_





Determine the area. Each **SVGREPLACE** = 1 square unit ( $u^2$ ).



Answers

1. 70  $u^2$

2. 28  $u^2$

3. 60  $u^2$

4. 16  $u^2$

5. 18  $u^2$

6. 12  $u^2$

7. 10  $u^2$

8. 35  $u^2$

9. 25  $u^2$

10. 81  $u^2$

11. 24  $u^2$

12. 50  $u^2$

13. 30  $u^2$

14. 49  $u^2$

15. 30  $u^2$