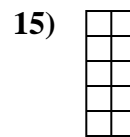
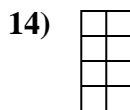
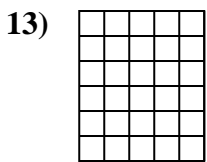
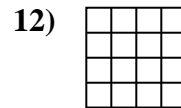
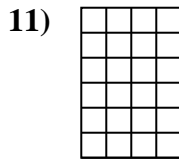
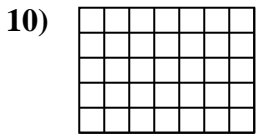
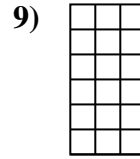


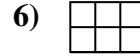
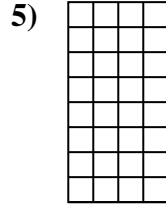
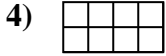
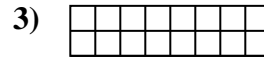

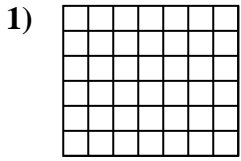




Determine the area. Each **SVGREPLACE** = 1 square unit ( $u^2$ ).

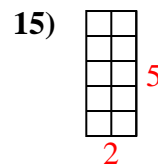
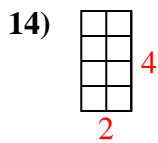
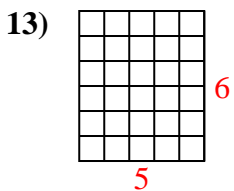
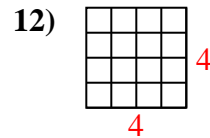
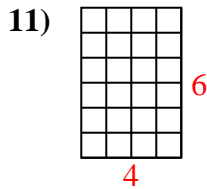
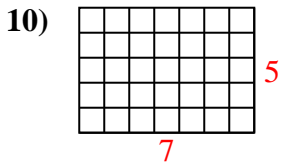
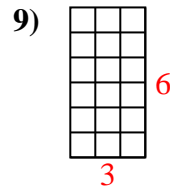
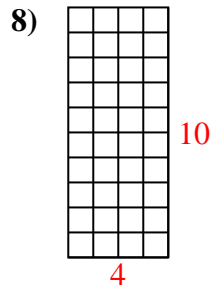
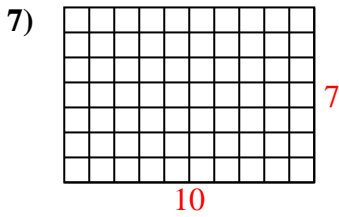
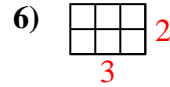
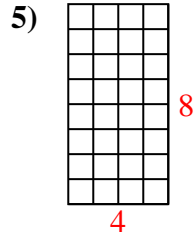
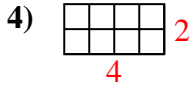
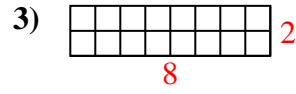
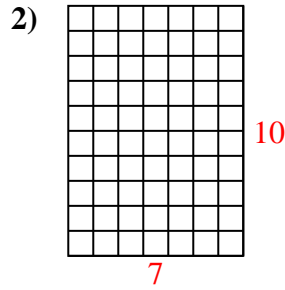
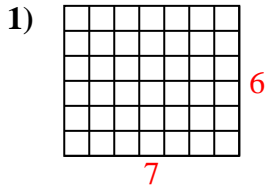
**Answers**



- 1. \_\_\_\_\_
- 2. \_\_\_\_\_
- 3. \_\_\_\_\_
- 4. \_\_\_\_\_
- 5. \_\_\_\_\_
- 6. \_\_\_\_\_
- 7. \_\_\_\_\_
- 8. \_\_\_\_\_
- 9. \_\_\_\_\_
- 10. \_\_\_\_\_
- 11. \_\_\_\_\_
- 12. \_\_\_\_\_
- 13. \_\_\_\_\_
- 14. \_\_\_\_\_
- 15. \_\_\_\_\_



Determine the area. Each **SVGREPLACE** = 1 square unit ( $u^2$ ).



Answers

1. 42  $u^2$

2. 70  $u^2$

3. 16  $u^2$

4. 8  $u^2$

5. 32  $u^2$

6. 6  $u^2$

7. 70  $u^2$

8. 40  $u^2$

9. 18  $u^2$

10. 35  $u^2$

11. 24  $u^2$

12. 16  $u^2$

13. 30  $u^2$

14. 8  $u^2$

15. 10  $u^2$