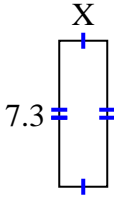


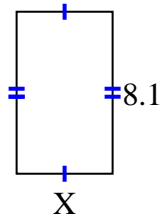


Find the value of X for each figure. Each figure is in centimeters (cm). Not to scale.

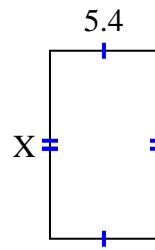
1) area = 17.52 cm^2



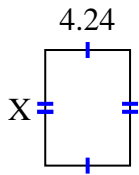
2) area = 38.88 cm^2



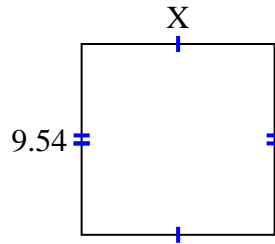
3) area = 50.76 cm^2



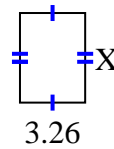
4) area = 24.5072 cm^2



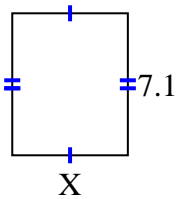
5) area = 92.061 cm^2



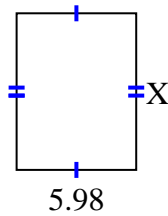
6) area = 14.6048 cm^2



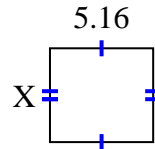
7) area = 41.038 cm^2



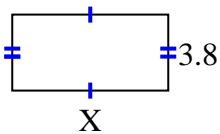
8) area = 46.8234 cm^2



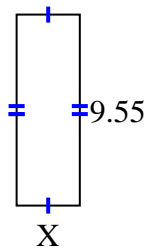
9) area = 24.2004 cm^2



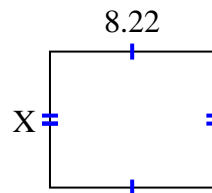
10) area = 29.64 cm^2



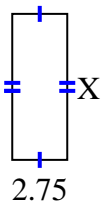
11) area = 30.178 cm^2



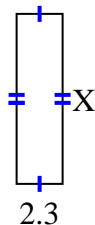
12) area = 55.896 cm^2



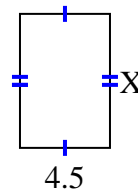
13) area = 20.075 cm^2



14) area = 19.55 cm^2



15) area = 30.15 cm^2



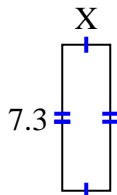
Answers

1. _____
2. _____
3. _____
4. _____
5. _____
6. _____
7. _____
8. _____
9. _____
10. _____
11. _____
12. _____
13. _____
14. _____
15. _____

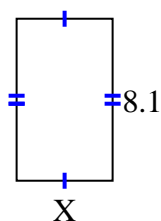


Find the value of X for each figure. Each figure is in centimeters (cm). Not to scale.

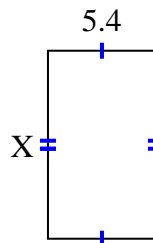
1) area = 17.52 cm^2



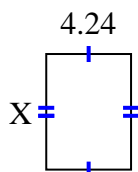
2) area = 38.88 cm^2



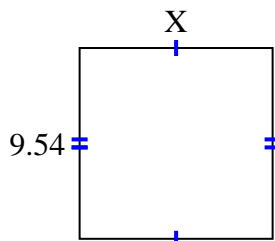
3) area = 50.76 cm^2



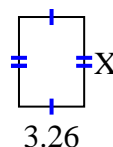
4) area = 24.5072 cm^2



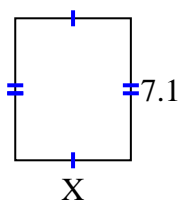
5) area = 92.061 cm^2



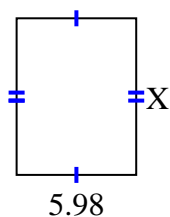
6) area = 14.6048 cm^2



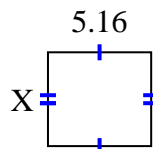
7) area = 41.038 cm^2



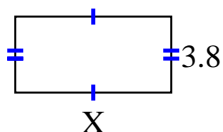
8) area = 46.8234 cm^2



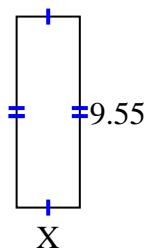
9) area = 24.2004 cm^2



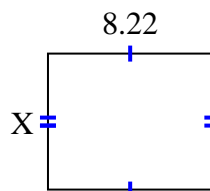
10) area = 29.64 cm^2



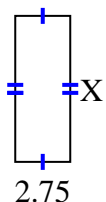
11) area = 30.178 cm^2



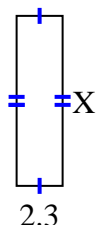
12) area = 55.896 cm^2



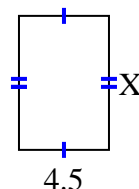
13) area = 20.075 cm^2



14) area = 19.55 cm^2



15) area = 30.15 cm^2



Answers

1. 2.4

2. 4.8

3. 9.4

4. 5.78

5. 9.65

6. 4.48

7. 5.78

8. 7.83

9. 4.69

10. 7.8

11. 3.16

12. 6.8

13. 7.3

14. 8.5

15. 6.7