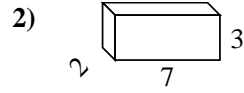
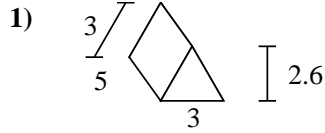
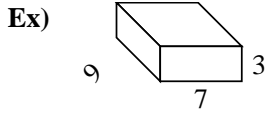




Find the surface area of each figure. Units are in cm (not to scale).



Answers

Ex. 222 cm<sup>2</sup>

1. \_\_\_\_\_

2. \_\_\_\_\_

3. \_\_\_\_\_

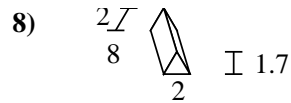
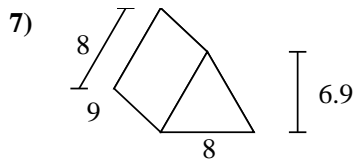
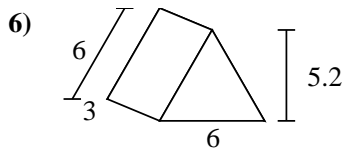
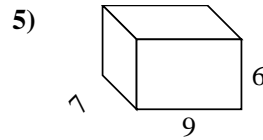
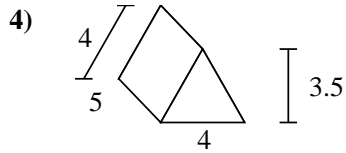
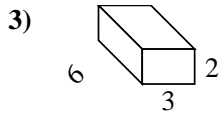
4. \_\_\_\_\_

5. \_\_\_\_\_

6. \_\_\_\_\_


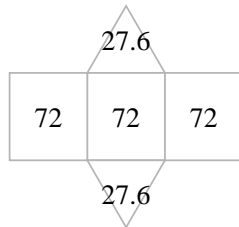
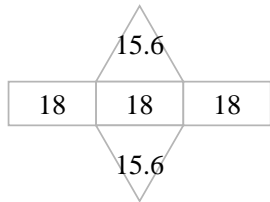
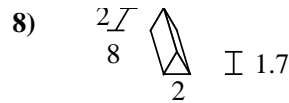
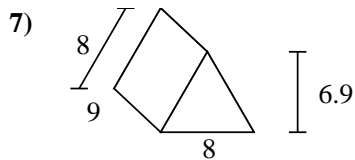
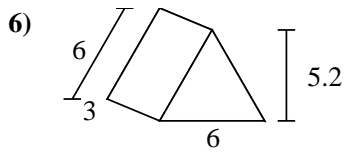
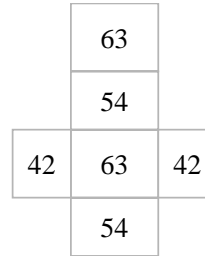
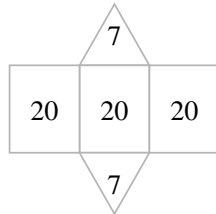
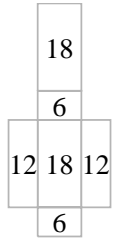
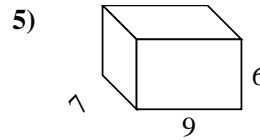
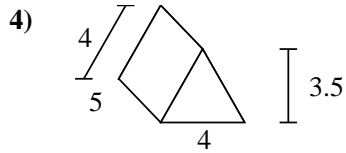
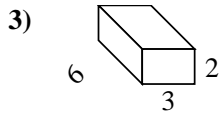
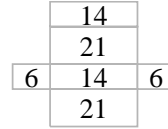
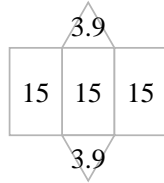
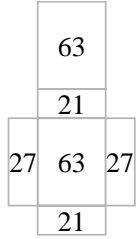
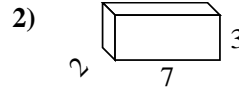
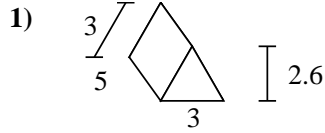
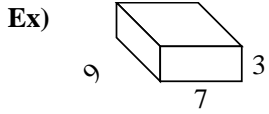
7. \_\_\_\_\_

8. \_\_\_\_\_





Find the surface area of each figure. Units are in cm (not to scale).



Answers

Ex. 222 cm<sup>2</sup>

1. 52.8 cm<sup>2</sup>

2. 82 cm<sup>2</sup>

3. 72 cm<sup>2</sup>

4. 74 cm<sup>2</sup>

5. 318 cm<sup>2</sup>

6. 85.2 cm<sup>2</sup>

7. 271.2 cm<sup>2</sup>

8. 51.4 cm<sup>2</sup>