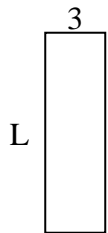




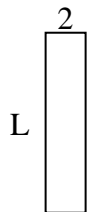
Determine the value of 'L'.

**Answers**

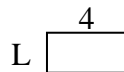
1) Area =  $30u^2$



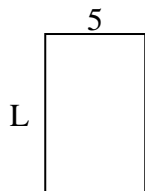
2) Area =  $18u^2$



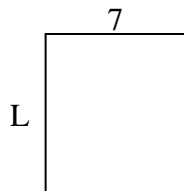
3) Area =  $8u^2$



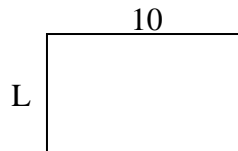
4) Area =  $40u^2$



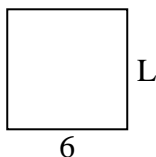
5) Area =  $56u^2$



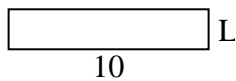
6) Area =  $60u^2$



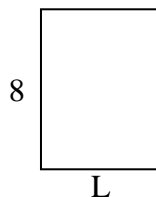
7) Area =  $36u^2$



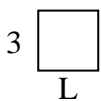
8) Area =  $20u^2$



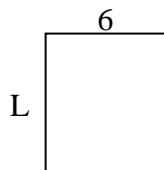
9) Area =  $48u^2$



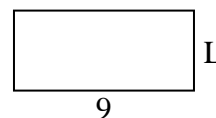
10) Area =  $9u^2$



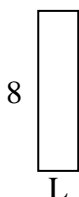
11) Area =  $42u^2$



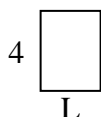
12) Area =  $36u^2$



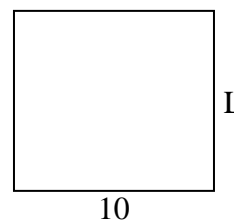
13) Area =  $16u^2$



14) Area =  $12u^2$



15) Area =  $90u^2$

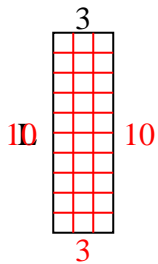


1. \_\_\_\_\_
2. \_\_\_\_\_
3. \_\_\_\_\_
4. \_\_\_\_\_
5. \_\_\_\_\_
6. \_\_\_\_\_
7. \_\_\_\_\_
8. \_\_\_\_\_
9. \_\_\_\_\_
10. \_\_\_\_\_
11. \_\_\_\_\_
12. \_\_\_\_\_
13. \_\_\_\_\_
14. \_\_\_\_\_
15. \_\_\_\_\_

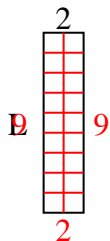


Determine the value of 'L'.

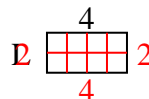
1) Area =  $30u^2$



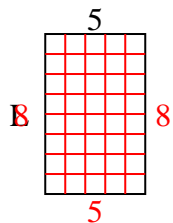
2) Area =  $18u^2$



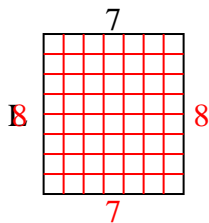
3) Area =  $8u^2$



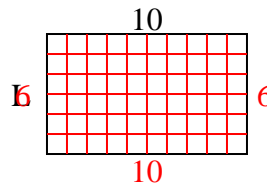
4) Area =  $40u^2$



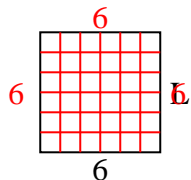
5) Area =  $56u^2$



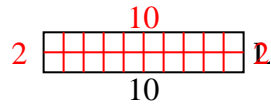
6) Area =  $60u^2$



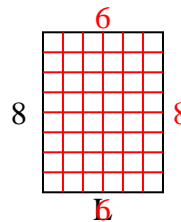
7) Area =  $36u^2$



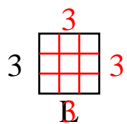
8) Area =  $20u^2$



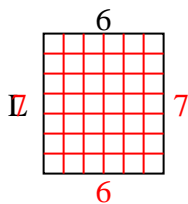
9) Area =  $48u^2$



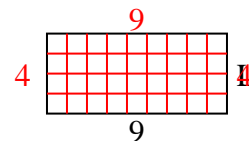
10) Area =  $9u^2$



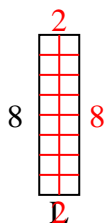
11) Area =  $42u^2$



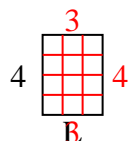
12) Area =  $36u^2$



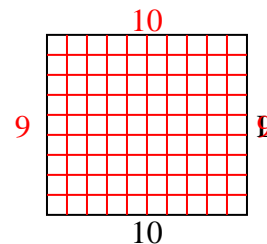
13) Area =  $16u^2$



14) Area =  $12u^2$



15) Area =  $90u^2$



Answers

1. 10

2. 9

3. 2

4. 8

5. 8

6. 6

7. 6

8. 2

9. 6

10. 3

11. 7

12. 4

13. 2

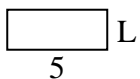
14. 3

15. 9

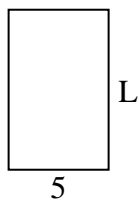


Determine the value of 'L'.

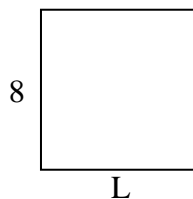
1) Area =  $10u^2$



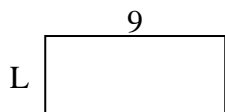
2) Area =  $40u^2$



3) Area =  $64u^2$



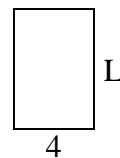
4) Area =  $36u^2$



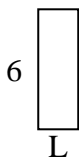
5) Area =  $12u^2$




6) Area =  $24u^2$



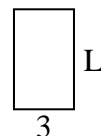
7) Area =  $12u^2$



8) Area =  $20u^2$



9) Area =  $15u^2$



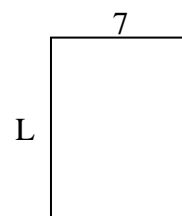
10) Area =  $8u^2$



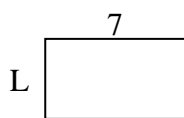
11) Area =  $10u^2$



12) Area =  $63u^2$



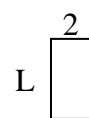
13) Area =  $28u^2$



14) Area =  $12u^2$



15) Area =  $8u^2$



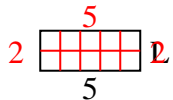
Answers

1. \_\_\_\_\_
2. \_\_\_\_\_
3. \_\_\_\_\_
4. \_\_\_\_\_
5. \_\_\_\_\_
6. \_\_\_\_\_
7. \_\_\_\_\_
8. \_\_\_\_\_
9. \_\_\_\_\_
10. \_\_\_\_\_
11. \_\_\_\_\_
12. \_\_\_\_\_
13. \_\_\_\_\_
14. \_\_\_\_\_
15. \_\_\_\_\_

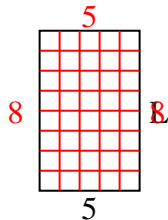


Determine the value of 'L'.

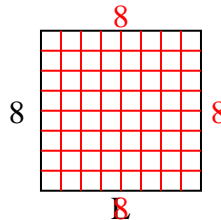
1) Area =  $10u^2$



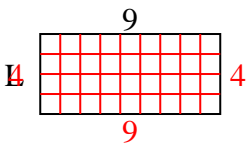
2) Area =  $40u^2$



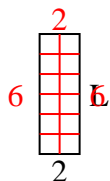
3) Area =  $64u^2$



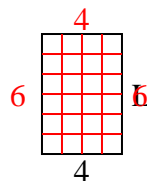
4) Area =  $36u^2$



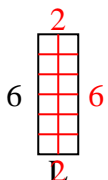
5) Area =  $12u^2$



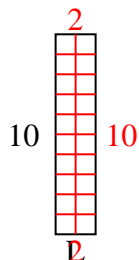
6) Area =  $24u^2$



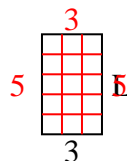
7) Area =  $12u^2$



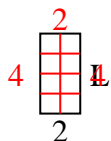
8) Area =  $20u^2$



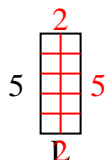
9) Area =  $15u^2$



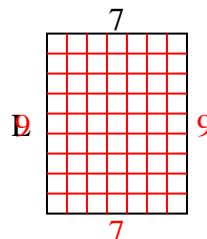
10) Area =  $8u^2$



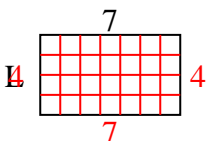
11) Area =  $10u^2$



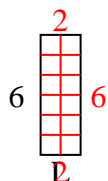
12) Area =  $63u^2$



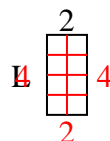
13) Area =  $28u^2$



14) Area =  $12u^2$



15) Area =  $8u^2$



Answers

1. 2

2. 8

3. 8

4. 4

5. 6

6. 6

7. 2

8. 2

9. 5

10. 4

11. 2

12. 9

13. 4

14. 2

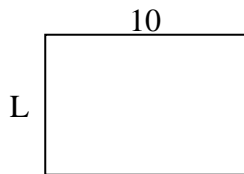
15. 4



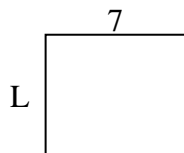
Determine the value of 'L'.

**Answers**

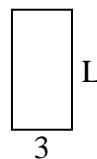
1) Area =  $70u^2$



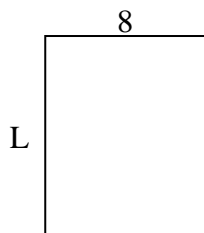
2) Area =  $42u^2$



3) Area =  $18u^2$



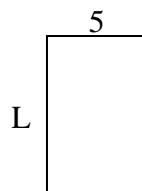
4) Area =  $80u^2$



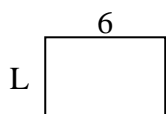
5) Area =  $18u^2$




6) Area =  $40u^2$



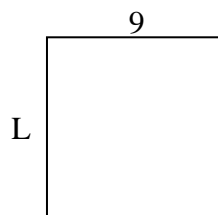
7) Area =  $24u^2$



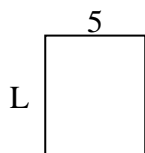
8) Area =  $60u^2$



9) Area =  $81u^2$



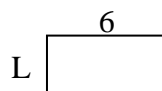
10) Area =  $30u^2$



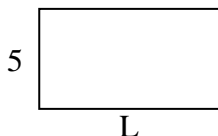
11) Area =  $9u^2$



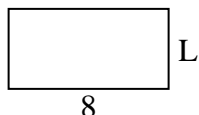
12) Area =  $18u^2$



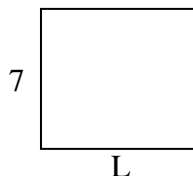
13) Area =  $45u^2$



14) Area =  $32u^2$



15) Area =  $56u^2$

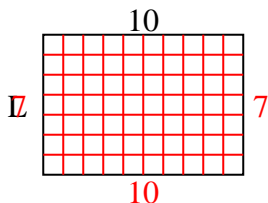


1. \_\_\_\_\_
2. \_\_\_\_\_
3. \_\_\_\_\_
4. \_\_\_\_\_
5. \_\_\_\_\_
6. \_\_\_\_\_
7. \_\_\_\_\_
8. \_\_\_\_\_
9. \_\_\_\_\_
10. \_\_\_\_\_
11. \_\_\_\_\_
12. \_\_\_\_\_
13. \_\_\_\_\_
14. \_\_\_\_\_
15. \_\_\_\_\_

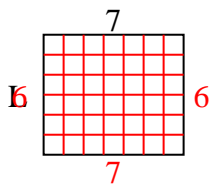


Determine the value of 'L'.

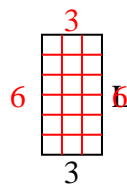
1) Area =  $70u^2$



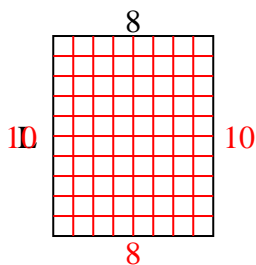
2) Area =  $42u^2$



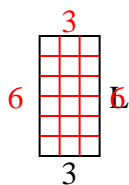
3) Area =  $18u^2$



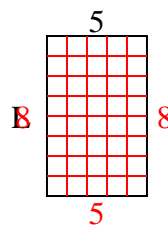
4) Area =  $80u^2$



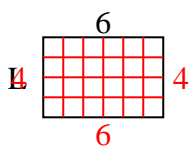
5) Area =  $18u^2$



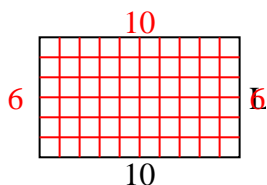
6) Area =  $40u^2$



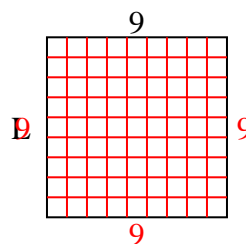
7) Area =  $24u^2$



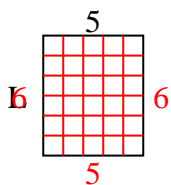
8) Area =  $60u^2$



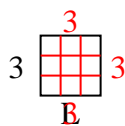
9) Area =  $81u^2$



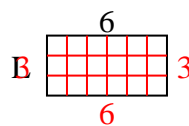
10) Area =  $30u^2$



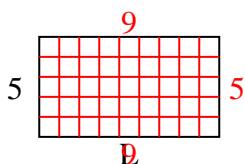
11) Area =  $9u^2$



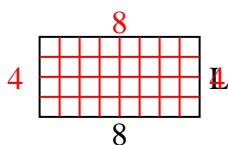
12) Area =  $18u^2$



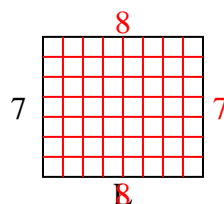
13) Area =  $45u^2$



14) Area =  $32u^2$



15) Area =  $56u^2$



Answers

1. 7

2. 6

3. 6

4. 10

5. 6

6. 8

7. 4

8. 6

9. 9

10. 6

11. 3

12. 3

13. 9

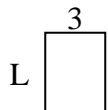
14. 4

15. 8

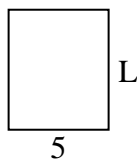


Determine the value of 'L'.

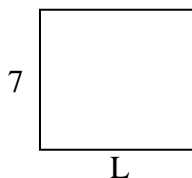
1) Area =  $12u^2$



2) Area =  $30u^2$



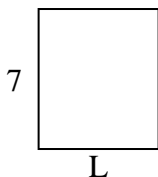
3) Area =  $56u^2$



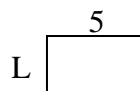
4) Area =  $20u^2$



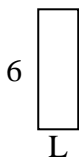
5) Area =  $42u^2$




6) Area =  $15u^2$




7) Area =  $12u^2$



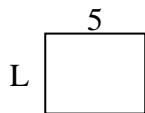
8) Area =  $60u^2$



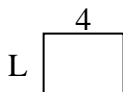
9) Area =  $36u^2$




10) Area =  $20u^2$




11) Area =  $12u^2$



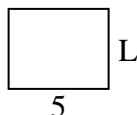
12) Area =  $32u^2$



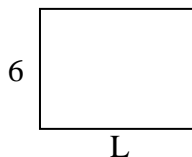
13) Area =  $16u^2$



14) Area =  $20u^2$



15) Area =  $48u^2$



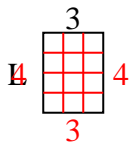
**Answers**

1. \_\_\_\_\_
2. \_\_\_\_\_
3. \_\_\_\_\_
4. \_\_\_\_\_
5. \_\_\_\_\_
6. \_\_\_\_\_
7. \_\_\_\_\_
8. \_\_\_\_\_
9. \_\_\_\_\_
10. \_\_\_\_\_
11. \_\_\_\_\_
12. \_\_\_\_\_
13. \_\_\_\_\_
14. \_\_\_\_\_
15. \_\_\_\_\_

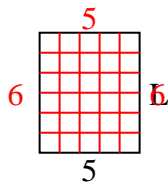


Determine the value of 'L'.

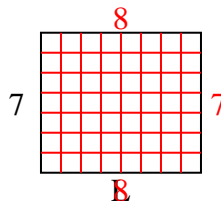
1) Area =  $12u^2$



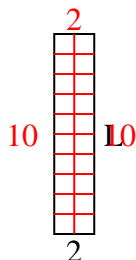
2) Area =  $30u^2$



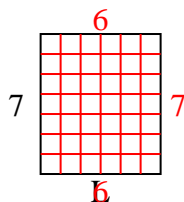
3) Area =  $56u^2$



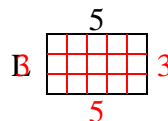
4) Area =  $20u^2$



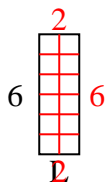
5) Area =  $42u^2$



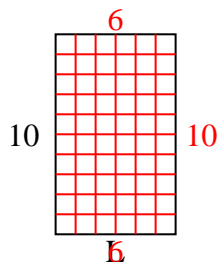
6) Area =  $15u^2$



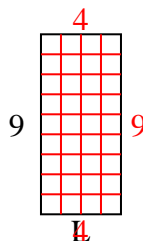
7) Area =  $12u^2$



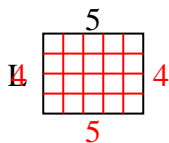
8) Area =  $60u^2$



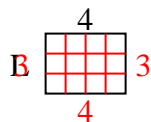
9) Area =  $36u^2$



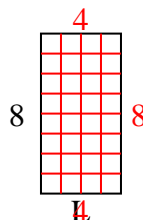
10) Area =  $20u^2$



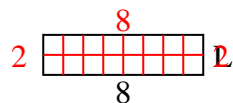
11) Area =  $12u^2$



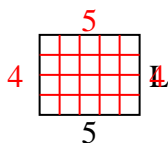
12) Area =  $32u^2$



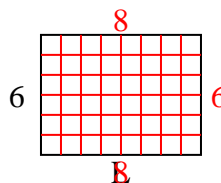
13) Area =  $16u^2$



14) Area =  $20u^2$



15) Area =  $48u^2$



Answers

1. 4

2. 6

3. 8

4. 10

5. 6

6. 3

7. 2

8. 6

9. 4

10. 4

11. 3

12. 4

13. 2

14. 4

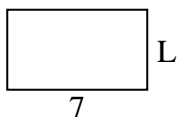
15. 8



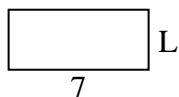


Determine the value of 'L'.

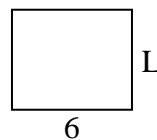
1) Area =  $28u^2$



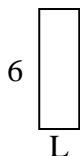
2) Area =  $21u^2$



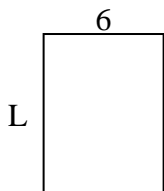
3) Area =  $30u^2$



4) Area =  $12u^2$



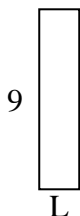
5) Area =  $48u^2$



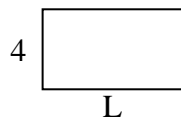
6) Area =  $6u^2$



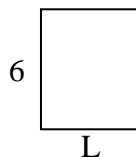
7) Area =  $18u^2$



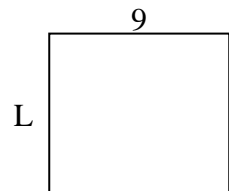
8) Area =  $28u^2$



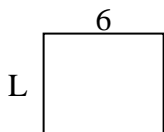
9) Area =  $30u^2$



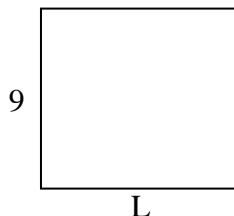
10) Area =  $72u^2$



11) Area =  $30u^2$



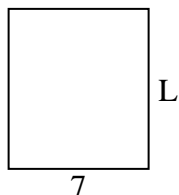
12) Area =  $90u^2$



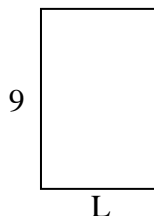
13) Area =  $30u^2$



14) Area =  $56u^2$



15) Area =  $54u^2$



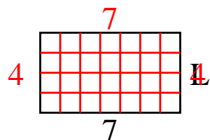
Answers

1. \_\_\_\_\_
2. \_\_\_\_\_
3. \_\_\_\_\_
4. \_\_\_\_\_
5. \_\_\_\_\_
6. \_\_\_\_\_
7. \_\_\_\_\_
8. \_\_\_\_\_
9. \_\_\_\_\_
10. \_\_\_\_\_
11. \_\_\_\_\_
12. \_\_\_\_\_
13. \_\_\_\_\_
14. \_\_\_\_\_
15. \_\_\_\_\_

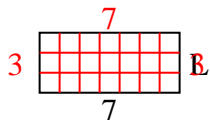


Determine the value of 'L'.

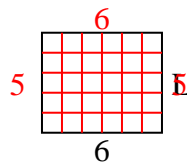
1) Area =  $28u^2$



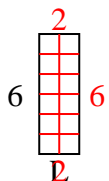
2) Area =  $21u^2$



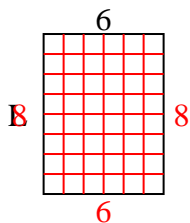
3) Area =  $30u^2$



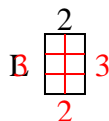
4) Area =  $12u^2$



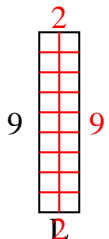
5) Area =  $48u^2$



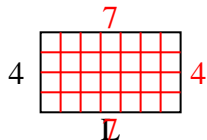
6) Area =  $6u^2$



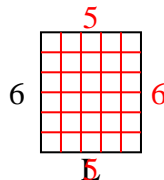
7) Area =  $18u^2$



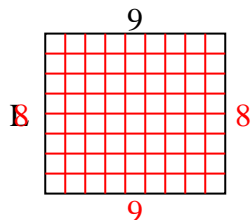
8) Area =  $28u^2$



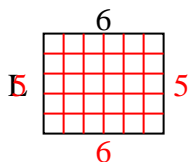
9) Area =  $30u^2$



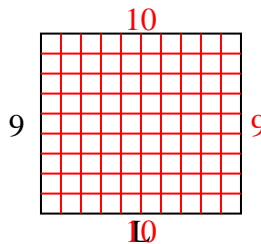
10) Area =  $72u^2$



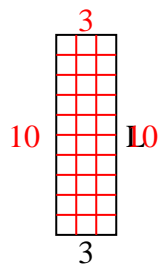
11) Area =  $30u^2$



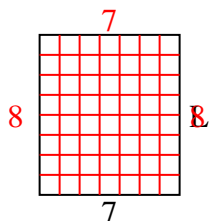
12) Area =  $90u^2$



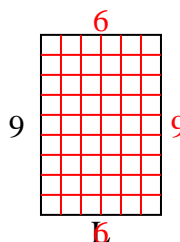
13) Area =  $30u^2$



14) Area =  $56u^2$



15) Area =  $54u^2$



Answers

1. 4

2. 3

3. 5

4. 2

5. 8

6. 3

7. 2

8. 7

9. 5

10. 8

11. 5

12. 10

13. 10

14. 8

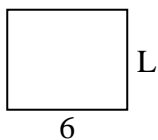
15. 6



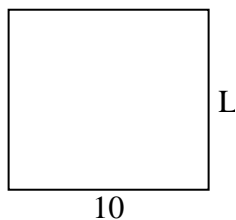
Determine the value of 'L'.

Answers

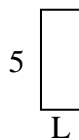
1) Area =  $30u^2$



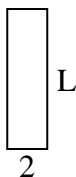
2) Area =  $90u^2$



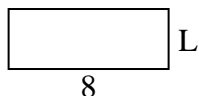
3) Area =  $10u^2$



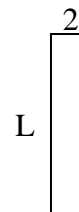
4) Area =  $14u^2$



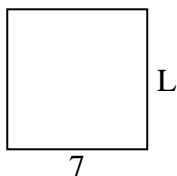
5) Area =  $24u^2$



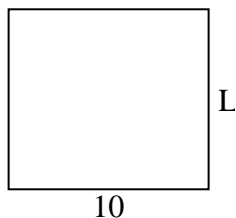
6) Area =  $18u^2$



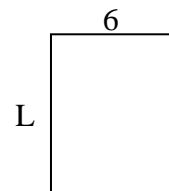
7) Area =  $49u^2$



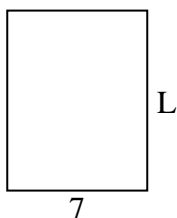
8) Area =  $90u^2$



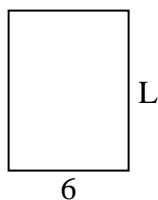
9) Area =  $48u^2$



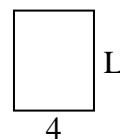
10) Area =  $63u^2$



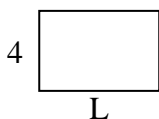
11) Area =  $48u^2$



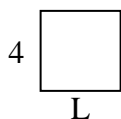
12) Area =  $20u^2$



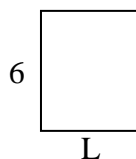
13) Area =  $24u^2$



14) Area =  $16u^2$



15) Area =  $30u^2$

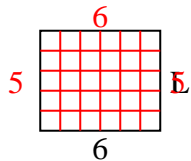


1. \_\_\_\_\_
2. \_\_\_\_\_
3. \_\_\_\_\_
4. \_\_\_\_\_
5. \_\_\_\_\_
6. \_\_\_\_\_
7. \_\_\_\_\_
8. \_\_\_\_\_
9. \_\_\_\_\_
10. \_\_\_\_\_
11. \_\_\_\_\_
12. \_\_\_\_\_
13. \_\_\_\_\_
14. \_\_\_\_\_
15. \_\_\_\_\_

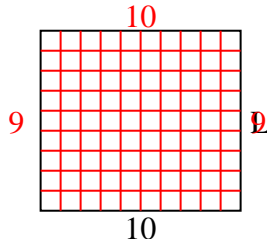


Determine the value of 'L'.

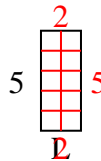
1) Area =  $30u^2$



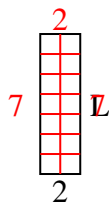
2) Area =  $90u^2$



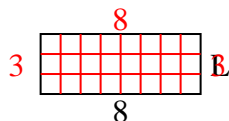
3) Area =  $10u^2$



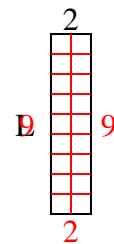
4) Area =  $14u^2$



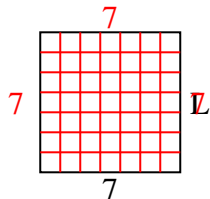
5) Area =  $24u^2$



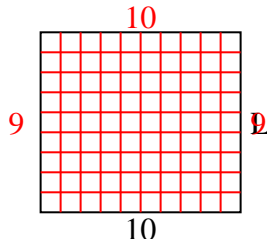
6) Area =  $18u^2$



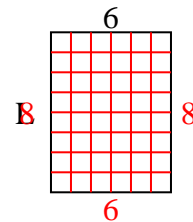
7) Area =  $49u^2$



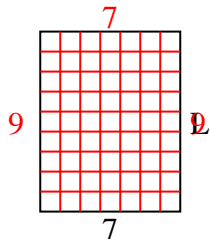
8) Area =  $90u^2$



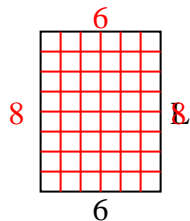
9) Area =  $48u^2$



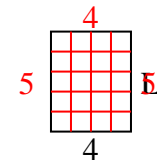
10) Area =  $63u^2$



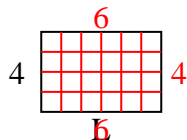
11) Area =  $48u^2$



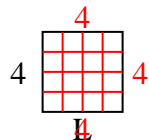
12) Area =  $20u^2$



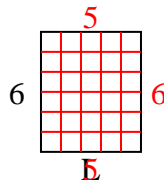
13) Area =  $24u^2$



14) Area =  $16u^2$



15) Area =  $30u^2$



Answers

1. 5

2. 9

3. 2

4. 7

5. 3

6. 9

7. 7

8. 9

9. 8

10. 9

11. 8

12. 5

13. 6

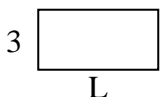
14. 4

15. 5

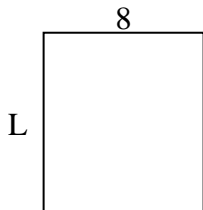


Determine the value of 'L'.

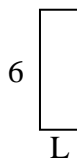
1) Area =  $18u^2$



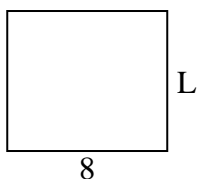
2) Area =  $72u^2$



3) Area =  $12u^2$



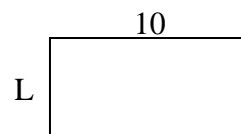
4) Area =  $56u^2$



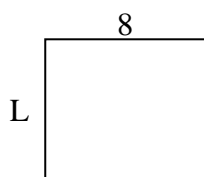
5) Area =  $6u^2$



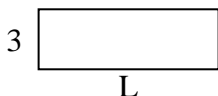
6) Area =  $50u^2$



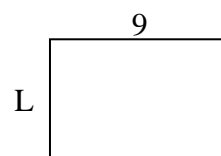
7) Area =  $56u^2$



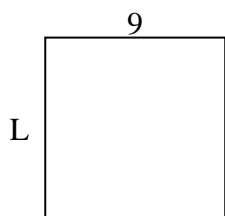
8) Area =  $27u^2$



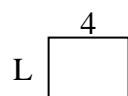
9) Area =  $54u^2$



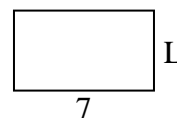
10) Area =  $81u^2$



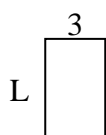
11) Area =  $12u^2$




12) Area =  $28u^2$



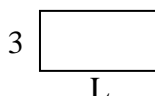
13) Area =  $15u^2$



14) Area =  $20u^2$



15) Area =  $18u^2$



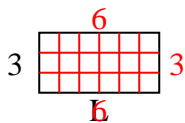
**Answers**

1. \_\_\_\_\_
2. \_\_\_\_\_
3. \_\_\_\_\_
4. \_\_\_\_\_
5. \_\_\_\_\_
6. \_\_\_\_\_
7. \_\_\_\_\_
8. \_\_\_\_\_
9. \_\_\_\_\_
10. \_\_\_\_\_
11. \_\_\_\_\_
12. \_\_\_\_\_
13. \_\_\_\_\_
14. \_\_\_\_\_
15. \_\_\_\_\_

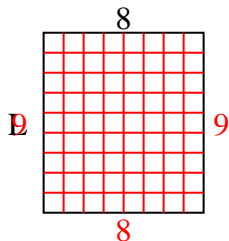


Determine the value of 'L'.

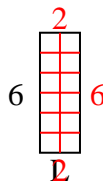
1) Area =  $18u^2$



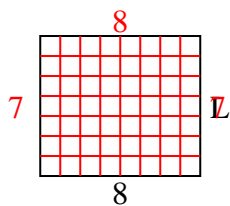
2) Area =  $72u^2$



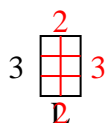
3) Area =  $12u^2$



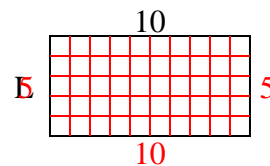
4) Area =  $56u^2$



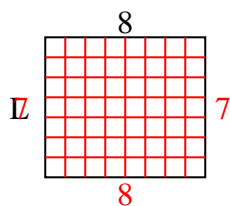
5) Area =  $6u^2$



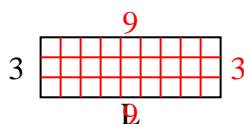
6) Area =  $50u^2$



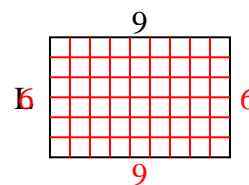
7) Area =  $56u^2$



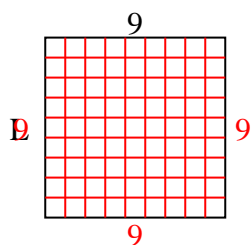
8) Area =  $27u^2$



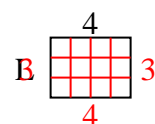
9) Area =  $54u^2$



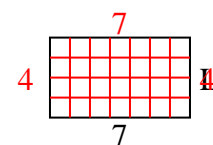
10) Area =  $81u^2$



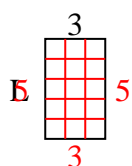
11) Area =  $12u^2$



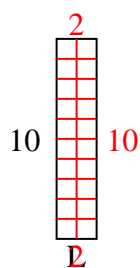
12) Area =  $28u^2$



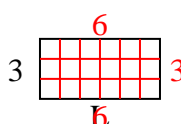
13) Area =  $15u^2$



14) Area =  $20u^2$



15) Area =  $18u^2$



Answers

1. 6

2. 9

3. 2

4. 7

5. 2

6. 5

7. 7

8. 9

9. 6

10. 9

11. 3

12. 4

13. 5


14. 2

15. 6

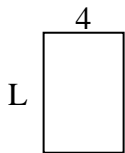


Determine the value of 'L'.

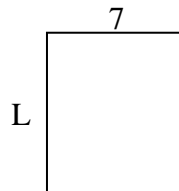
1) Area =  $30u^2$



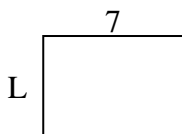
2) Area =  $24u^2$



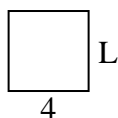
3) Area =  $56u^2$



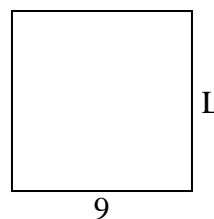
4) Area =  $35u^2$



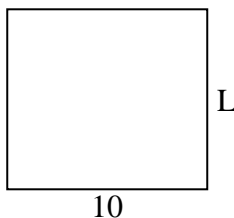
5) Area =  $16u^2$



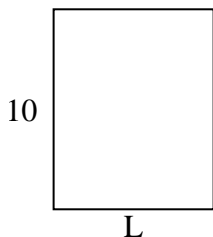
6) Area =  $81u^2$



7) Area =  $90u^2$




8) Area =  $80u^2$



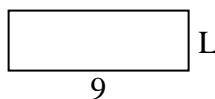
9) Area =  $27u^2$



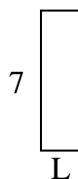
10) Area =  $32u^2$



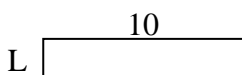
11) Area =  $27u^2$



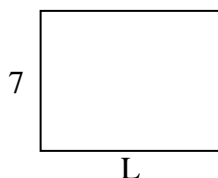
12) Area =  $14u^2$



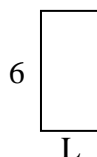
13) Area =  $20u^2$



14) Area =  $63u^2$



15) Area =  $18u^2$



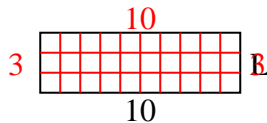
**Answers**

1. \_\_\_\_\_
2. \_\_\_\_\_
3. \_\_\_\_\_
4. \_\_\_\_\_
5. \_\_\_\_\_
6. \_\_\_\_\_
7. \_\_\_\_\_
8. \_\_\_\_\_
9. \_\_\_\_\_
10. \_\_\_\_\_
11. \_\_\_\_\_
12. \_\_\_\_\_
13. \_\_\_\_\_
14. \_\_\_\_\_
15. \_\_\_\_\_

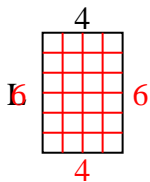


Determine the value of 'L'.

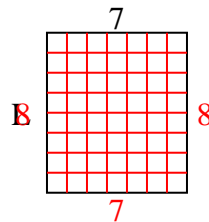
1) Area =  $30u^2$



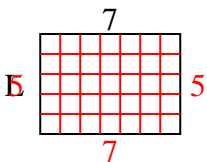
2) Area =  $24u^2$



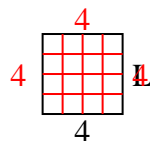
3) Area =  $56u^2$



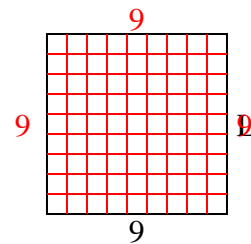
4) Area =  $35u^2$



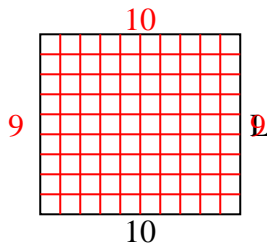
5) Area =  $16u^2$



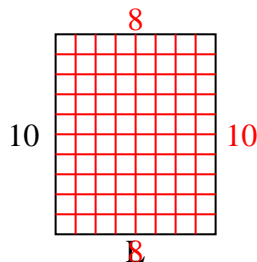
6) Area =  $81u^2$



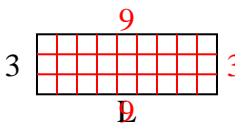
7) Area =  $90u^2$



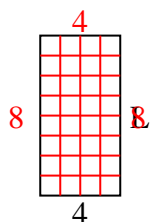
8) Area =  $80u^2$



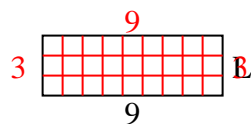
9) Area =  $27u^2$



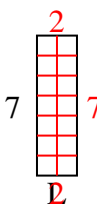
10) Area =  $32u^2$



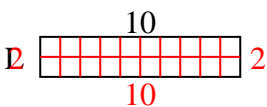
11) Area =  $27u^2$



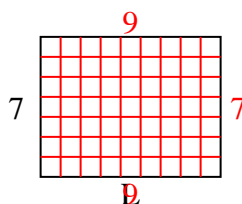
12) Area =  $14u^2$



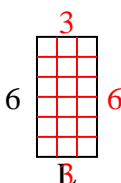
13) Area =  $20u^2$



14) Area =  $63u^2$



15) Area =  $18u^2$



Answers

1. 3

2. 6

3. 8

4. 5

5. 4

6. 9

7. 9

8. 8

9. 9

10. 8

11. 3

12. 2

13. 2

14. 9

15. 3



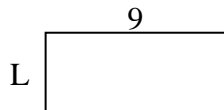


Determine the value of 'L'.

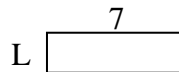
1) Area =  $8u^2$



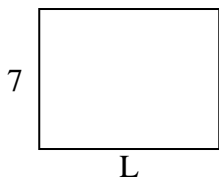
2) Area =  $36u^2$



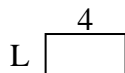
3) Area =  $14u^2$



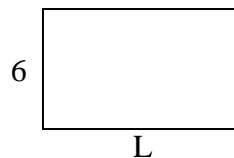
4) Area =  $63u^2$



5) Area =  $8u^2$




6) Area =  $60u^2$



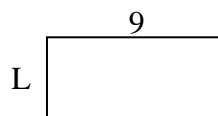
7) Area =  $45u^2$



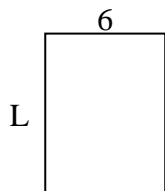
8) Area =  $20u^2$



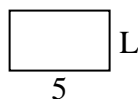
9) Area =  $36u^2$



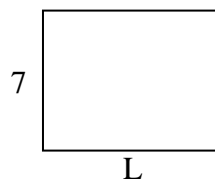
10) Area =  $48u^2$



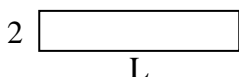
11) Area =  $15u^2$



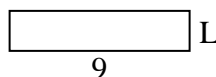
12) Area =  $63u^2$



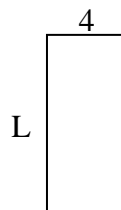
13) Area =  $20u^2$



14) Area =  $18u^2$



15) Area =  $36u^2$



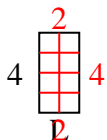
**Answers**

1. \_\_\_\_\_
2. \_\_\_\_\_
3. \_\_\_\_\_
4. \_\_\_\_\_
5. \_\_\_\_\_
6. \_\_\_\_\_
7. \_\_\_\_\_
8. \_\_\_\_\_
9. \_\_\_\_\_
10. \_\_\_\_\_
11. \_\_\_\_\_
12. \_\_\_\_\_
13. \_\_\_\_\_
14. \_\_\_\_\_
15. \_\_\_\_\_

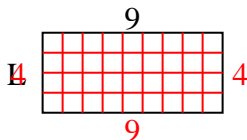


Determine the value of 'L'.

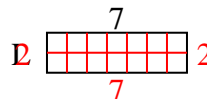
1) Area =  $8u^2$



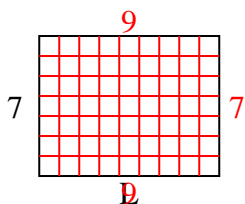
2) Area =  $36u^2$



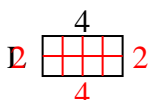
3) Area =  $14u^2$



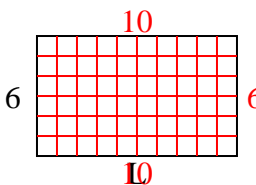
4) Area =  $63u^2$



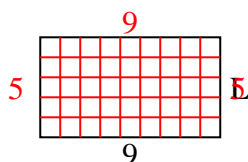
5) Area =  $8u^2$



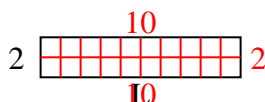
6) Area =  $60u^2$



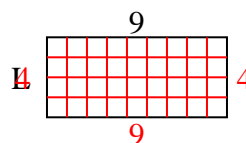
7) Area =  $45u^2$



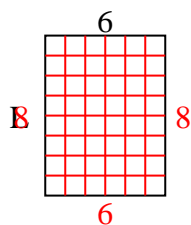
8) Area =  $20u^2$



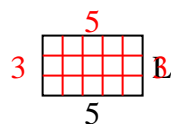
9) Area =  $36u^2$



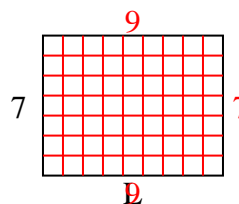
10) Area =  $48u^2$



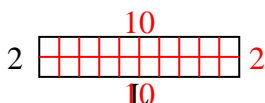
11) Area =  $15u^2$



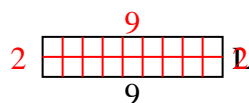
12) Area =  $63u^2$



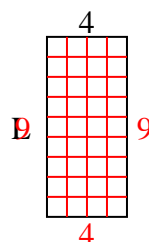
13) Area =  $20u^2$



14) Area =  $18u^2$



15) Area =  $36u^2$



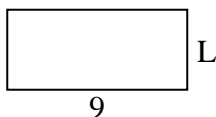
Answers

1. 2
2. 4
3. 2
4. 9
5. 2
6. 10
7. 5
8. 10
9. 4
10. 8
11. 3
12. 9
13. 10
14. 2
15. 9

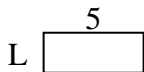


Determine the value of 'L'.

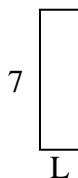
1) Area =  $36u^2$



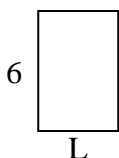
2) Area =  $10u^2$



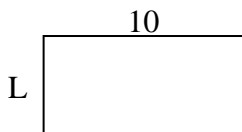
3) Area =  $14u^2$



4) Area =  $24u^2$



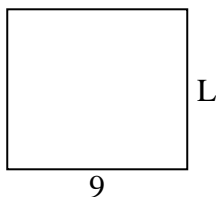
5) Area =  $50u^2$



6) Area =  $6u^2$




7) Area =  $72u^2$



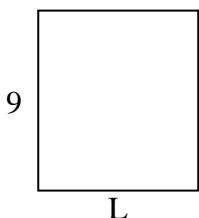
8) Area =  $27u^2$



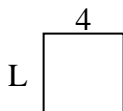
9) Area =  $70u^2$



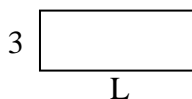
10) Area =  $72u^2$




11) Area =  $16u^2$



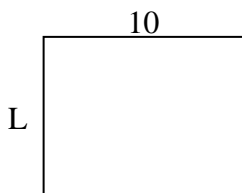
12) Area =  $24u^2$




13) Area =  $14u^2$



14) Area =  $80u^2$



15) Area =  $27u^2$



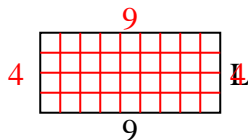
**Answers**

1. \_\_\_\_\_
2. \_\_\_\_\_
3. \_\_\_\_\_
4. \_\_\_\_\_
5. \_\_\_\_\_
6. \_\_\_\_\_
7. \_\_\_\_\_
8. \_\_\_\_\_
9. \_\_\_\_\_
10. \_\_\_\_\_
11. \_\_\_\_\_
12. \_\_\_\_\_
13. \_\_\_\_\_
14. \_\_\_\_\_
15. \_\_\_\_\_

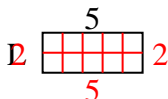


Determine the value of 'L'.

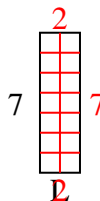
1) Area =  $36u^2$



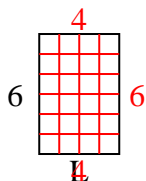
2) Area =  $10u^2$



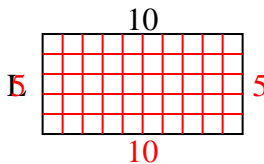
3) Area =  $14u^2$



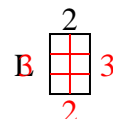
4) Area =  $24u^2$



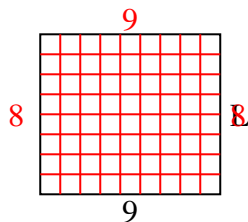
5) Area =  $50u^2$



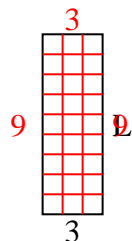
6) Area =  $6u^2$



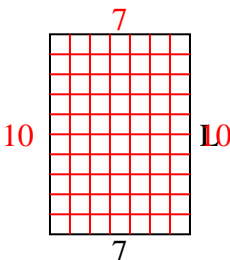
7) Area =  $72u^2$



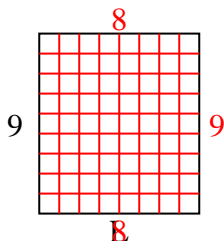
8) Area =  $27u^2$



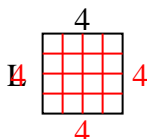
9) Area =  $70u^2$



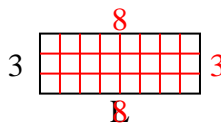
10) Area =  $72u^2$



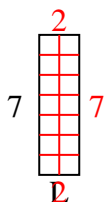
11) Area =  $16u^2$



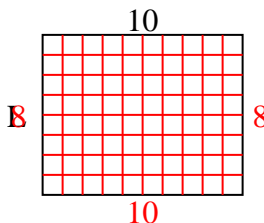
12) Area =  $24u^2$



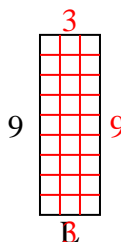
13) Area =  $14u^2$



14) Area =  $80u^2$



15) Area =  $27u^2$



Answers

1. 4

2. 2

3. 2

4. 4

5. 5

6. 3

7. 8

8. 9

9. 10

10. 8

11. 4

12. 8

13. 2

14. 8

15. 3