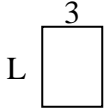


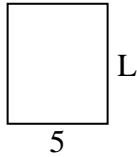


Determine the value of 'L'. Lengths are in cm (not to scale).

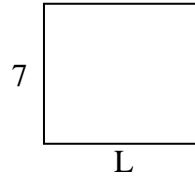
1) perimeter = 14



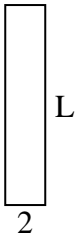
2) perimeter = 22



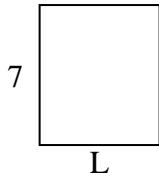
3) perimeter = 30



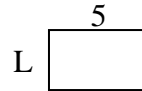
4) perimeter = 24



5) perimeter = 26



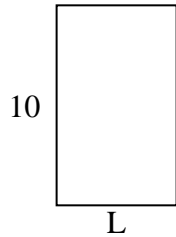
6) perimeter = 16



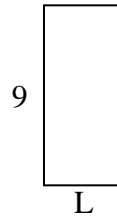
7) perimeter = 16



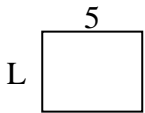
8) perimeter = 32



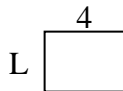
9) perimeter = 26



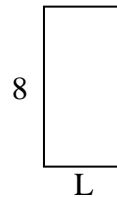
10) perimeter = 18



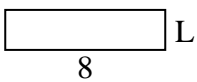
11) perimeter = 14



12) perimeter = 24



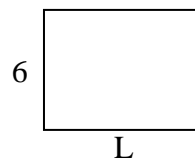
13) perimeter = 20



14) perimeter = 18



15) perimeter = 28



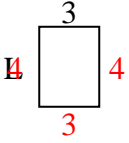
Answers

1. _____
2. _____
3. _____
4. _____
5. _____
6. _____
7. _____
8. _____
9. _____
10. _____
11. _____
12. _____
13. _____
14. _____
15. _____

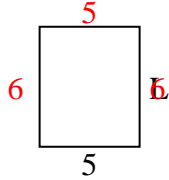


Determine the value of 'L'. Lengths are in cm (not to scale).

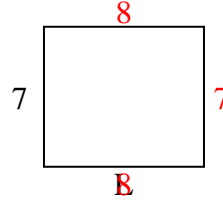
1) perimeter = 14



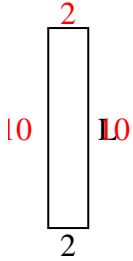
2) perimeter = 22



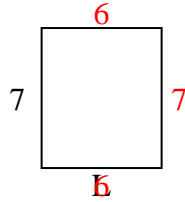
3) perimeter = 30



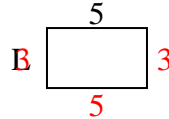
4) perimeter = 24



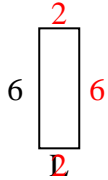
5) perimeter = 26



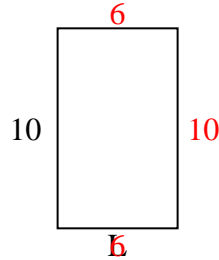
6) perimeter = 16




7) perimeter = 16



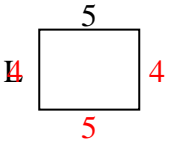
8) perimeter = 32



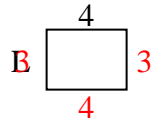
9) perimeter = 26



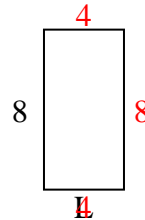
10) perimeter = 18



11) perimeter = 14



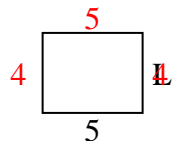
12) perimeter = 24



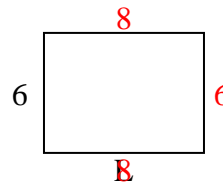
13) perimeter = 20



14) perimeter = 18



15) perimeter = 28



Answers

1. 4 cm

2. 6 cm

3. 8 cm

4. 10 cm

5. 6 cm

6. 3 cm

7. 2 cm

8. 6 cm

9. 4 cm

10. 4 cm

11. 3 cm

12. 4 cm

13. 2 cm

14. 4 cm

15. 8 cm