

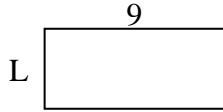


Determine the value of 'L'. Lengths are in cm (not to scale).

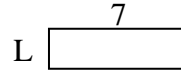
1) perimeter = 12



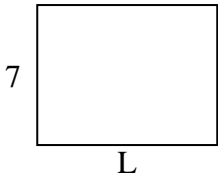
2) perimeter = 26



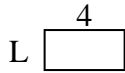
3) perimeter = 18



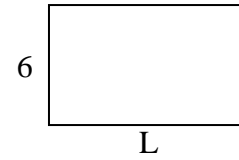
4) perimeter = 32



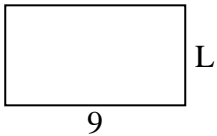
5) perimeter = 12



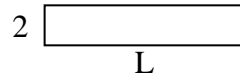
6) perimeter = 32



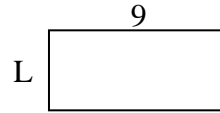
7) perimeter = 28



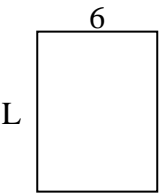
8) perimeter = 24



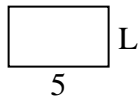
9) perimeter = 26



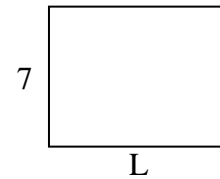
10) perimeter = 28



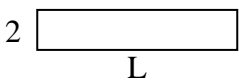
11) perimeter = 16



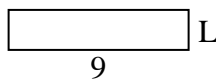
12) perimeter = 32



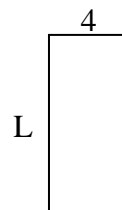
13) perimeter = 24



14) perimeter = 22



15) perimeter = 26



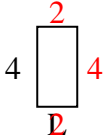
**Answers**

1. \_\_\_\_\_
2. \_\_\_\_\_
3. \_\_\_\_\_
4. \_\_\_\_\_
5. \_\_\_\_\_
6. \_\_\_\_\_
7. \_\_\_\_\_
8. \_\_\_\_\_
9. \_\_\_\_\_
10. \_\_\_\_\_
11. \_\_\_\_\_
12. \_\_\_\_\_
13. \_\_\_\_\_
14. \_\_\_\_\_
15. \_\_\_\_\_

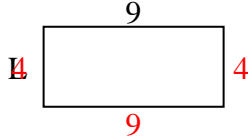


Determine the value of 'L'. Lengths are in cm (not to scale).

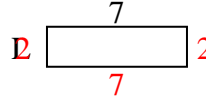
1) perimeter = 12



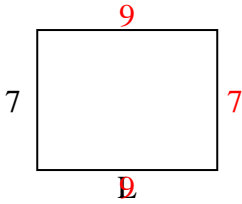
2) perimeter = 26



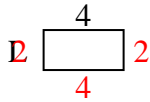
3) perimeter = 18



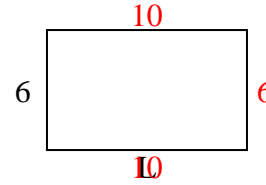
4) perimeter = 32



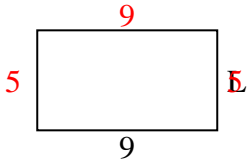
5) perimeter = 12



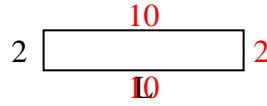
6) perimeter = 32



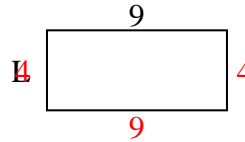
7) perimeter = 28



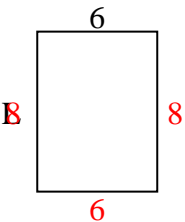
8) perimeter = 24



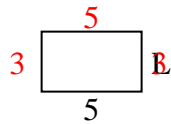
9) perimeter = 26



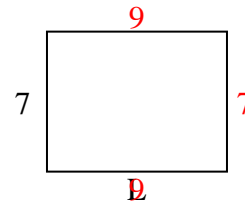
10) perimeter = 28



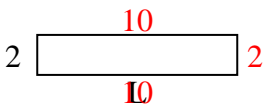
11) perimeter = 16



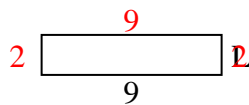
12) perimeter = 32



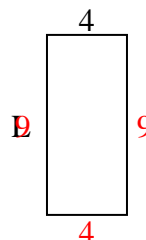
13) perimeter = 24



14) perimeter = 22



15) perimeter = 26



Answers

1. 2 cm

2. 4 cm

3. 2 cm

4. 9 cm

5. 2 cm

6. 10 cm

7. 5 cm

8. 10 cm

9. 4 cm

10. 8 cm

11. 3 cm

12. 9 cm

13. 10 cm

14. 2 cm

15. 9 cm