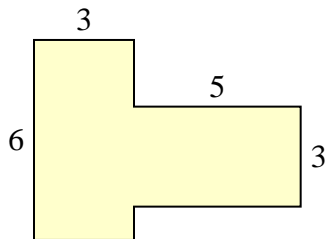




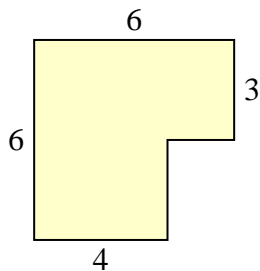
Find the total area of each shape. Measurement is in millimeters (mm). Not to scale.

Answers

1)



2)



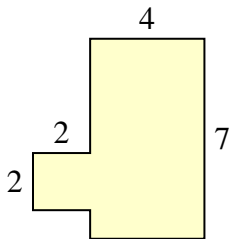
1. \_\_\_\_\_

2. \_\_\_\_\_

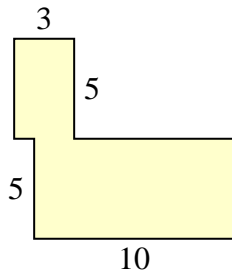
3. \_\_\_\_\_

4. \_\_\_\_\_

3)



4)



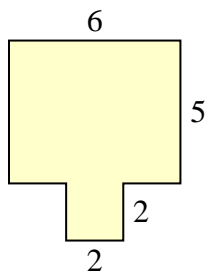
5. \_\_\_\_\_

6. \_\_\_\_\_

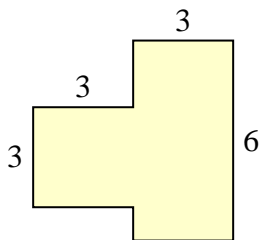
7. \_\_\_\_\_

8. \_\_\_\_\_

5)



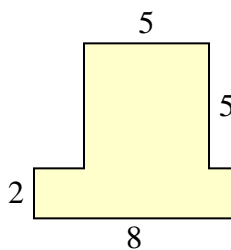
6)



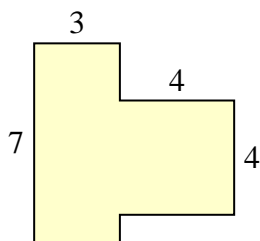
9. \_\_\_\_\_

10. \_\_\_\_\_

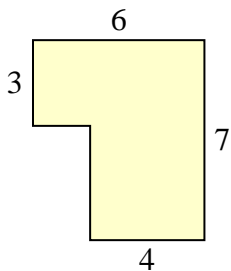
7)



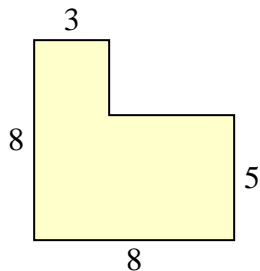
8)



9)



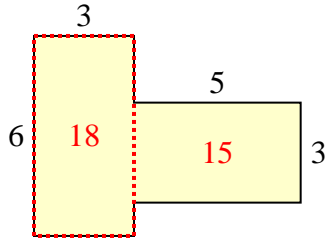
10)



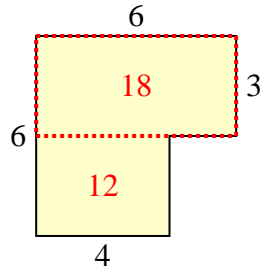


Find the total area of each shape. Measurement is in millimeters (mm). Not to scale.

1)



2)



**Answers**

1. **33 mm<sup>2</sup>**

2. **30 mm<sup>2</sup>**

3. **32 mm<sup>2</sup>**

4. **65 mm<sup>2</sup>**

5. **34 mm<sup>2</sup>**

6. **27 mm<sup>2</sup>**

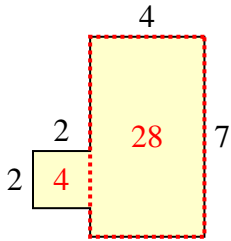
7. **41 mm<sup>2</sup>**

8. **37 mm<sup>2</sup>**

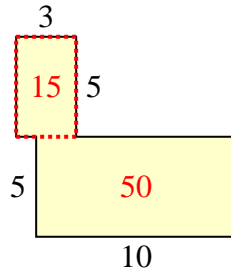
9. **34 mm<sup>2</sup>**

10. **49 mm<sup>2</sup>**

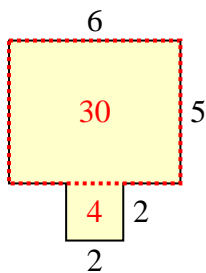
3)



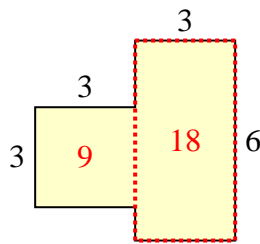
4)



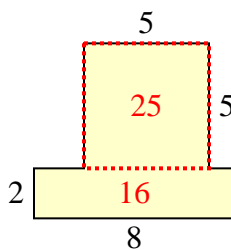
5)



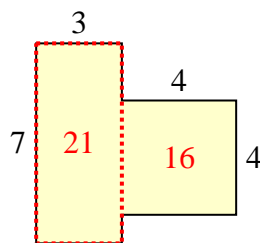
6)



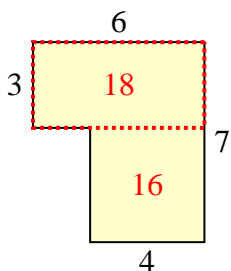
7)



8)



9)



10)

