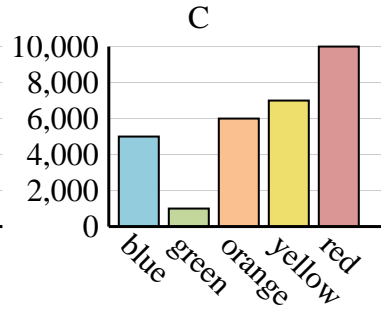
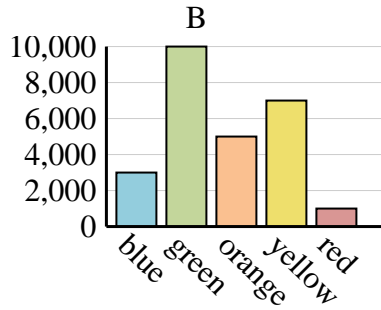
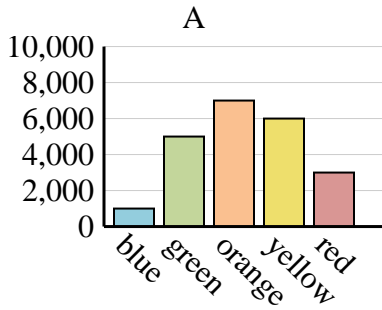




Determine which graph (A, B or C) best represents the information in the table.

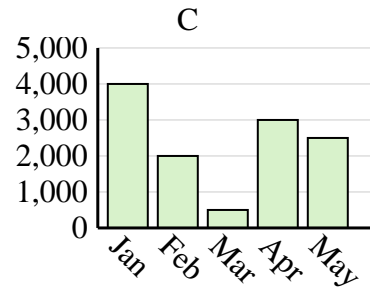
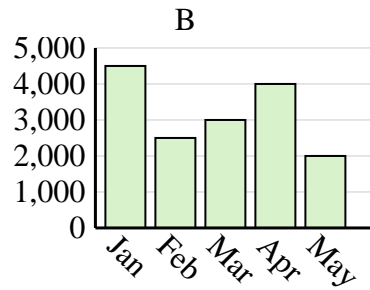
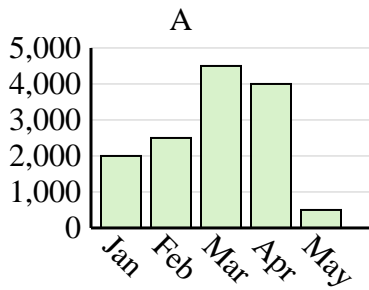
Answers

<b>Favorite Color</b>	blue	green	orange	yellow	red
<b>People</b>	1,000	5,000	7,000	6,000	3,000

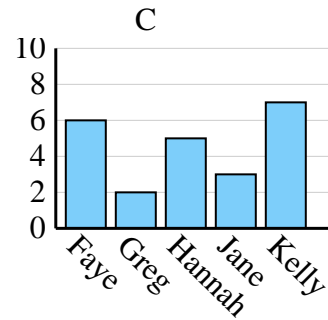
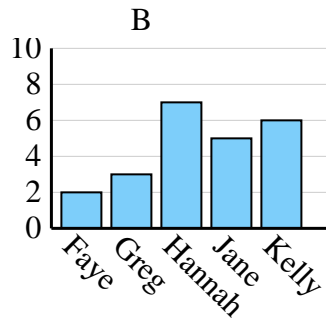
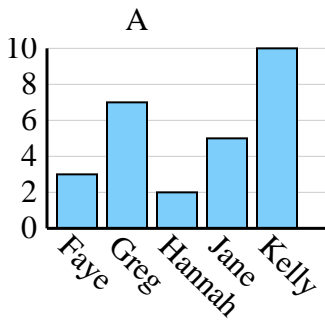


1. \_\_\_\_\_
2. \_\_\_\_\_
3. \_\_\_\_\_
4. \_\_\_\_\_

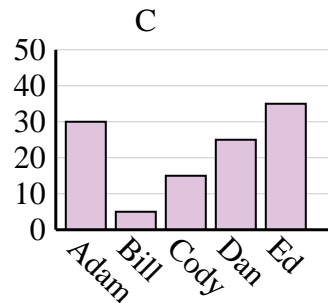
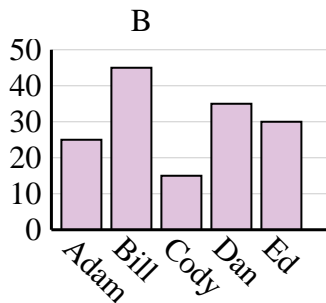
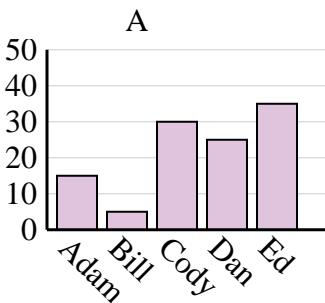
<b>Sales</b>	Jan	Feb	Mar	Apr	May
<b>Month</b>	2,000	2,500	4,500	4,000	500



<b>Name</b>	Faye	Greg	Hannah	Jane	Kelly
<b>States Lived In</b>	3	7	2	5	10



<b>Name</b>	Adam	Bill	Cody	Dan	Ed
<b>Points</b>	25	45	15	35	30

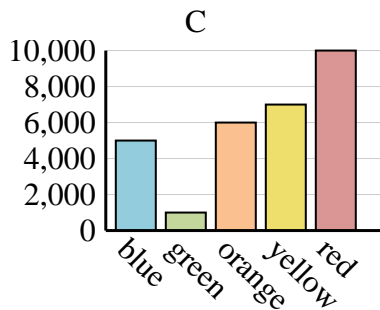
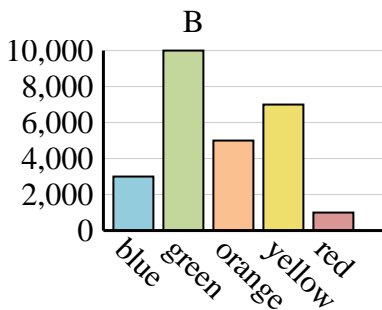
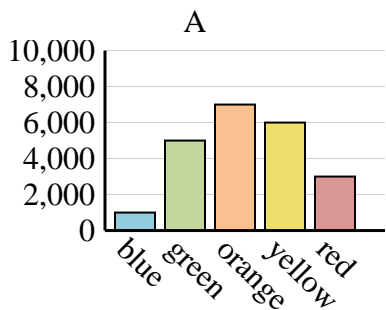




Determine which graph (A, B or C) best represents the information in the table.

Answers

<b>Favorite Color</b>	blue	green	orange	yellow	red
<b>People</b>	1,000	5,000	7,000	6,000	3,000



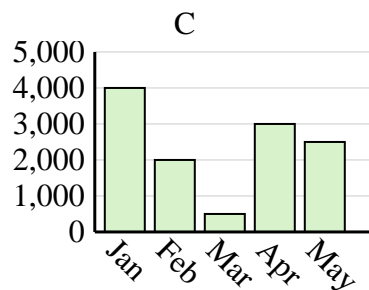
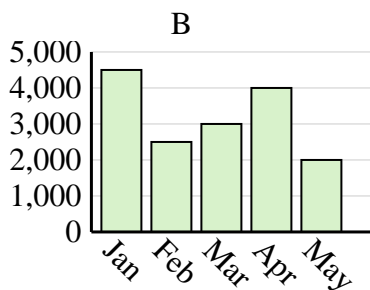
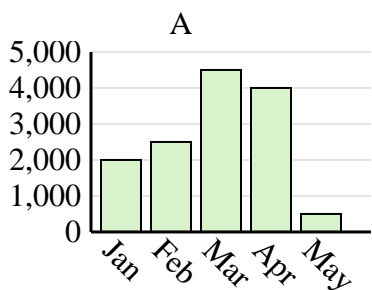
1. **A**

2. **A**

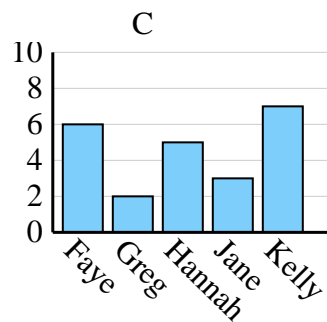
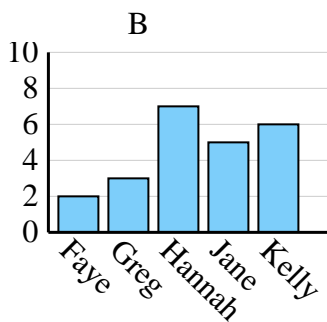
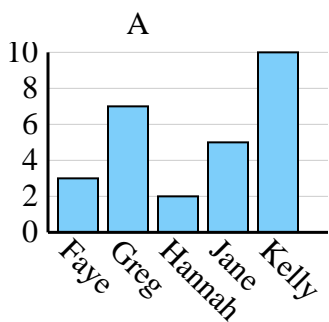
3. **A**

4. **B**

<b>Sales</b>	Jan	Feb	Mar	Apr	May
<b>Month</b>	2,000	2,500	4,500	4,000	500



<b>Name</b>	Faye	Greg	Hannah	Jane	Kelly
<b>States Lived In</b>	3	7	2	5	10



<b>Name</b>	Adam	Bill	Cody	Dan	Ed
<b>Points</b>	25	45	15	35	30

