

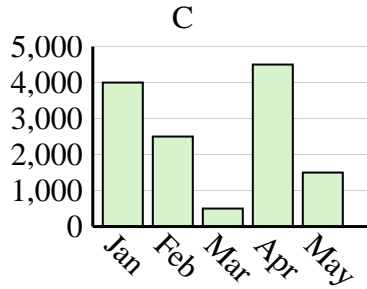
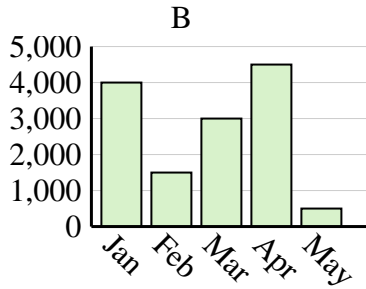
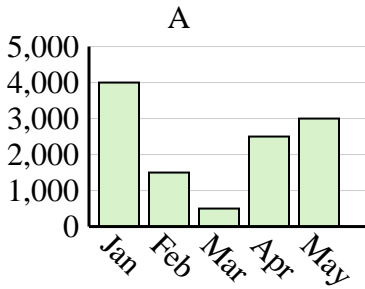


Determine which graph (A, B or C) best represents the information in the table.

Answers

1)

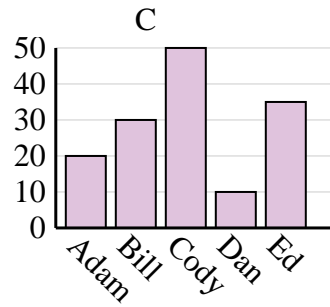
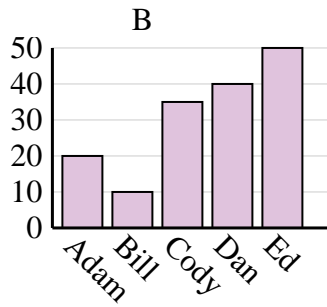
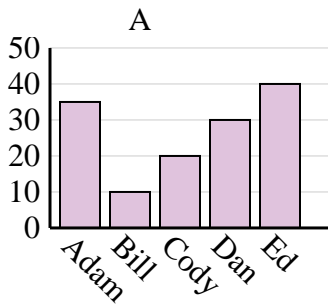
Sales	Jan	Feb	Mar	Apr	May
Month	4,000	2,500	500	4,500	1,500



1. \_\_\_\_\_
2. \_\_\_\_\_
3. \_\_\_\_\_
4. \_\_\_\_\_

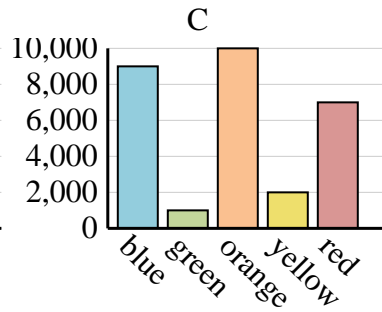
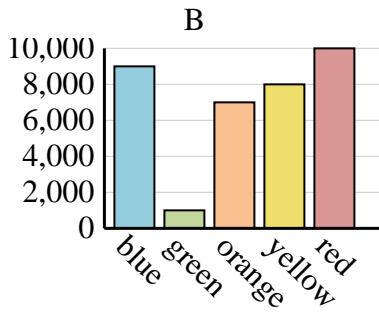
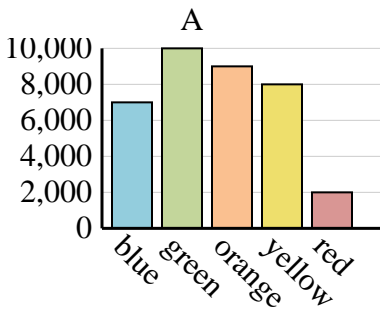
2)

Name	Adam	Bill	Cody	Dan	Ed
Points	20	10	35	40	50



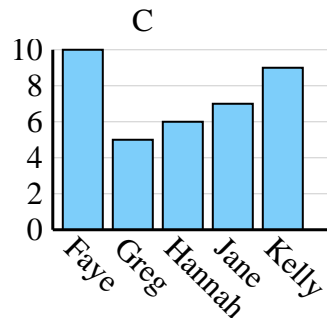
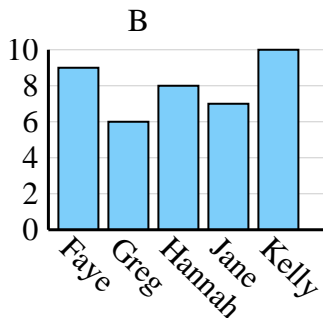
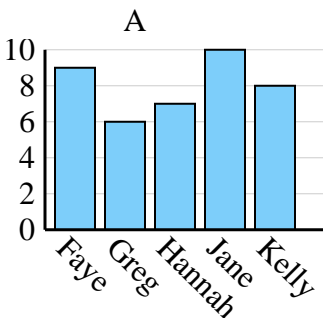
3)

Favorite Color	blue	green	orange	yellow	red
People	9,000	1,000	10,000	2,000	7,000



4)

Name	Faye	Greg	Hannah	Jane	Kelly
States Lived In	10	5	6	7	9



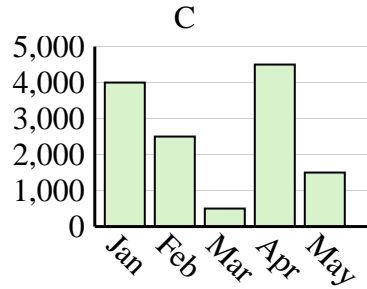
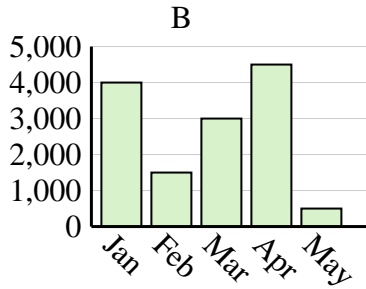
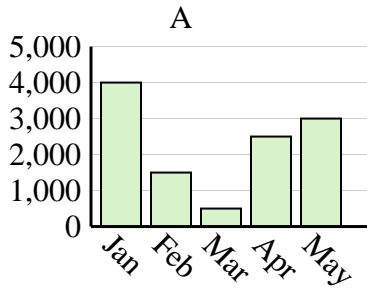


Determine which graph (A, B or C) best represents the information in the table.

Answers

1)

Sales	Jan	Feb	Mar	Apr	May
Month	4,000	2,500	500	4,500	1,500



1. **C**

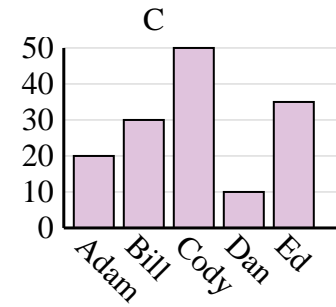
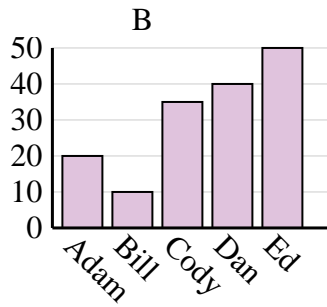
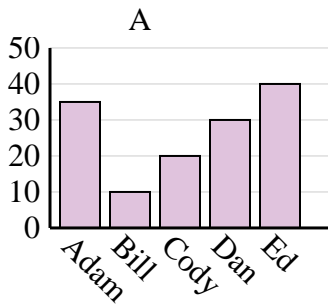
2. **B**

3. **C**

4. **C**

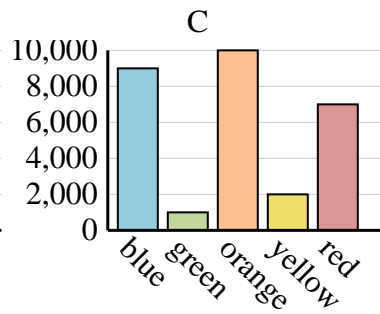
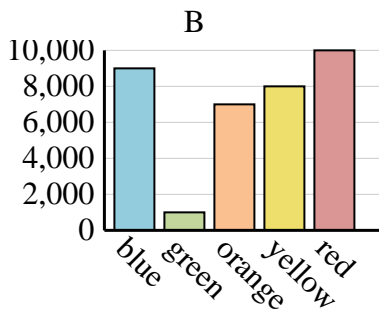
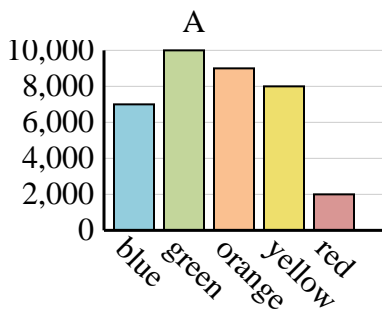
2)

Name	Adam	Bill	Cody	Dan	Ed
Points	20	10	35	40	50



3)

Favorite Color	blue	green	orange	yellow	red
People	9,000	1,000	10,000	2,000	7,000



4)

Name	Faye	Greg	Hannah	Jane	Kelly
States Lived In	10	5	6	7	9

