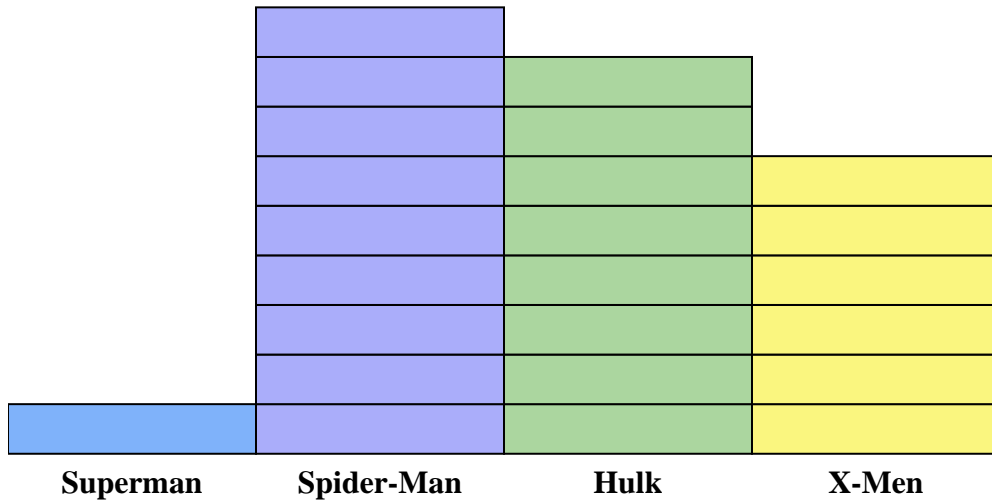




Solve each problem.



Each = 2 issues sold

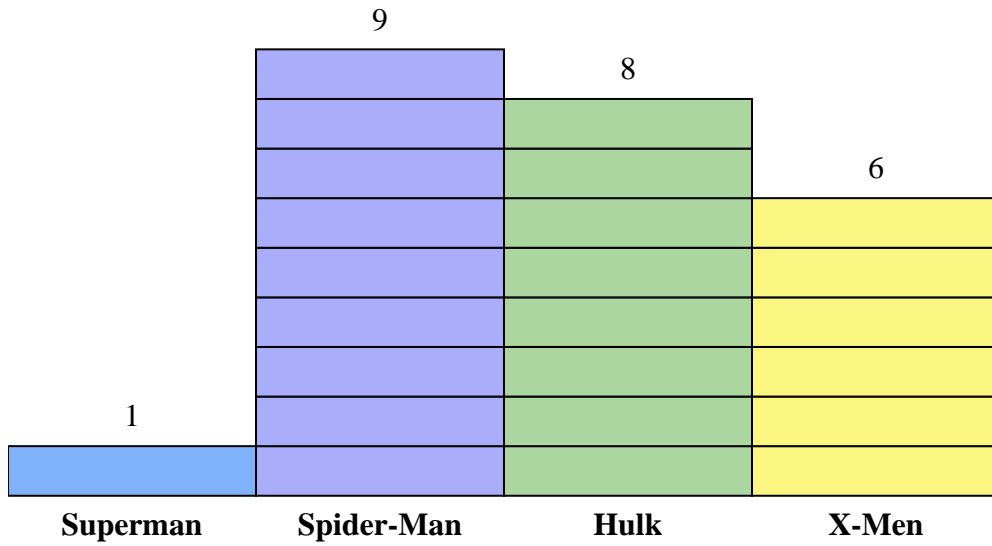
Answers

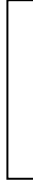
1. _____
2. _____
3. _____
4. _____
5. _____
6. _____
7. _____
8. _____
9. _____
10. _____

- 1) How many more issues of Spider-Man were sold than issues of Superman?
- 2) Which comic series sold the most issues?
- 3) Which comic series sold the fewest issues?
- 4) What is the total number of issues sold for all the comics?
- 5) Which sold fewer, issues of Hulk or issues of X-Men?
- 6) Which comic series sold more, Hulk or Spider-Man?
- 7) Which comic series sold exactly 16 issues?
- 8) How many issues of Superman were sold?
- 9) What is the combined number of Spider-Man and X-Men issues sold?
- 10) What is the difference in the number of X-Men issues sold and the number of Superman issues sold?



Solve each problem.



Each  = 2 issues sold

Answers

1. 16
2. Spider-Man
3. Superman
4. 48
5. X-Men
6. Spider-Man
7. Hulk
8. 2
9. 30
10. 10

- 1) How many more issues of Spider-Man were sold than issues of Superman?
- 2) Which comic series sold the most issues?
- 3) Which comic series sold the fewest issues?
- 4) What is the total number of issues sold for all the comics?
- 5) Which sold fewer, issues of Hulk or issues of X-Men?
- 6) Which comic series sold more, Hulk or Spider-Man?
- 7) Which comic series sold exactly 16 issues?
- 8) How many issues of Superman were sold?
- 9) What is the combined number of Spider-Man and X-Men issues sold?
- 10) What is the difference in the number of X-Men issues sold and the number of Superman issues sold?