



Determine which letter best represents the volume.

Answers

**Cup**

A cup is about the amount of milk you get from the cafeteria.

**Pint**

A pint is about the amount you get in a large glass.

1 pint = 2 cups

**Quart**

A quart is about the amount you get in a large milk container.

1 quart = 2 pints

**Gallon**

A gallon is the amount that comes in the large plastic container.

1 gallon = 4 quarts



1)



Glue in a bottle

- A. 3 gallons
- B. 1 pint
- C. 2 quarts
- D. 0.5 cups


2)



Measuring Cup

- A. 1 cup
- B. 1 quart
- C. 1 pint
- D. 1 gallon

3)



Liquid in a pitcher

- A. 2 cups
- B. 8 gallons
- C. 2 quarts
- D. 1 pint

4)



Liquid a spoon holds

- A. 1 pint
- B. Less than a cup
- C. 1 cup
- D. 1 quart

5)



Water for a house plant

- A. 2 cups
- B. 6 quarts
- C. 4 pounds
- D. 3 gallons

6)



Liquid in a tea cup

- A. 1 quart
- B. 1 pint
- C. 1 cup
- D. 1 gallon

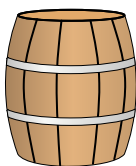
7)



Ink in a pen

- A. 1 quart
- B. less than 1 cup
- C. 2 pints
- D. 1 gallon

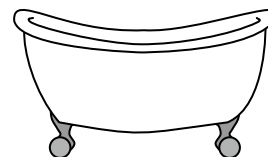
8)



Water a barrel holds

- A. 10 pints
- B. 50 gallons
- C. 20 cups
- D. 3 inches

9)



Bathtub

- A. 20 pints
- B. 45 gallons
- C. 40 cups
- D. 8 quarts

- 1. \_\_\_\_\_
- 2. \_\_\_\_\_
- 3. \_\_\_\_\_
- 4. \_\_\_\_\_
- 5. \_\_\_\_\_
- 6. \_\_\_\_\_
- 7. \_\_\_\_\_
- 8. \_\_\_\_\_
- 9. \_\_\_\_\_



Determine which letter best represents the volume.

**Cup**

A cup is about the amount of milk you get from the cafeteria.

**Pint**

A pint is about the amount you get in a large glass.

1 pint = 2 cups

**Quart**

A quart is about the amount you get in a large milk container.

1 quart = 2 pints

**Gallon**

A gallon is the amount that comes in the large plastic container.

1 gallon = 4 quarts



1)



Glue in a bottle

- A. 3 gallons
- B. 1 pint
- C. 2 quarts
- D. 0.5 cups


2)



Measuring Cup

- A. 1 cup
- B. 1 quart
- C. 1 pint
- D. 1 gallon

3)



Liquid in a pitcher

- A. 2 cups
- B. 8 gallons
- C. 2 quarts
- D. 1 pint

4)



Liquid a spoon holds

- A. 1 pint
- B. Less than a cup
- C. 1 cup
- D. 1 quart

5)



Water for a house plant

- A. 2 cups
- B. 6 quarts
- C. 4 pounds
- D. 3 gallons

6)



Liquid in a tea cup

- A. 1 quart
- B. 1 pint
- C. 1 cup
- D. 1 gallon

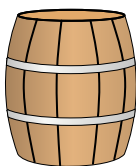
7)



Ink in a pen

- A. 1 quart
- B. less than 1 cup
- C. 2 pints
- D. 1 gallon

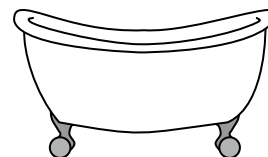
8)



Water a barrel holds

- A. 10 pints
- B. 50 gallons
- C. 20 cups
- D. 3 inches

9)



Bathtub

- A. 20 pints
- B. 45 gallons
- C. 40 cups
- D. 8 quarts

**Answers**

1. **D**

2. **A**

3. **C**

4. **B**

5. **A**

6. **C**

7. **B**

8. **B**

9. **B**