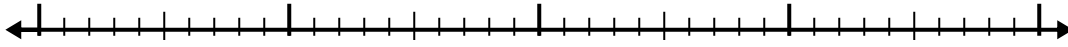




Use the number line to solve each problem.

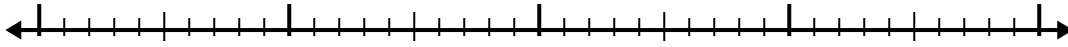
1)  $6.1 + 1.7 =$



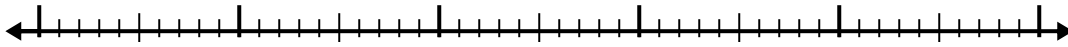
2)  $2.8 + 1.3 =$




3)  $5.6 + 1.3 =$



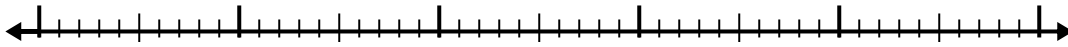
4)  $7.5 + 3.7 =$



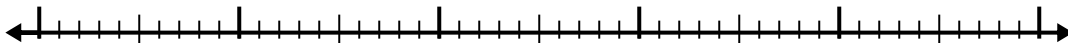
5)  $7.8 + 2.9 =$



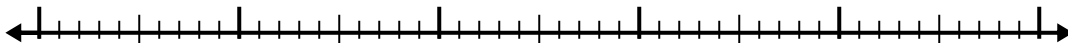
6)  $3.4 + 2.5 =$



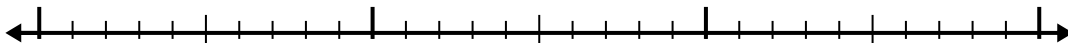
7)  $6.7 + 2.7 =$



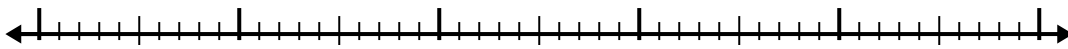
8)  $2.1 + 3.3 =$



9)  $1 + 1.7 =$



10)  $3 + 3.1 =$



Answers

1. \_\_\_\_\_

2. \_\_\_\_\_

3. \_\_\_\_\_

4. \_\_\_\_\_

5. \_\_\_\_\_

6. \_\_\_\_\_

7. \_\_\_\_\_

8. \_\_\_\_\_

9. \_\_\_\_\_

10. \_\_\_\_\_

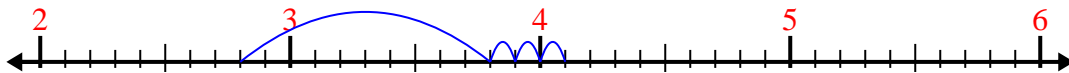


Use the number line to solve each problem.

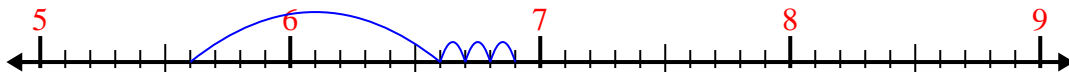
1)  $6.1 + 1.7 =$



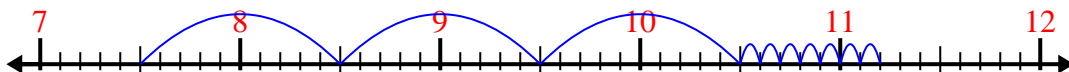
2)  $2.8 + 1.3 =$



3)  $5.6 + 1.3 =$



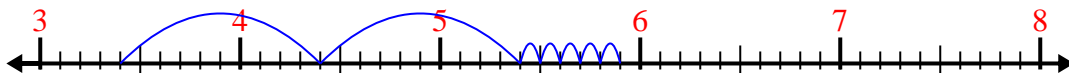
4)  $7.5 + 3.7 =$



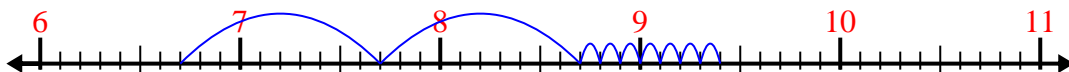
5)  $7.8 + 2.9 =$



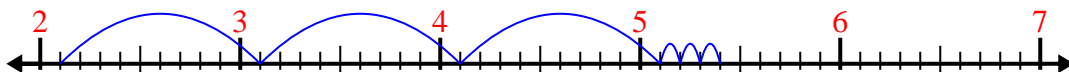
6)  $3.4 + 2.5 =$



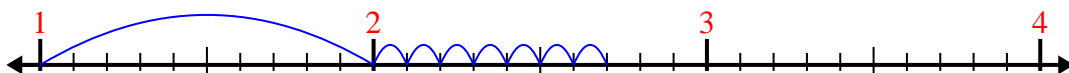
7)  $6.7 + 2.7 =$



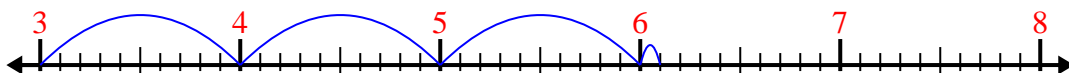
8)  $2.1 + 3.3 =$



9)  $1 + 1.7 =$



10)  $3 + 3.1 =$



Answers

1. 7.8

2. 4.1

3. 6.9

4. 11.2

5. 10.7

6. 5.9

7. 9.4

8. 5.4

9. 2.7

10. 6.1