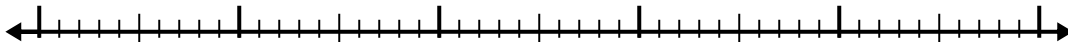


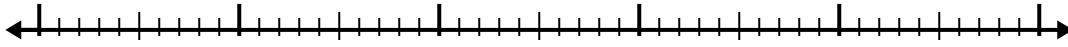


Use the number line to solve each problem.

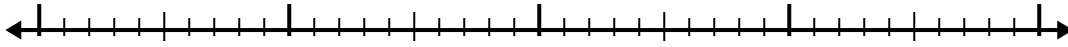
1) $4.8 + 3.8 =$



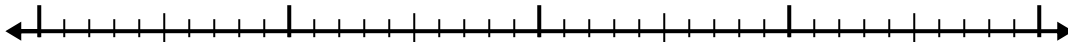
2) $6.1 + 2.7 =$



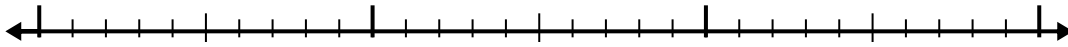
3) $5.5 + 1.3 =$



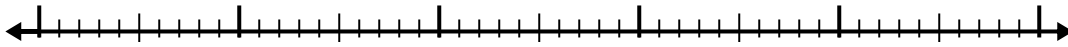
4) $2.8 + 2.4 =$




5) $1.4 + 1.3 =$



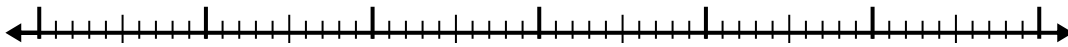
6) $4.6 + 2.4 =$



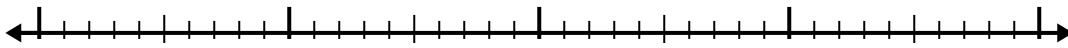
7) $8 + 2.5 =$



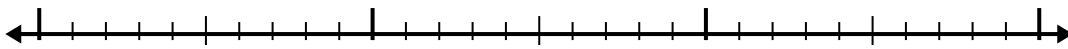
8) $8.5 + 3.8 =$



9) $1.5 + 2.7 =$



10) $1.7 + 1.3 =$



Answers

1. _____

2. _____

3. _____

4. _____

5. _____

6. _____

7. _____

8. _____


9. _____

10. _____

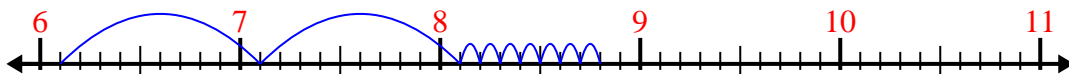


Use the number line to solve each problem.

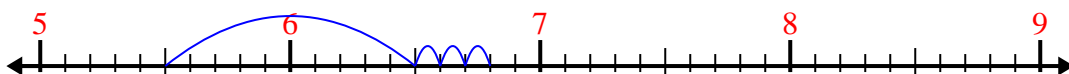
1) $4.8 + 3.8 =$



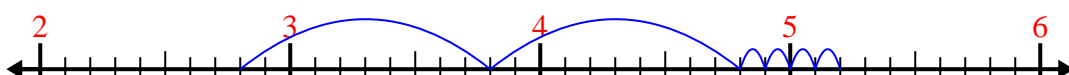
2) $6.1 + 2.7 =$



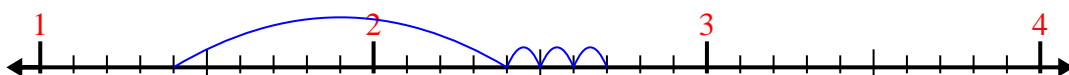
3) $5.5 + 1.3 =$



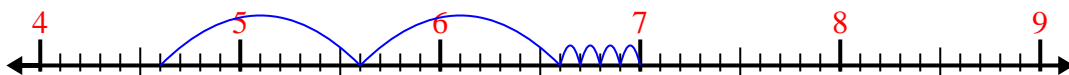
4) $2.8 + 2.4 =$



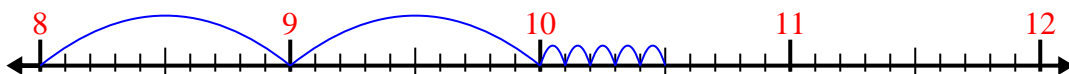
5) $1.4 + 1.3 =$



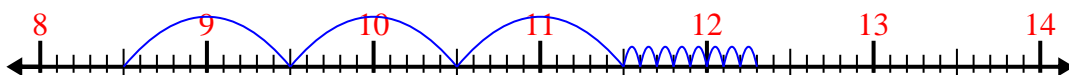
6) $4.6 + 2.4 =$



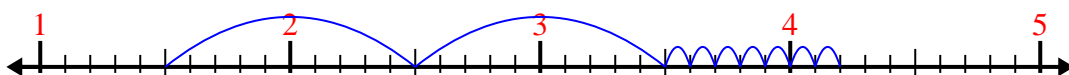
7) $8 + 2.5 =$



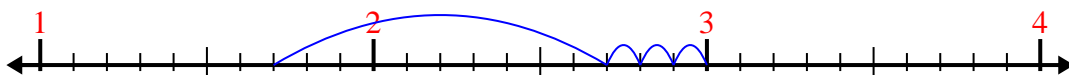
8) $8.5 + 3.8 =$



9) $1.5 + 2.7 =$



10) $1.7 + 1.3 =$



Answers

1. 8.6

2. 8.8

3. 6.8

4. 5.2

5. 2.7

6. 7.0

7. 10.5

8. 12.3

9. 4.2

10. 3.0