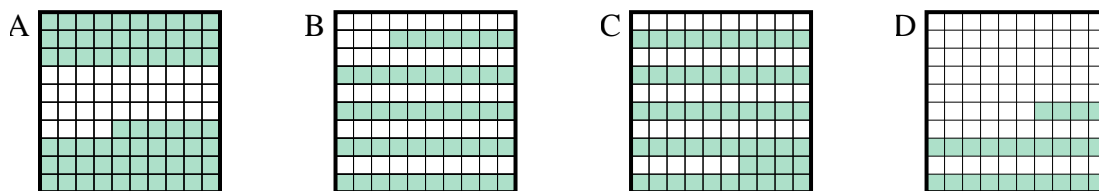




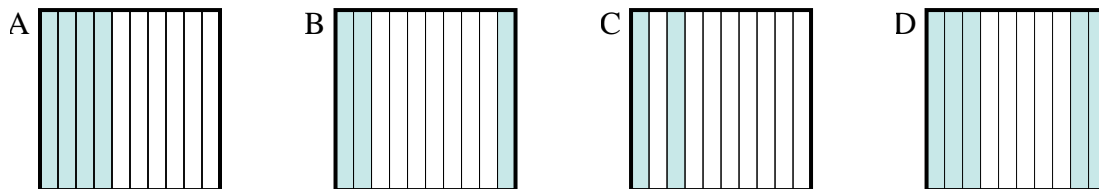
Determine which letter best answer the question.

Answers

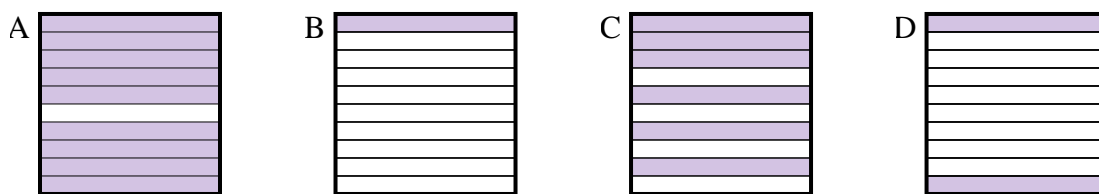
- 1) Which 10×10 grid is shaded to represent the decimal number that, when added to 0.76, results in a total of 1.00?



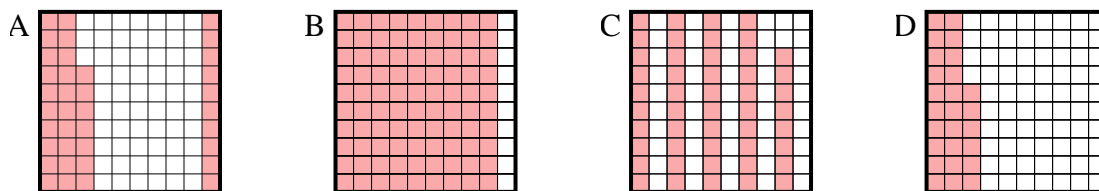
- 2) Which 10×1 grid is shaded to represent the decimal number that, when added to 0.5, results in a total of 1.00?



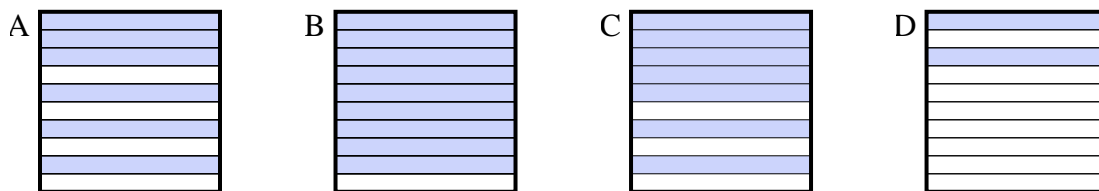
- 3) Which 10×1 grid is shaded to represent the decimal number that, when added to 0.1, results in a total of 1.00?



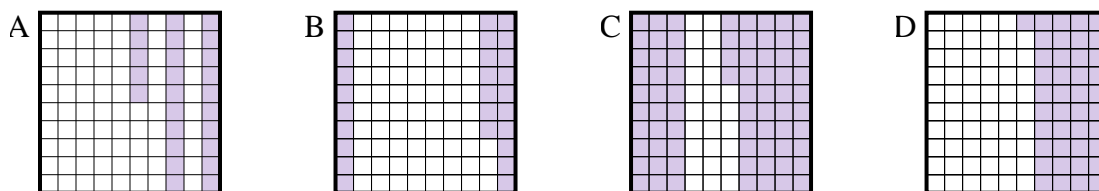
- 4) Which 10×10 grid is shaded to represent the decimal number that, when added to 0.63, results in a total of 1.00?



- 5) Which 10×1 grid is shaded to represent the decimal number that, when added to 0.3, results in a total of 1.00?



- 6) Which 10×10 grid is shaded to represent the decimal number that, when added to 0.75, results in a total of 1.00?

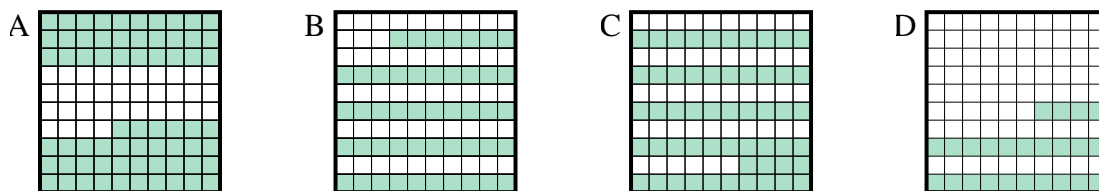


1. _____
2. _____
3. _____
4. _____
5. _____
6. _____

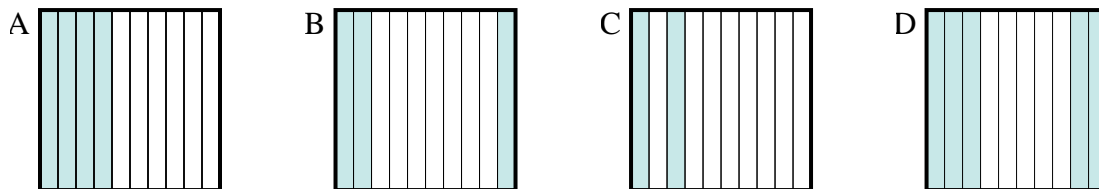


Determine which letter best answer the question.

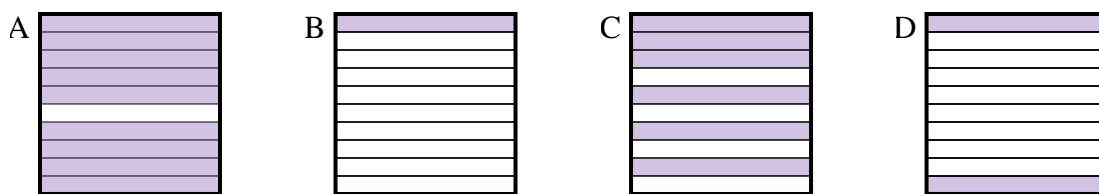
1) Which 10×10 grid is shaded to represent the decimal number that, when added to 0.76, results in a total of 1.00?



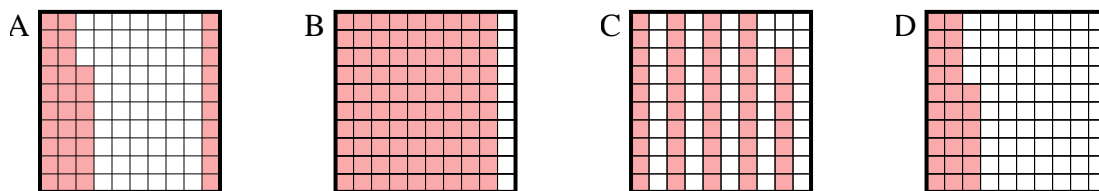
2) Which 10×1 grid is shaded to represent the decimal number that, when added to 0.5, results in a total of 1.00?



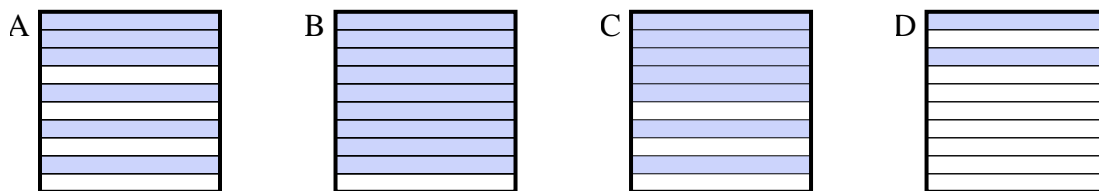
3) Which 10×1 grid is shaded to represent the decimal number that, when added to 0.1, results in a total of 1.00?



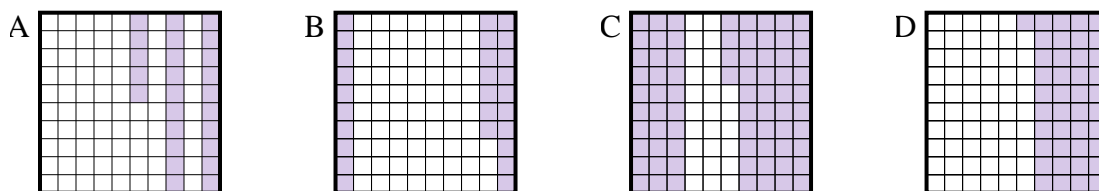
4) Which 10×10 grid is shaded to represent the decimal number that, when added to 0.63, results in a total of 1.00?



5) Which 10×1 grid is shaded to represent the decimal number that, when added to 0.3, results in a total of 1.00?



6) Which 10×10 grid is shaded to represent the decimal number that, when added to 0.75, results in a total of 1.00?



Answers

1. **D**

2. **D**

3. **A**

4. **A**

5. **C**

6. **A**