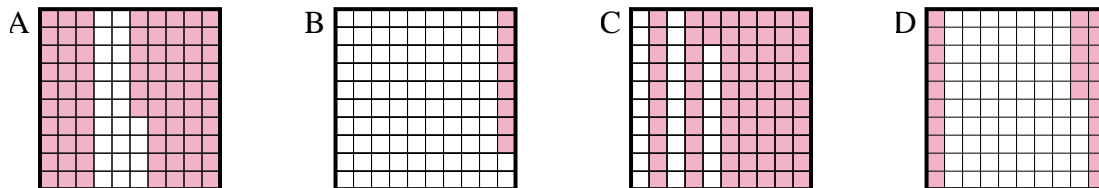




Determine which letter best answer the question.

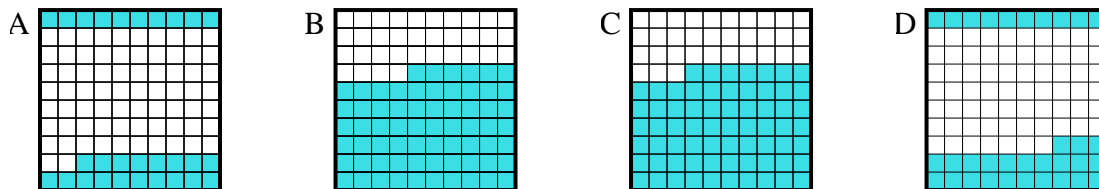
Answers

1) Which 10×10 grid is shaded to represent the decimal number that, when added to 0.75, results in a total of 1.00?



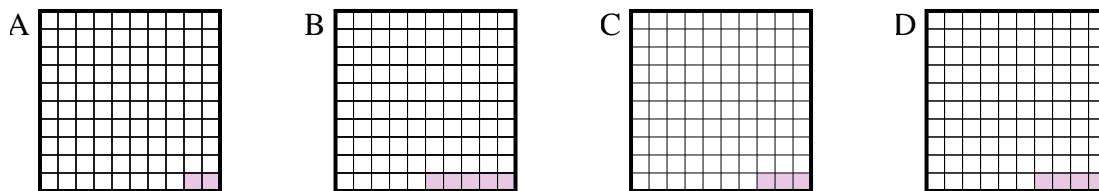
1. _____

2) Which 10×10 grid is shaded to represent the decimal number that, when added to 0.67, results in a total of 1.00?



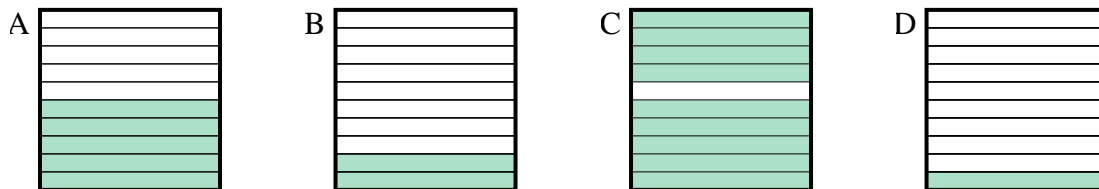
2. _____

3) Which 10×10 grid is shaded to represent the decimal number that, when added to 0.97, results in a total of 1.00?



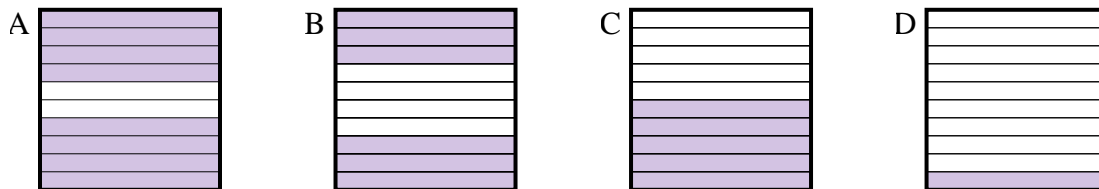
3. _____

4) Which 10×1 grid is shaded to represent the decimal number that, when added to 0.1, results in a total of 1.00?



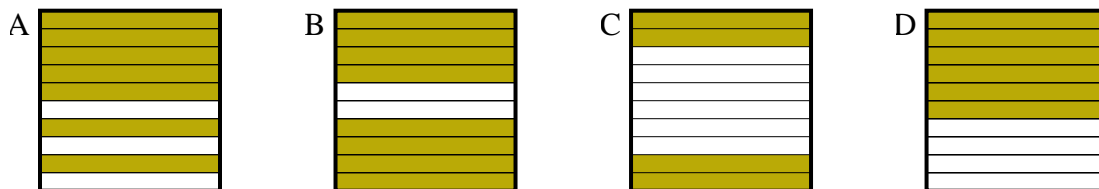
4. _____

5) Which 10×1 grid is shaded to represent the decimal number that, when added to 0.2, results in a total of 1.00?



5. _____

6) Which 10×1 grid is shaded to represent the decimal number that, when added to 0.6, results in a total of 1.00?

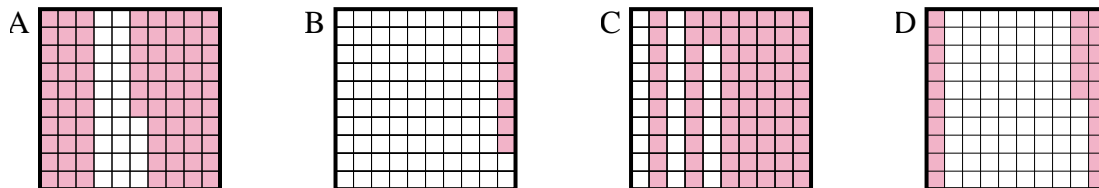


6. _____

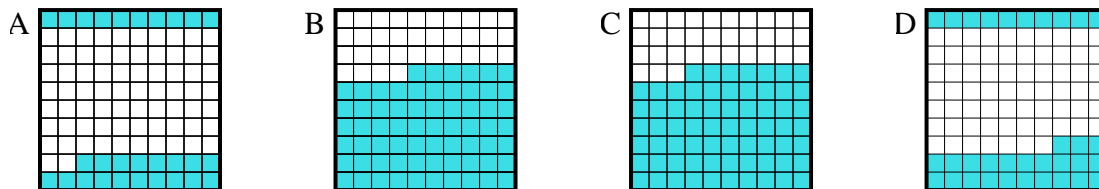


Determine which letter best answer the question.

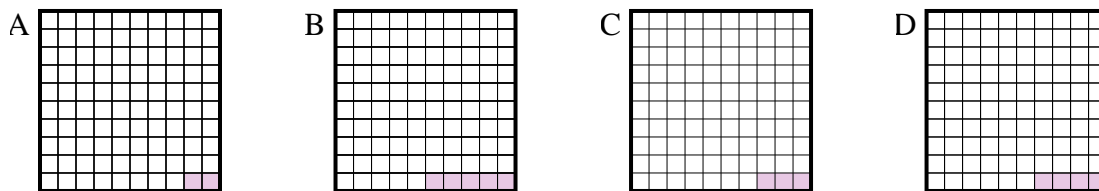
1) Which 10×10 grid is shaded to represent the decimal number that, when added to 0.75, results in a total of 1.00?



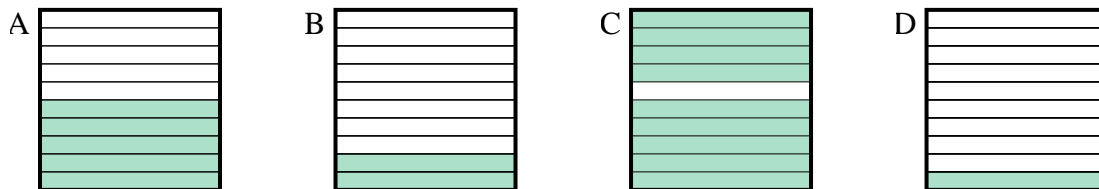
2) Which 10×10 grid is shaded to represent the decimal number that, when added to 0.67, results in a total of 1.00?



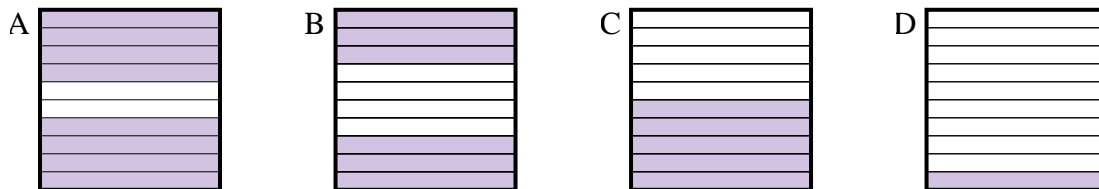
3) Which 10×10 grid is shaded to represent the decimal number that, when added to 0.97, results in a total of 1.00?



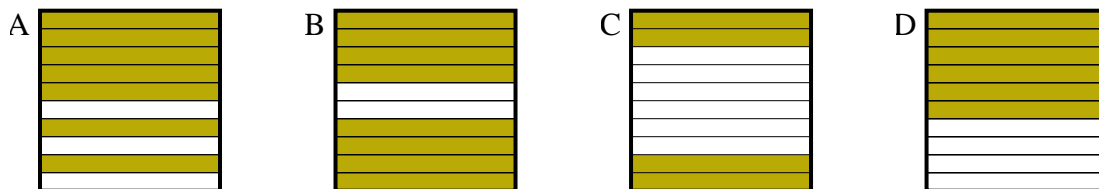
4) Which 10×1 grid is shaded to represent the decimal number that, when added to 0.1, results in a total of 1.00?



5) Which 10×1 grid is shaded to represent the decimal number that, when added to 0.2, results in a total of 1.00?



6) Which 10×1 grid is shaded to represent the decimal number that, when added to 0.6, results in a total of 1.00?



Answers

1. **D**

2. **D**

3. **C**

4. **C**

5. **A**

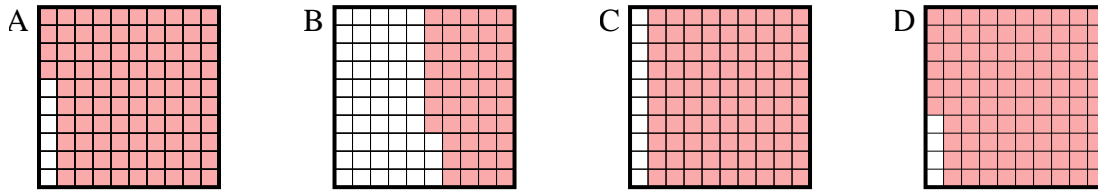
6. **C**



Determine which letter best answer the question.

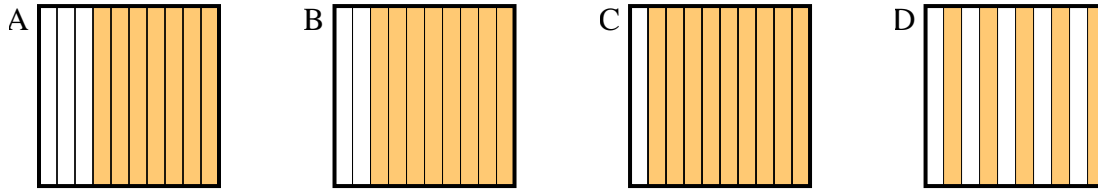
Answers

1) Which 10×10 grid is shaded to represent the decimal number that, when added to 0.04, results in a total of 1.00?



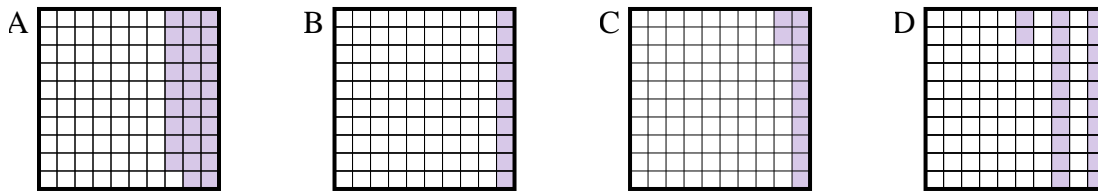
1. _____

2) Which 10×1 grid is shaded to represent the decimal number that, when added to 0.5, results in a total of 1.00?



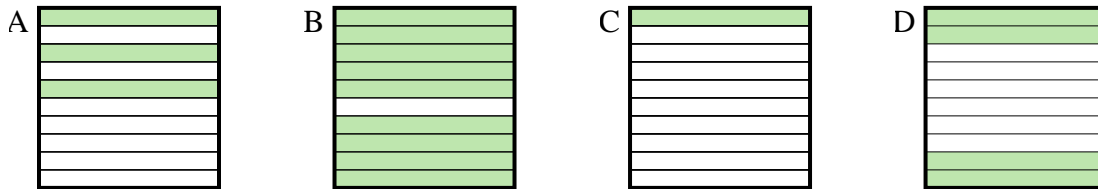
2. _____

3) Which 10×10 grid is shaded to represent the decimal number that, when added to 0.88, results in a total of 1.00?



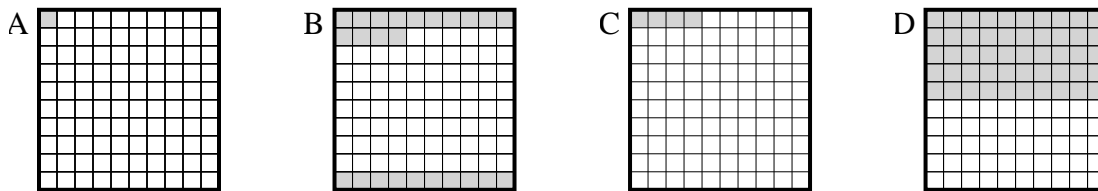
3. _____

4) Which 10×1 grid is shaded to represent the decimal number that, when added to 0.6, results in a total of 1.00?



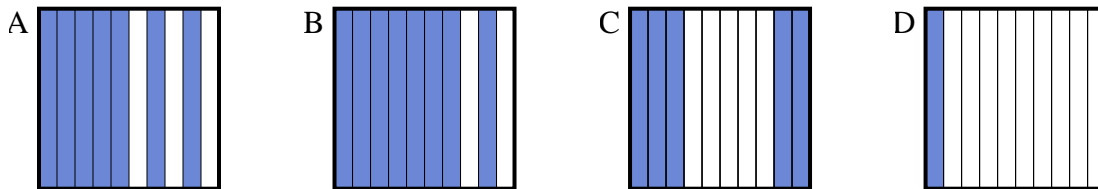
4. _____

5) Which 10×10 grid is shaded to represent the decimal number that, when added to 0.96, results in a total of 1.00?



5. _____

6) Which 10×1 grid is shaded to represent the decimal number that, when added to 0.3, results in a total of 1.00?

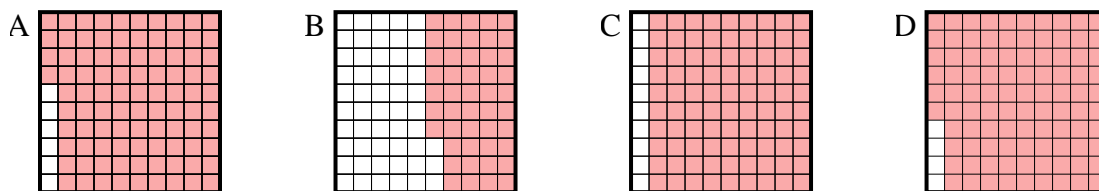


6. _____

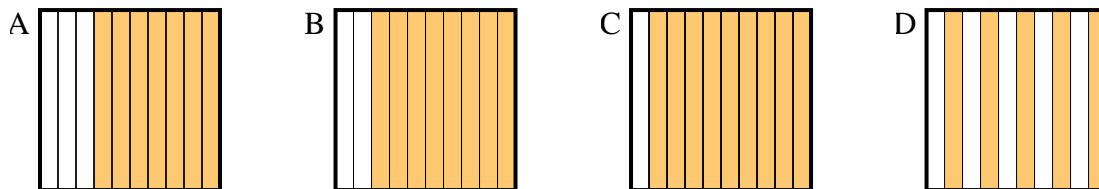


Determine which letter best answer the question.

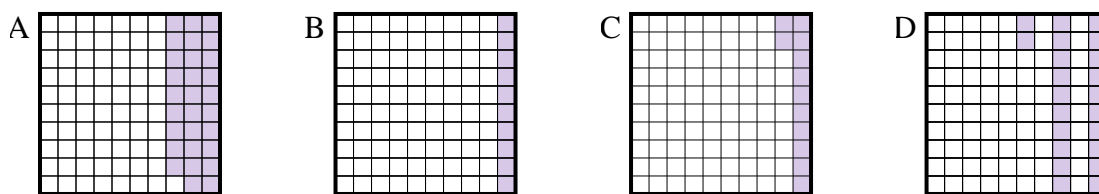
1) Which 10×10 grid is shaded to represent the decimal number that, when added to 0.04, results in a total of 1.00?



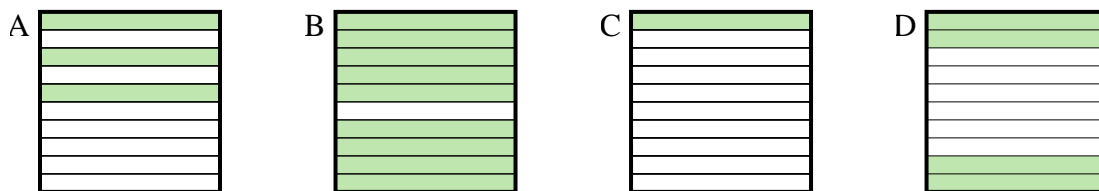
2) Which 10×1 grid is shaded to represent the decimal number that, when added to 0.5, results in a total of 1.00?



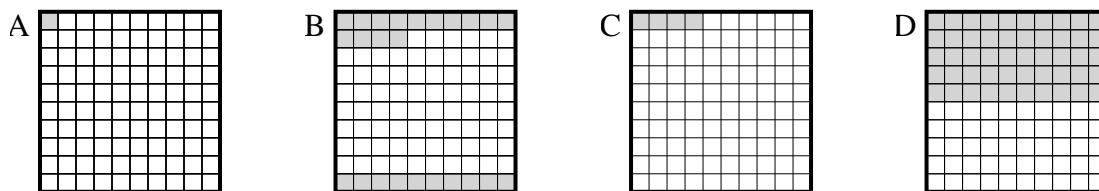
3) Which 10×10 grid is shaded to represent the decimal number that, when added to 0.88, results in a total of 1.00?



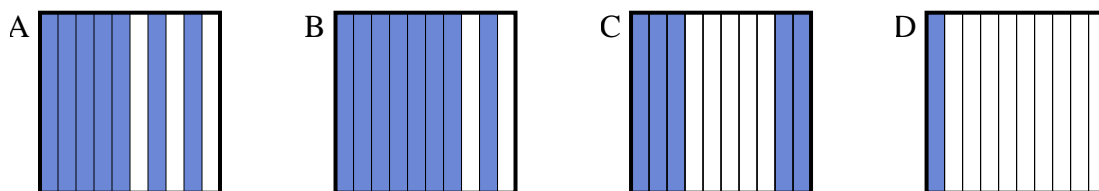
4) Which 10×1 grid is shaded to represent the decimal number that, when added to 0.6, results in a total of 1.00?



5) Which 10×10 grid is shaded to represent the decimal number that, when added to 0.96, results in a total of 1.00?



6) Which 10×1 grid is shaded to represent the decimal number that, when added to 0.3, results in a total of 1.00?



Answers

1. **D**

2. **D**

3. **C**

4. **D**

5. **C**

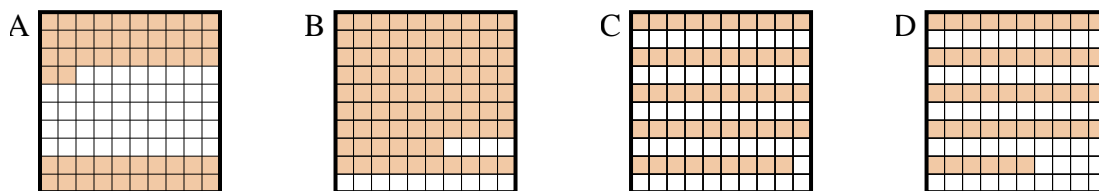
6. **A**



Determine which letter best answer the question.

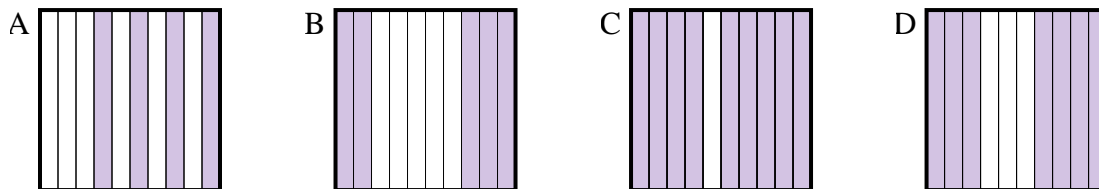
Answers

1) Which 10×10 grid is shaded to represent the decimal number that, when added to 0.48, results in a total of 1.00?



1. _____

2) Which 10×1 grid is shaded to represent the decimal number that, when added to 0.5, results in a total of 1.00?



2. _____

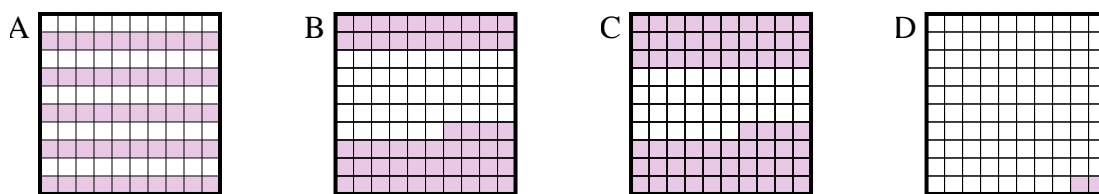
3. _____

4. _____

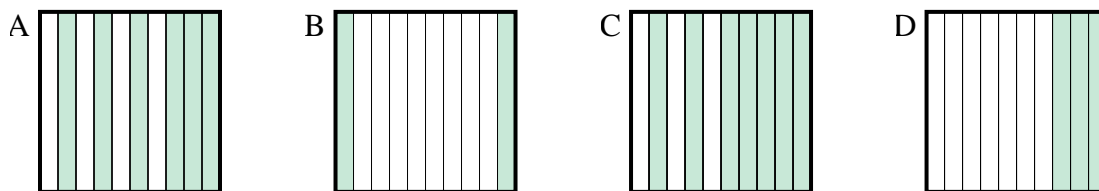
5. _____

6. _____

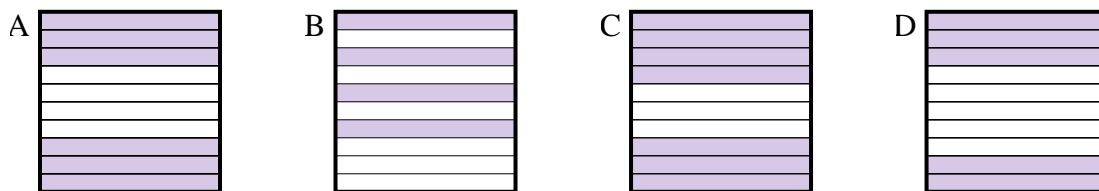
3) Which 10×10 grid is shaded to represent the decimal number that, when added to 0.5, results in a total of 1.00?



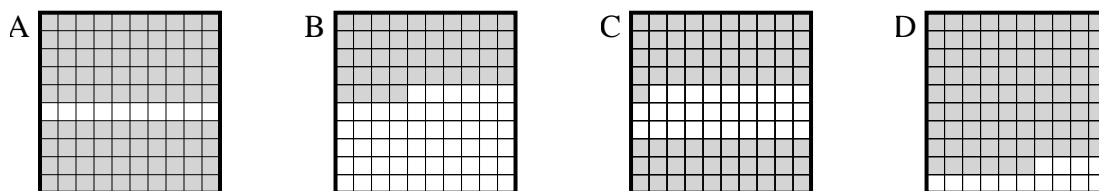
4) Which 10×1 grid is shaded to represent the decimal number that, when added to 0.8, results in a total of 1.00?



5) Which 10×1 grid is shaded to represent the decimal number that, when added to 0.6, results in a total of 1.00?



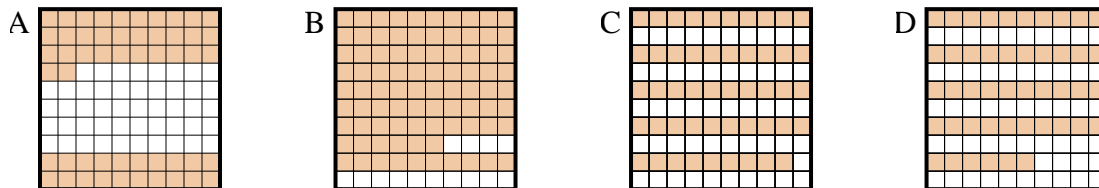
6) Which 10×10 grid is shaded to represent the decimal number that, when added to 0.1, results in a total of 1.00?



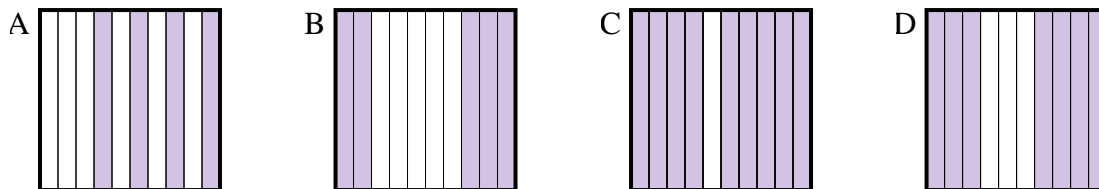


Determine which letter best answer the question.

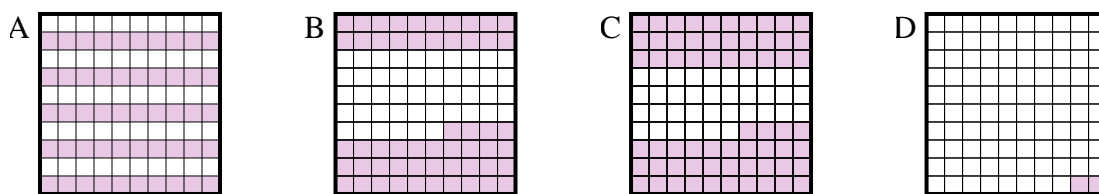
1) Which 10×10 grid is shaded to represent the decimal number that, when added to 0.48, results in a total of 1.00?



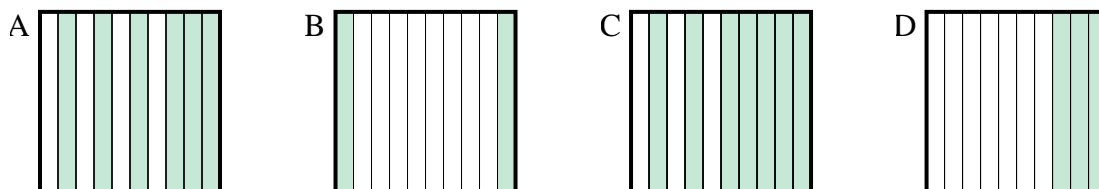
2) Which 10×1 grid is shaded to represent the decimal number that, when added to 0.5, results in a total of 1.00?



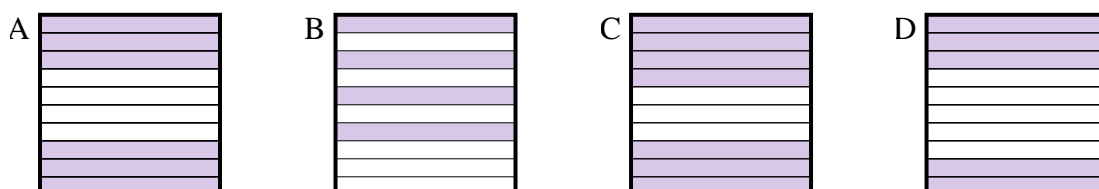
3) Which 10×10 grid is shaded to represent the decimal number that, when added to 0.5, results in a total of 1.00?



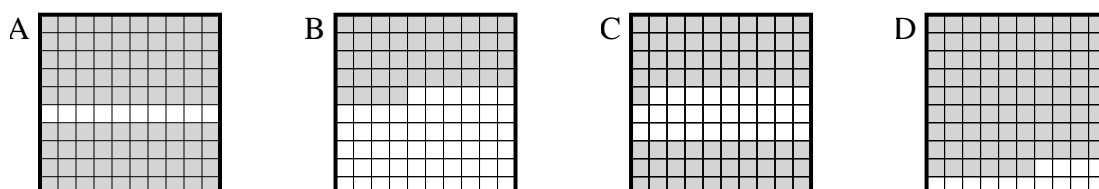
4) Which 10×1 grid is shaded to represent the decimal number that, when added to 0.8, results in a total of 1.00?



5) Which 10×1 grid is shaded to represent the decimal number that, when added to 0.6, results in a total of 1.00?



6) Which 10×10 grid is shaded to represent the decimal number that, when added to 0.1, results in a total of 1.00?



Answers

1. **A**

2. **B**

3. **A**

4. **B**

5. **B**

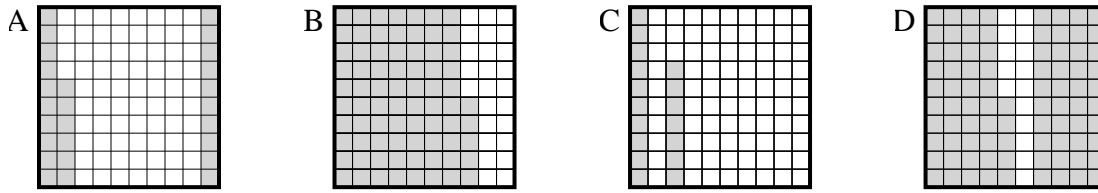
6. **A**



Determine which letter best answer the question.

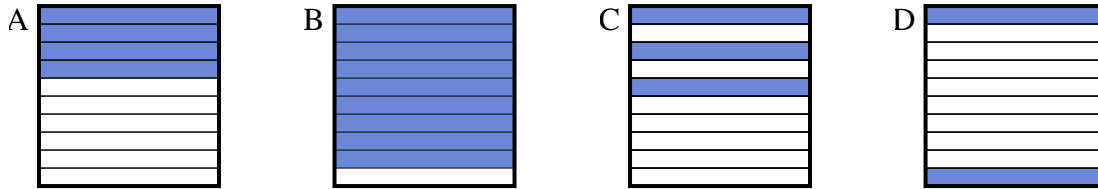
Answers

1) Which 10×10 grid is shaded to represent the decimal number that, when added to 0.74, results in a total of 1.00?



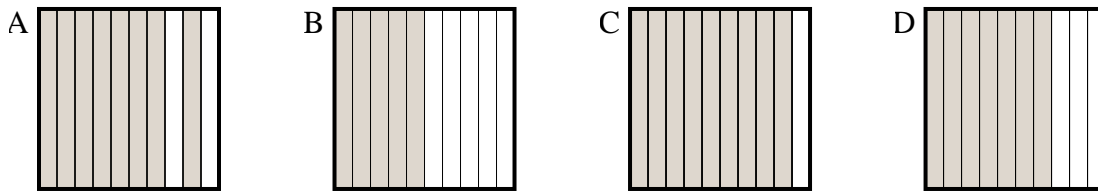
1. _____

2) Which 10×1 grid is shaded to represent the decimal number that, when added to 0.1, results in a total of 1.00?



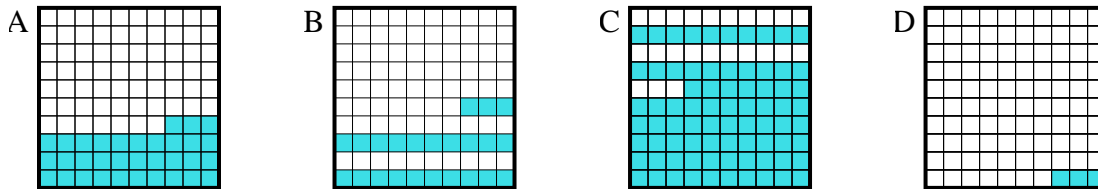
2. _____

3) Which 10×1 grid is shaded to represent the decimal number that, when added to 0.5, results in a total of 1.00?



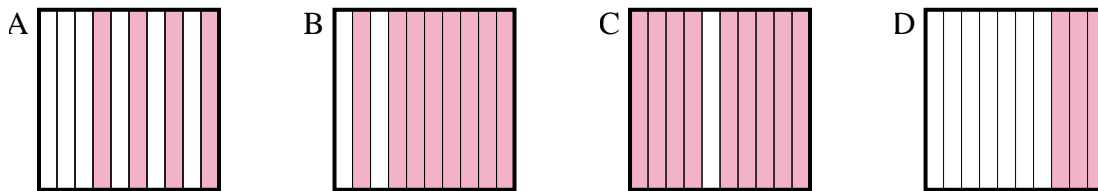
3. _____

4) Which 10×10 grid is shaded to represent the decimal number that, when added to 0.77, results in a total of 1.00?



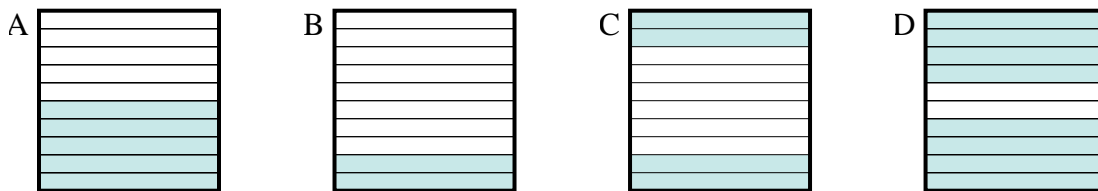
4. _____

5) Which 10×1 grid is shaded to represent the decimal number that, when added to 0.7, results in a total of 1.00?



5. _____

6) Which 10×1 grid is shaded to represent the decimal number that, when added to 0.6, results in a total of 1.00?

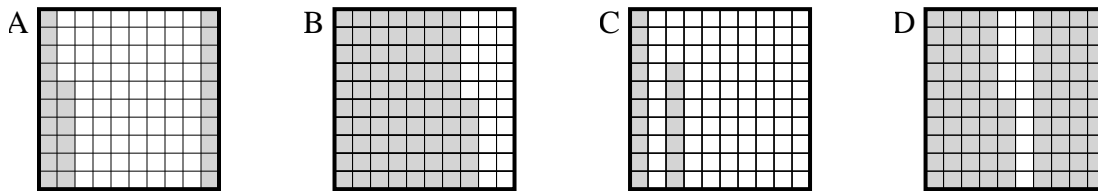


6. _____

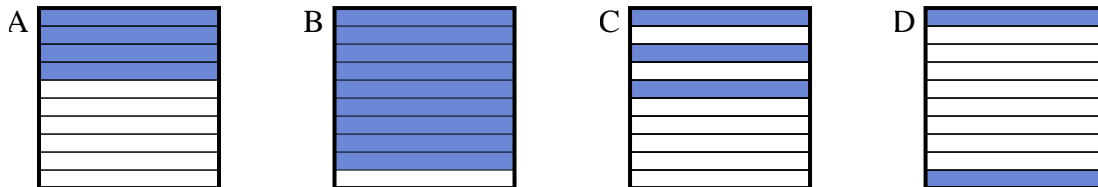


Determine which letter best answer the question.

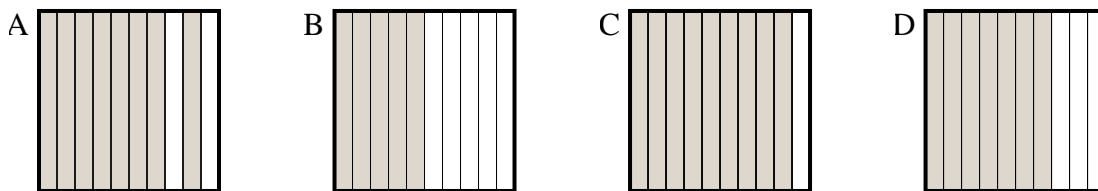
1) Which 10×10 grid is shaded to represent the decimal number that, when added to 0.74, results in a total of 1.00?



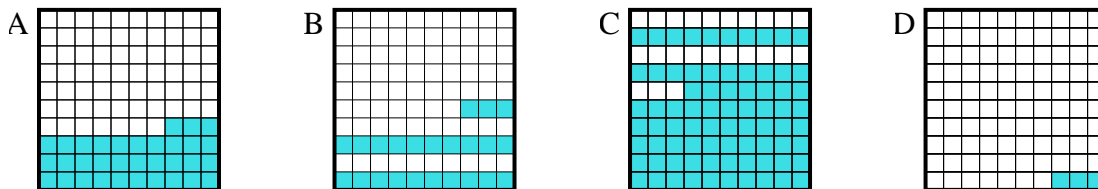
2) Which 10×1 grid is shaded to represent the decimal number that, when added to 0.1, results in a total of 1.00?



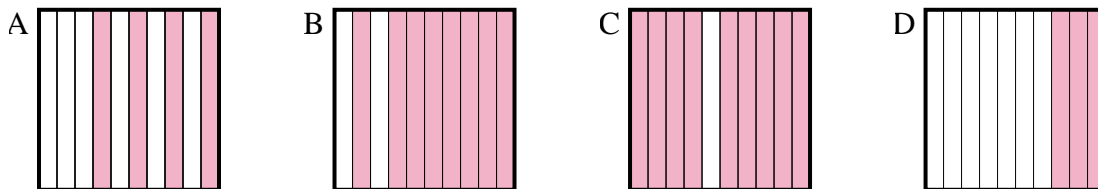
3) Which 10×1 grid is shaded to represent the decimal number that, when added to 0.5, results in a total of 1.00?



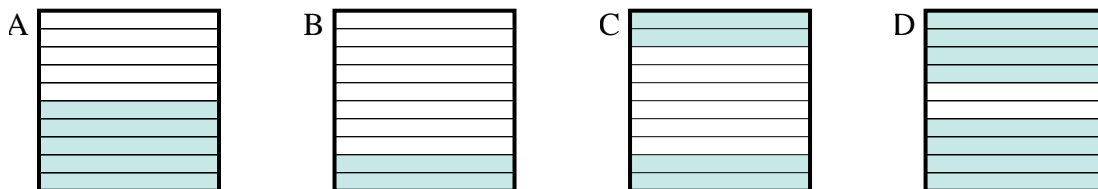
4) Which 10×10 grid is shaded to represent the decimal number that, when added to 0.77, results in a total of 1.00?



5) Which 10×1 grid is shaded to represent the decimal number that, when added to 0.7, results in a total of 1.00?



6) Which 10×1 grid is shaded to represent the decimal number that, when added to 0.6, results in a total of 1.00?



Answers

1. **A**

2. **B**

3. **B**

4. **B**

5. **D**

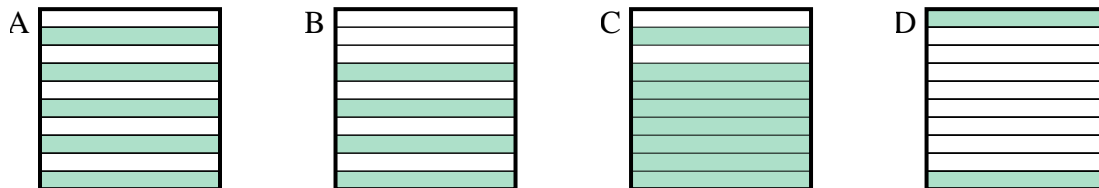
6. **C**



Determine which letter best answer the question.

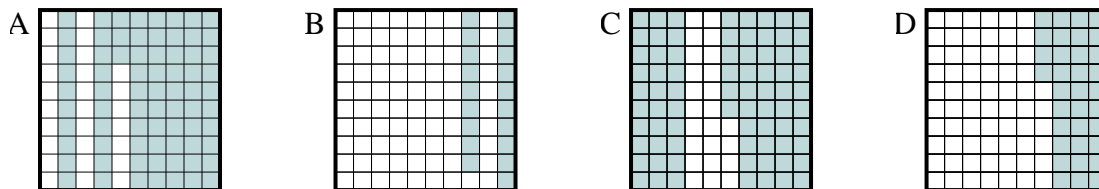
Answers

1) Which 10×1 grid is shaded to represent the decimal number that, when added to 0.2, results in a total of 1.00?



1. _____

2) Which 10×10 grid is shaded to represent the decimal number that, when added to 0.27, results in a total of 1.00?



2. _____

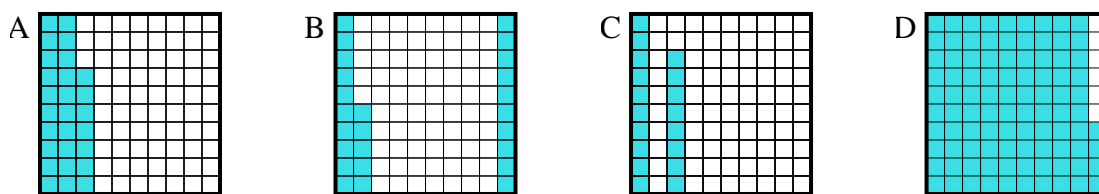
3. _____

4. _____

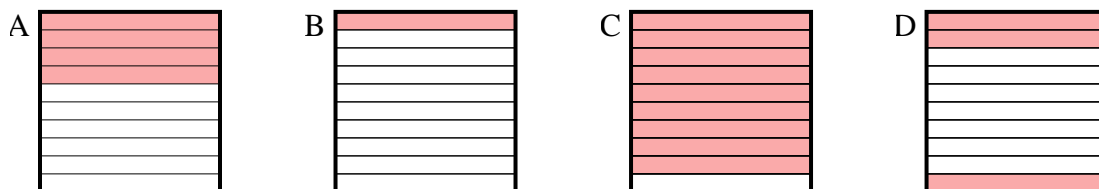
5. _____

6. _____

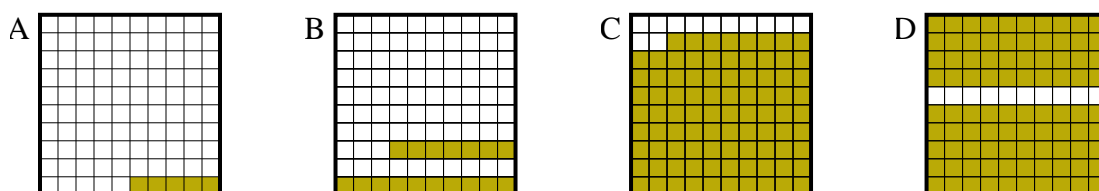
3) Which 10×10 grid is shaded to represent the decimal number that, when added to 0.06, results in a total of 1.00?



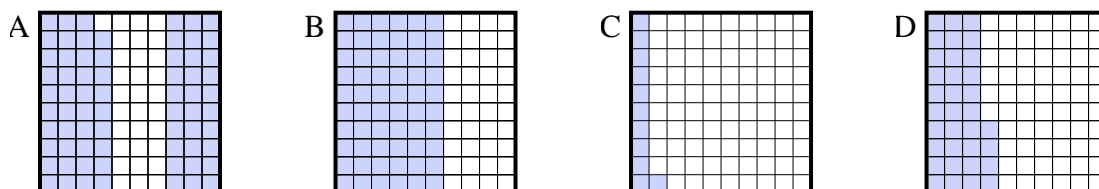
4) Which 10×1 grid is shaded to represent the decimal number that, when added to 0.6, results in a total of 1.00?



5) Which 10×10 grid is shaded to represent the decimal number that, when added to 0.95, results in a total of 1.00?



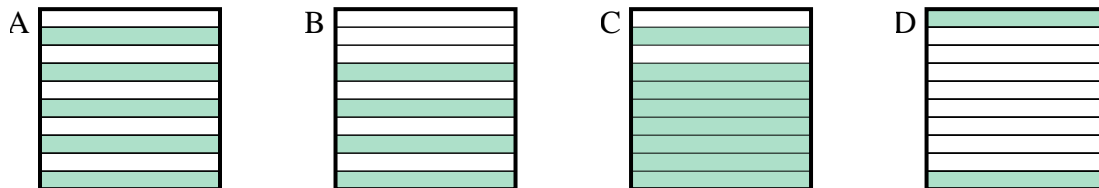
6) Which 10×10 grid is shaded to represent the decimal number that, when added to 0.89, results in a total of 1.00?



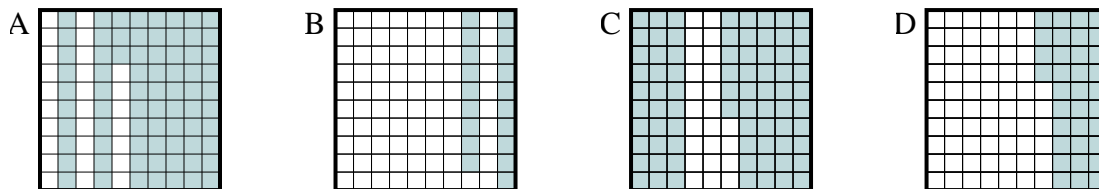


Determine which letter best answer the question.

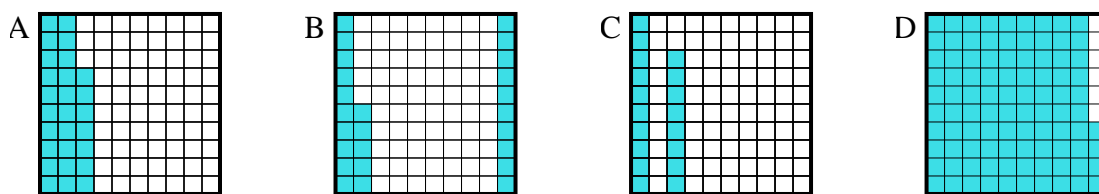
1) Which 10×1 grid is shaded to represent the decimal number that, when added to 0.2, results in a total of 1.00?



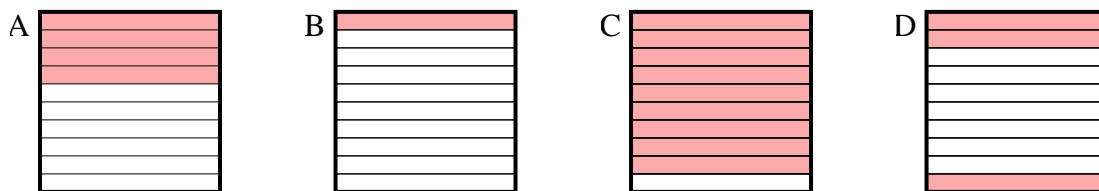
2) Which 10×10 grid is shaded to represent the decimal number that, when added to 0.27, results in a total of 1.00?



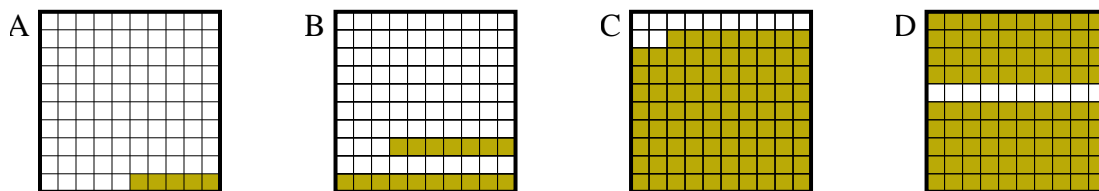
3) Which 10×10 grid is shaded to represent the decimal number that, when added to 0.06, results in a total of 1.00?



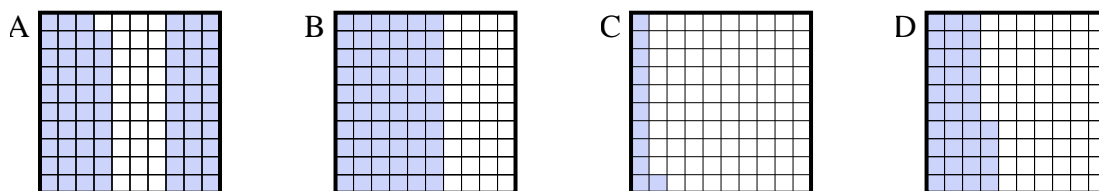
4) Which 10×1 grid is shaded to represent the decimal number that, when added to 0.6, results in a total of 1.00?



5) Which 10×10 grid is shaded to represent the decimal number that, when added to 0.95, results in a total of 1.00?



6) Which 10×10 grid is shaded to represent the decimal number that, when added to 0.89, results in a total of 1.00?



Answers

1. **C**

2. **A**

3. **D**

4. **A**

5. **A**

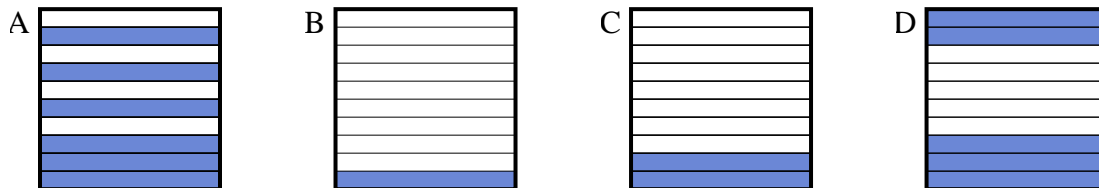
6. **C**



Determine which letter best answer the question.

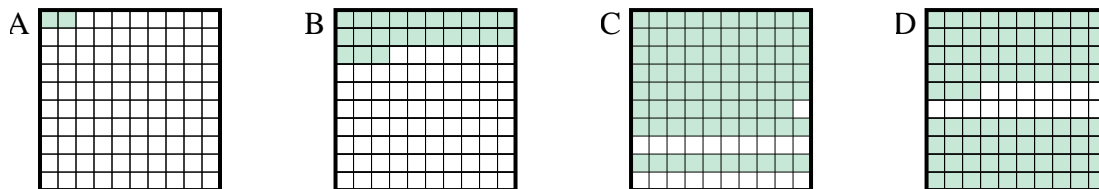
Answers

1) Which 10×1 grid is shaded to represent the decimal number that, when added to 0.9, results in a total of 1.00?



1. _____

2) Which 10×10 grid is shaded to represent the decimal number that, when added to 0.21, results in a total of 1.00?



2. _____

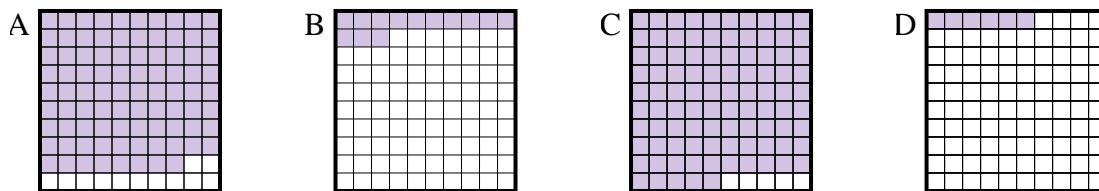
3. _____

4. _____

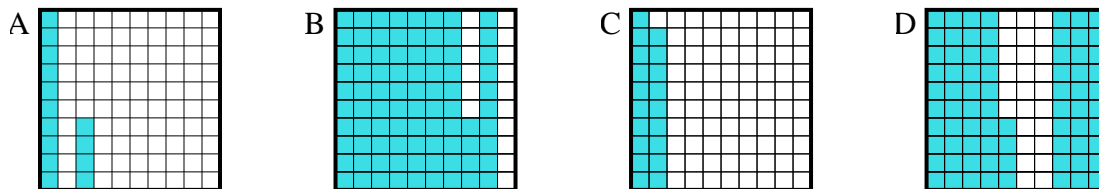
5. _____

6. _____

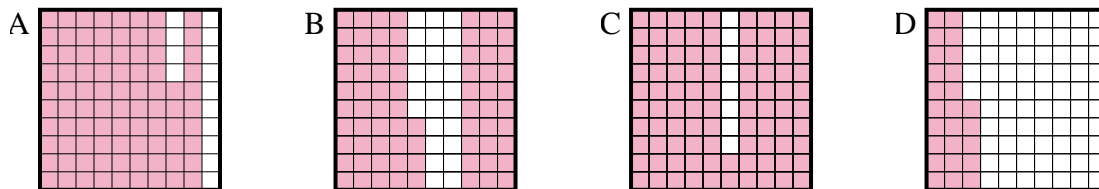
3) Which 10×10 grid is shaded to represent the decimal number that, when added to 0.87, results in a total of 1.00?



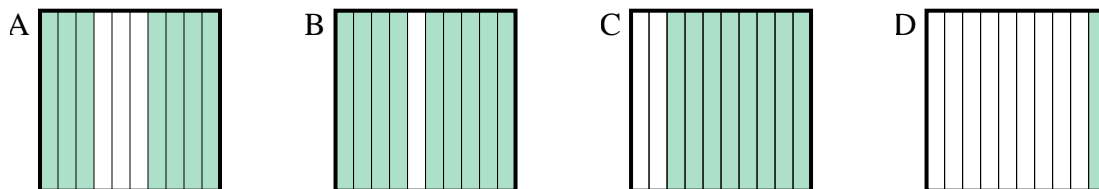
4) Which 10×10 grid is shaded to represent the decimal number that, when added to 0.86, results in a total of 1.00?



5) Which 10×10 grid is shaded to represent the decimal number that, when added to 0.14, results in a total of 1.00?



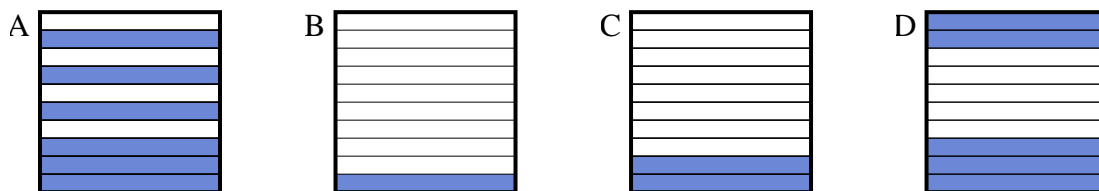
6) Which 10×1 grid is shaded to represent the decimal number that, when added to 0.3, results in a total of 1.00?



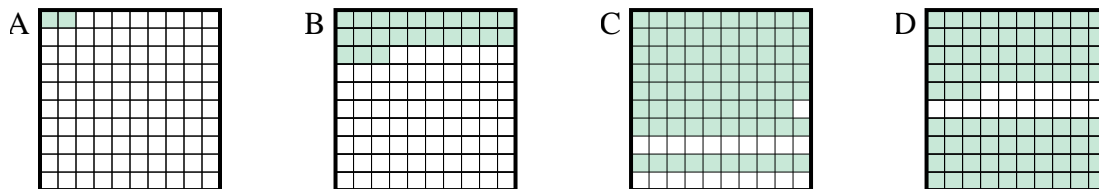


Determine which letter best answer the question.

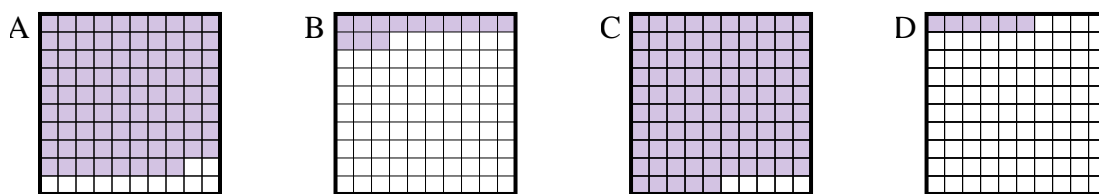
- 1) Which 10×1 grid is shaded to represent the decimal number that, when added to 0.9, results in a total of 1.00?



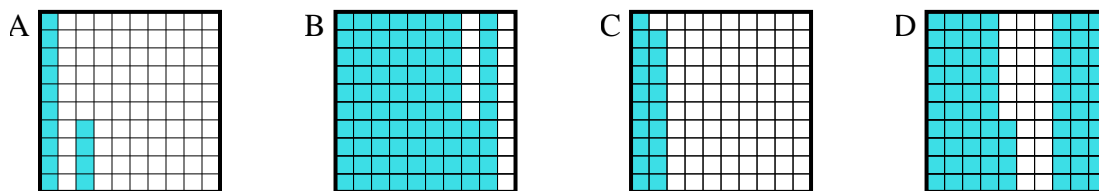
- 2) Which 10×10 grid is shaded to represent the decimal number that, when added to 0.21, results in a total of 1.00?



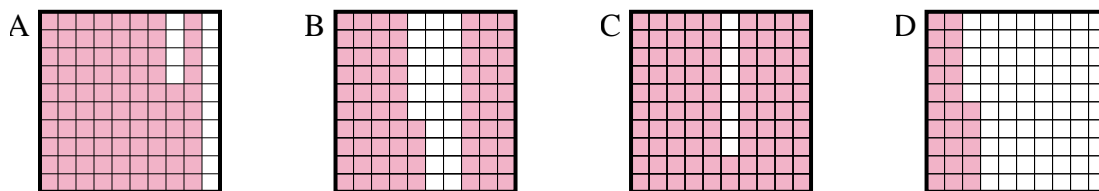
- 3) Which 10×10 grid is shaded to represent the decimal number that, when added to 0.87, results in a total of 1.00?



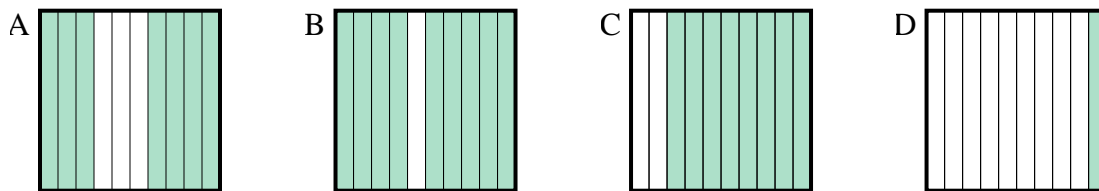
- 4) Which 10×10 grid is shaded to represent the decimal number that, when added to 0.86, results in a total of 1.00?



- 5) Which 10×10 grid is shaded to represent the decimal number that, when added to 0.14, results in a total of 1.00?



- 6) Which 10×1 grid is shaded to represent the decimal number that, when added to 0.3, results in a total of 1.00?

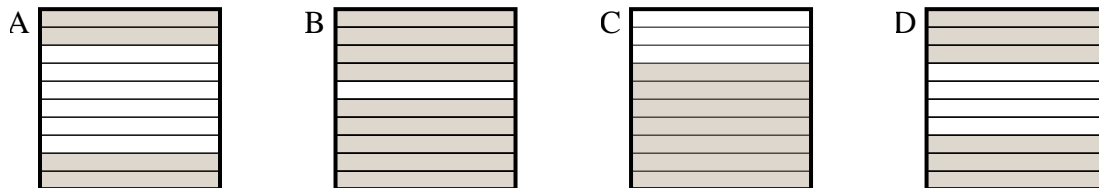
Answers1. **B**2. **C**3. **B**4. **A**5. **A**6. **A**



Determine which letter best answer the question.

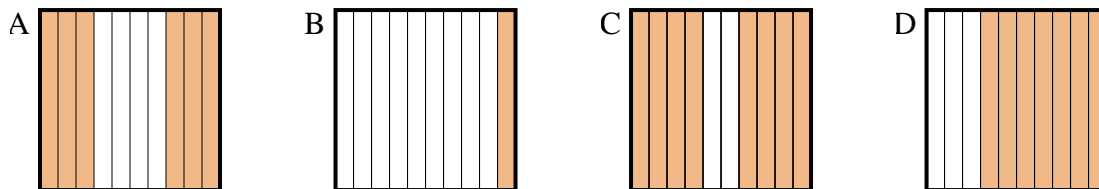
Answers

1) Which 10×1 grid is shaded to represent the decimal number that, when added to 0.3, results in a total of 1.00?



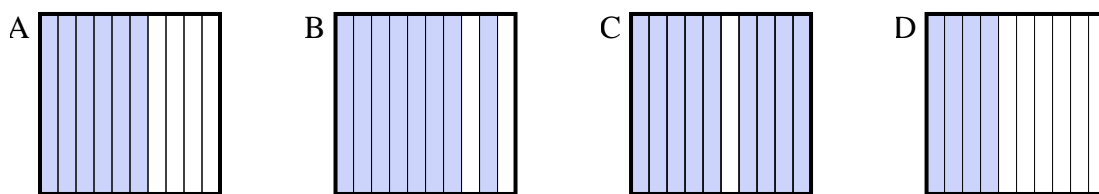
1. _____

2) Which 10×1 grid is shaded to represent the decimal number that, when added to 0.4, results in a total of 1.00?



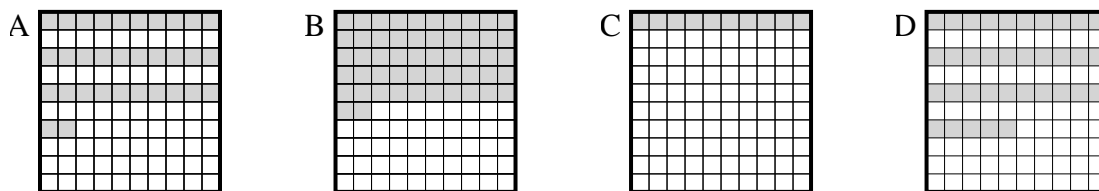
2. _____

3) Which 10×1 grid is shaded to represent the decimal number that, when added to 0.6, results in a total of 1.00?



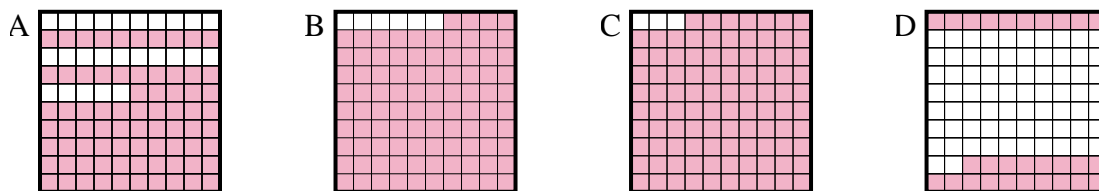
3. _____

4) Which 10×10 grid is shaded to represent the decimal number that, when added to 0.65, results in a total of 1.00?



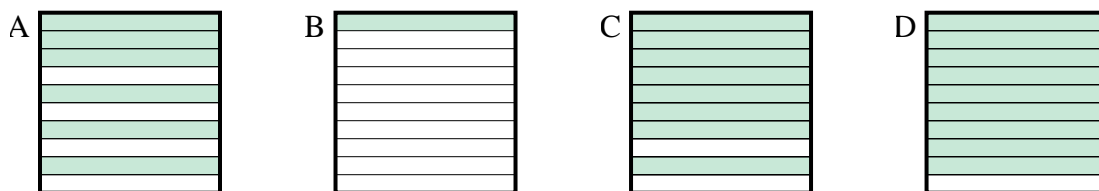
4. _____

5) Which 10×10 grid is shaded to represent the decimal number that, when added to 0.06, results in a total of 1.00?



5. _____

6) Which 10×1 grid is shaded to represent the decimal number that, when added to 0.9, results in a total of 1.00?

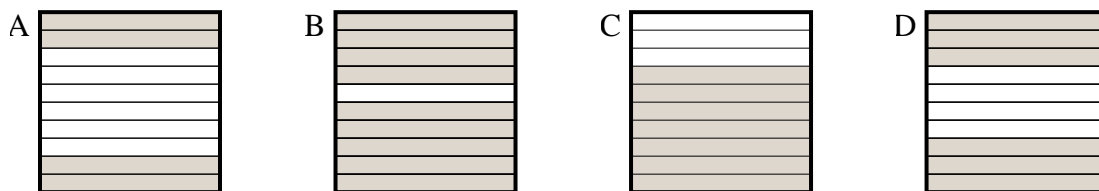


6. _____

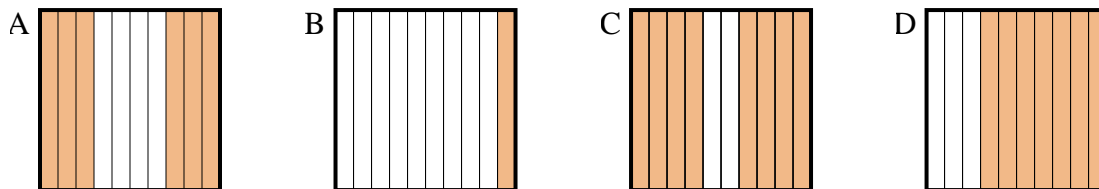


Determine which letter best answer the question.

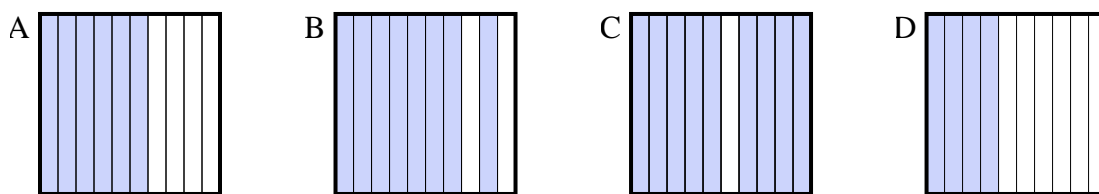
1) Which 10×1 grid is shaded to represent the decimal number that, when added to 0.3, results in a total of 1.00?



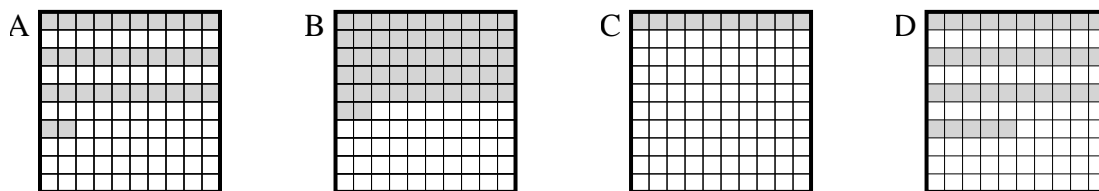
2) Which 10×1 grid is shaded to represent the decimal number that, when added to 0.4, results in a total of 1.00?



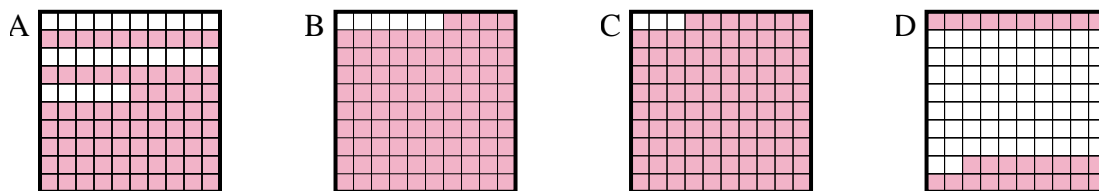
3) Which 10×1 grid is shaded to represent the decimal number that, when added to 0.6, results in a total of 1.00?



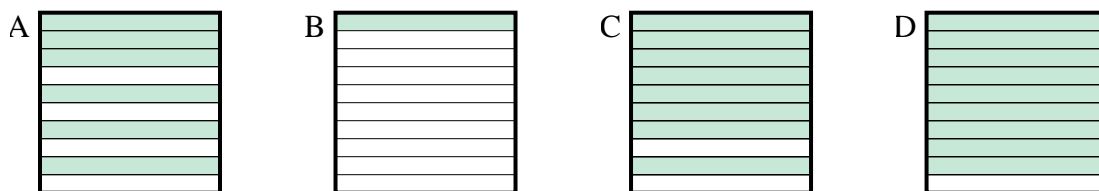
4) Which 10×10 grid is shaded to represent the decimal number that, when added to 0.65, results in a total of 1.00?



5) Which 10×10 grid is shaded to represent the decimal number that, when added to 0.06, results in a total of 1.00?



6) Which 10×1 grid is shaded to represent the decimal number that, when added to 0.9, results in a total of 1.00?



Answers

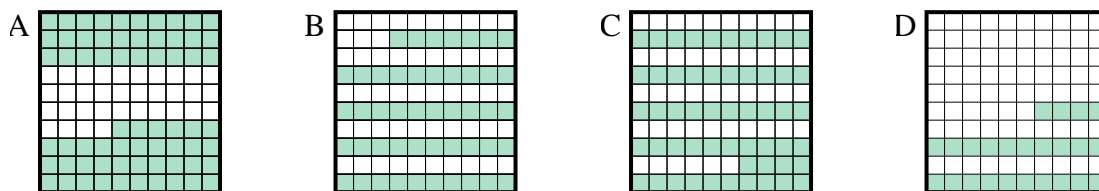
1. **C**
2. **A**
3. **D**
4. **D**
5. **B**
6. **B**



Determine which letter best answer the question.

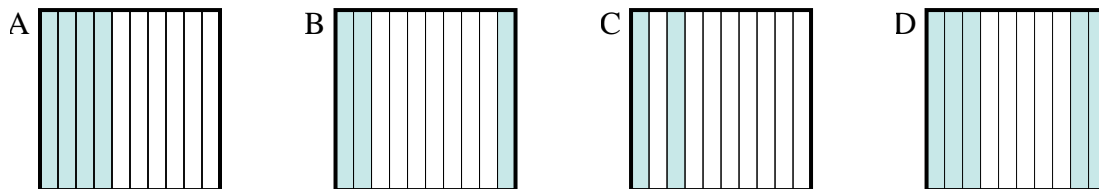
Answers

1) Which 10×10 grid is shaded to represent the decimal number that, when added to 0.76, results in a total of 1.00?



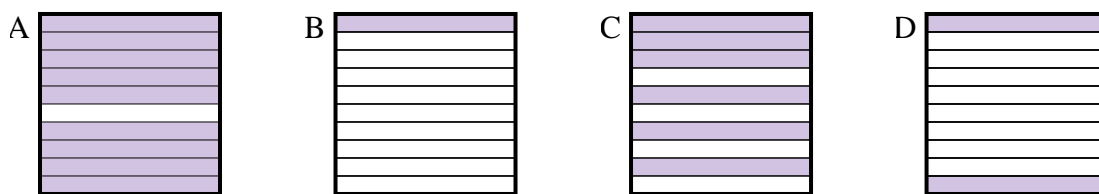
1. _____

2) Which 10×1 grid is shaded to represent the decimal number that, when added to 0.5, results in a total of 1.00?



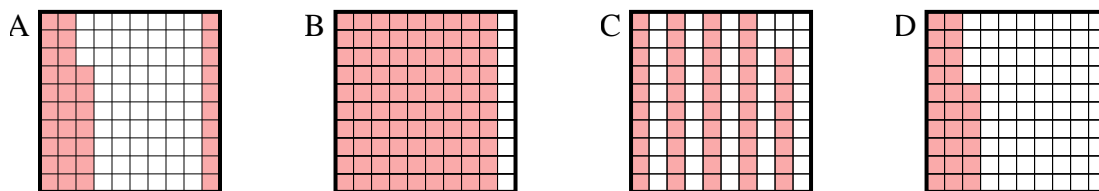
2. _____

3) Which 10×1 grid is shaded to represent the decimal number that, when added to 0.1, results in a total of 1.00?



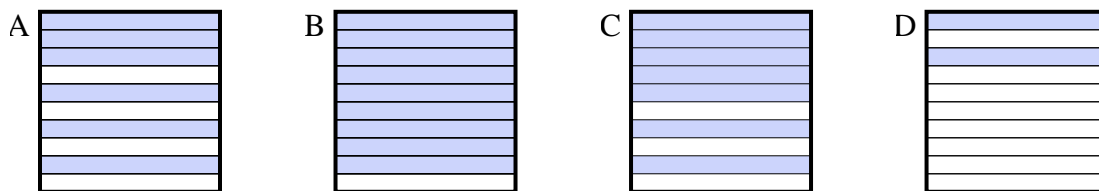
3. _____

4) Which 10×10 grid is shaded to represent the decimal number that, when added to 0.63, results in a total of 1.00?



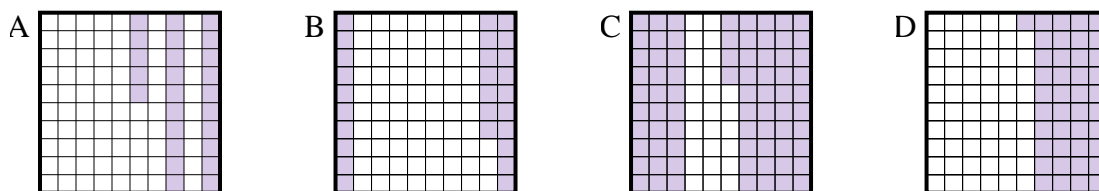
4. _____

5) Which 10×1 grid is shaded to represent the decimal number that, when added to 0.3, results in a total of 1.00?



5. _____

6) Which 10×10 grid is shaded to represent the decimal number that, when added to 0.75, results in a total of 1.00?

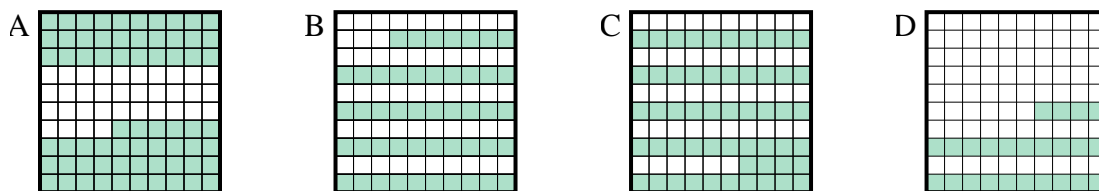


6. _____

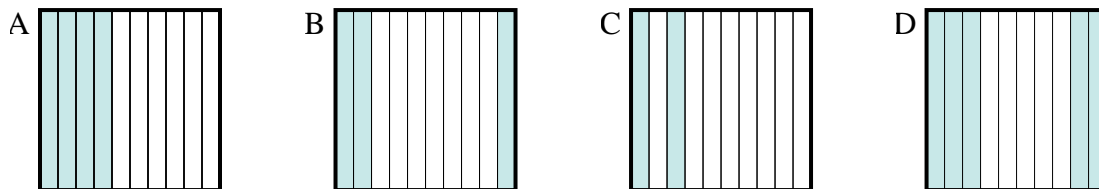


Determine which letter best answer the question.

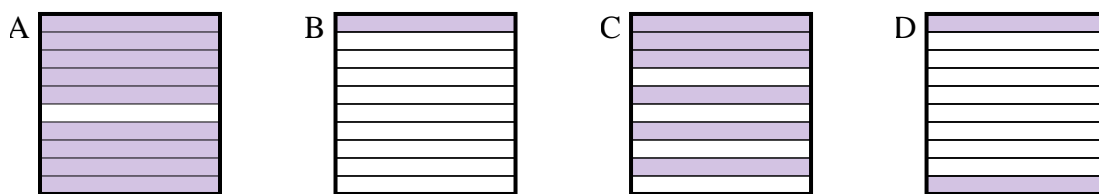
1) Which 10×10 grid is shaded to represent the decimal number that, when added to 0.76, results in a total of 1.00?



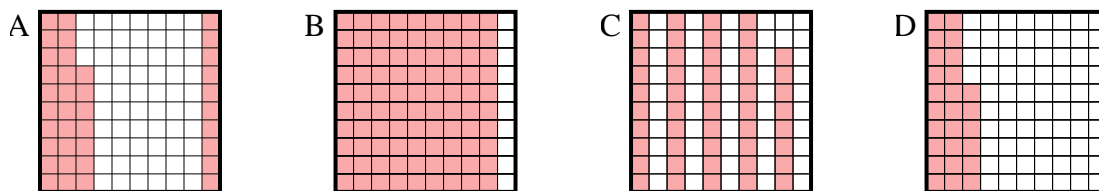
2) Which 10×1 grid is shaded to represent the decimal number that, when added to 0.5, results in a total of 1.00?



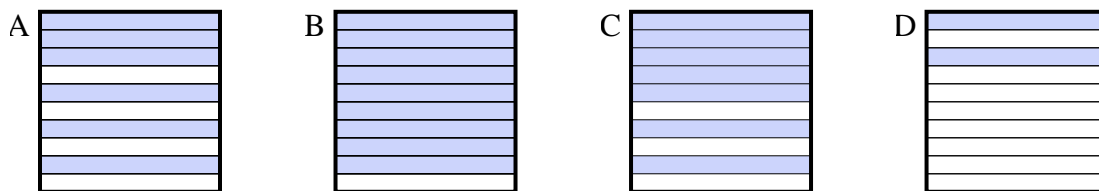
3) Which 10×1 grid is shaded to represent the decimal number that, when added to 0.1, results in a total of 1.00?



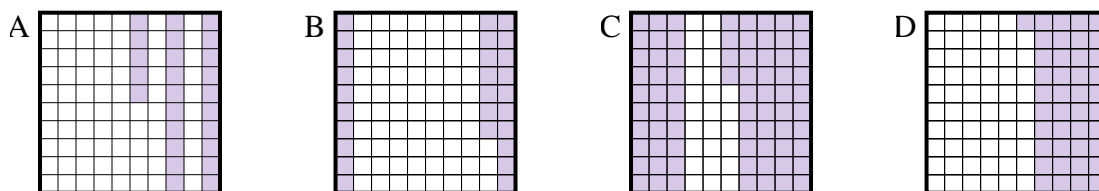
4) Which 10×10 grid is shaded to represent the decimal number that, when added to 0.63, results in a total of 1.00?



5) Which 10×1 grid is shaded to represent the decimal number that, when added to 0.3, results in a total of 1.00?



6) Which 10×10 grid is shaded to represent the decimal number that, when added to 0.75, results in a total of 1.00?



Answers

1. **D**

2. **D**

3. **A**

4. **A**

5. **C**

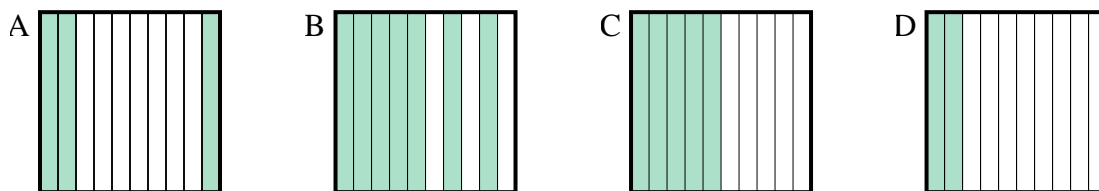
6. **A**



Determine which letter best answer the question.

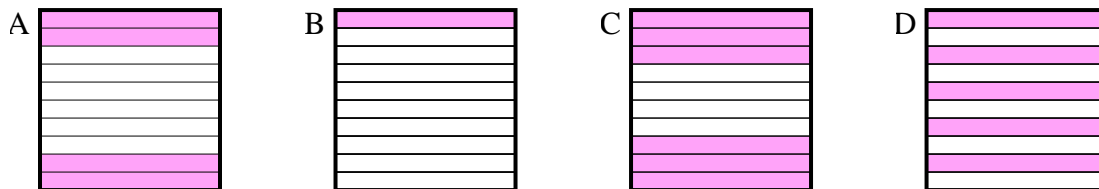
Answers

1) Which 10×1 grid is shaded to represent the decimal number that, when added to 0.5, results in a total of 1.00?



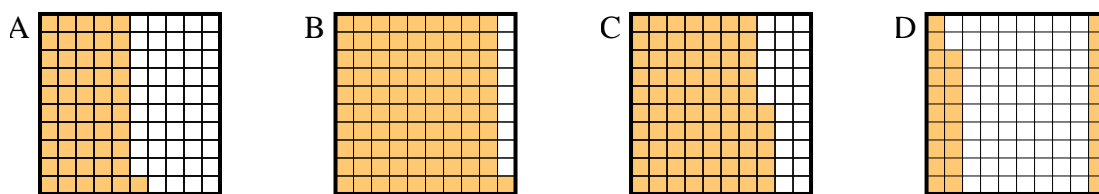
1. _____

2) Which 10×1 grid is shaded to represent the decimal number that, when added to 0.6, results in a total of 1.00?



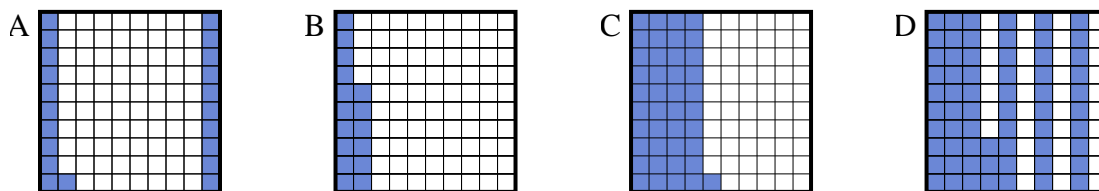
2. _____

3) Which 10×10 grid is shaded to represent the decimal number that, when added to 0.72, results in a total of 1.00?



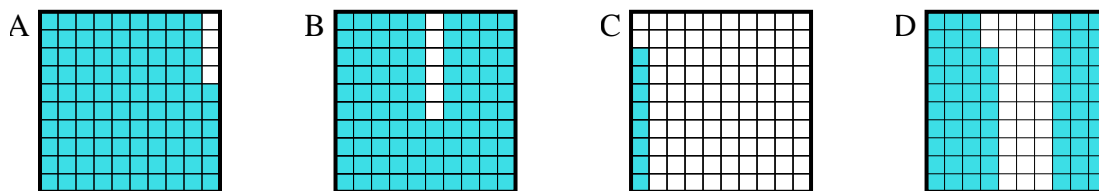
3. _____

4) Which 10×10 grid is shaded to represent the decimal number that, when added to 0.59, results in a total of 1.00?



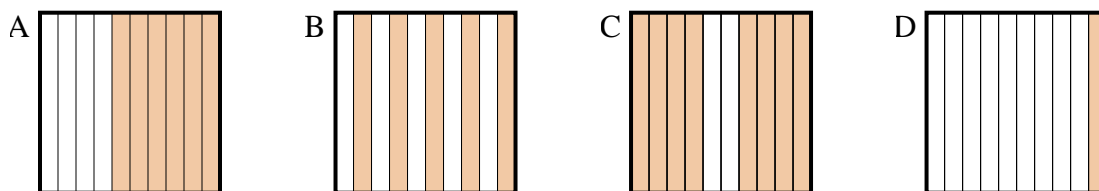
4. _____

5) Which 10×10 grid is shaded to represent the decimal number that, when added to 0.32, results in a total of 1.00?



5. _____

6) Which 10×1 grid is shaded to represent the decimal number that, when added to 0.4, results in a total of 1.00?

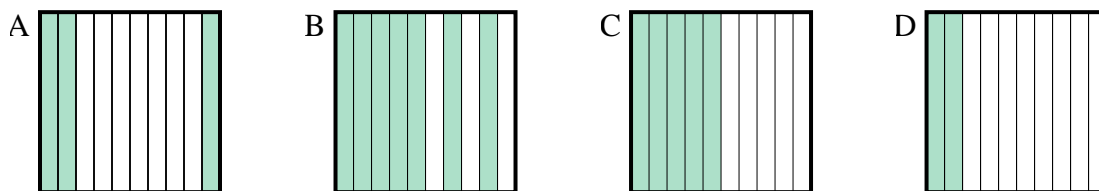


6. _____

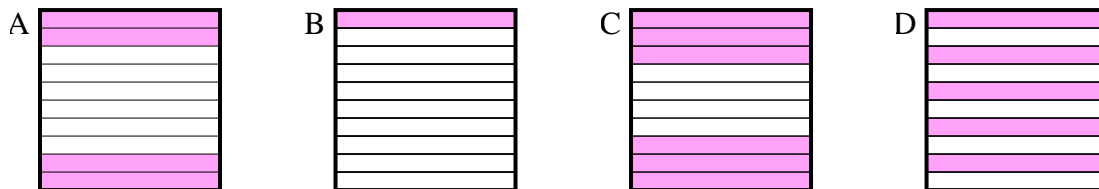


Determine which letter best answer the question.

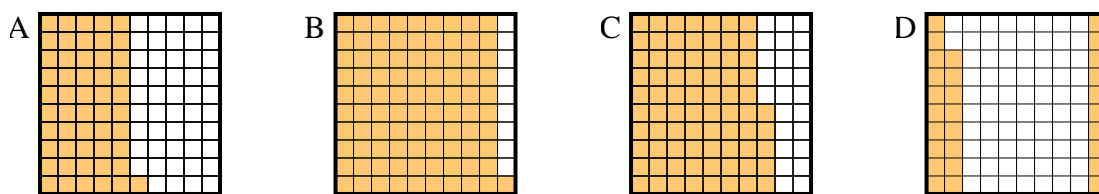
1) Which 10×1 grid is shaded to represent the decimal number that, when added to 0.5, results in a total of 1.00?



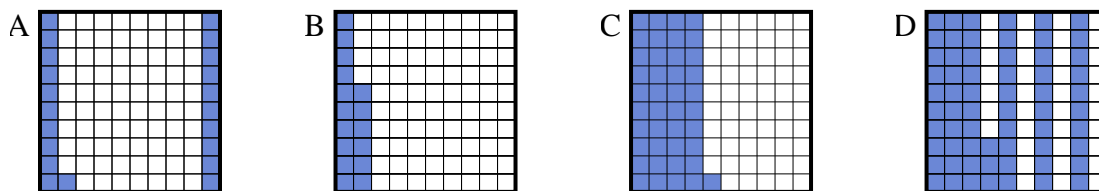
2) Which 10×1 grid is shaded to represent the decimal number that, when added to 0.6, results in a total of 1.00?



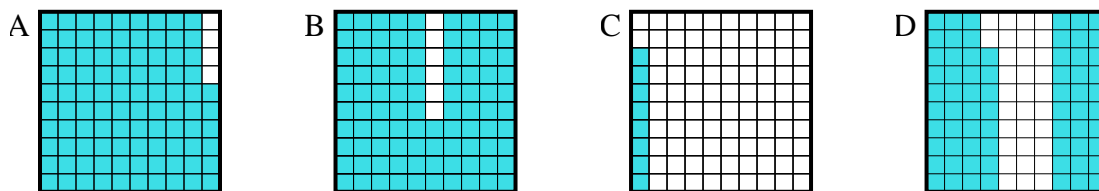
3) Which 10×10 grid is shaded to represent the decimal number that, when added to 0.72, results in a total of 1.00?



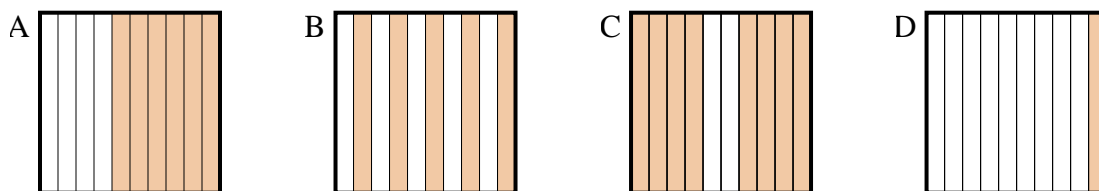
4) Which 10×10 grid is shaded to represent the decimal number that, when added to 0.59, results in a total of 1.00?



5) Which 10×10 grid is shaded to represent the decimal number that, when added to 0.32, results in a total of 1.00?



6) Which 10×1 grid is shaded to represent the decimal number that, when added to 0.4, results in a total of 1.00?



Answers

1. **C**

2. **A**

3. **D**

4. **C**

5. **D**

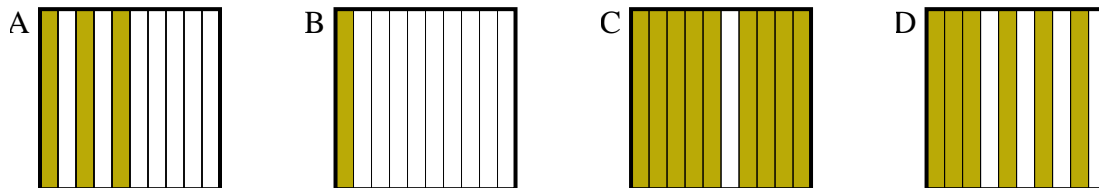
6. **A**



Determine which letter best answer the question.

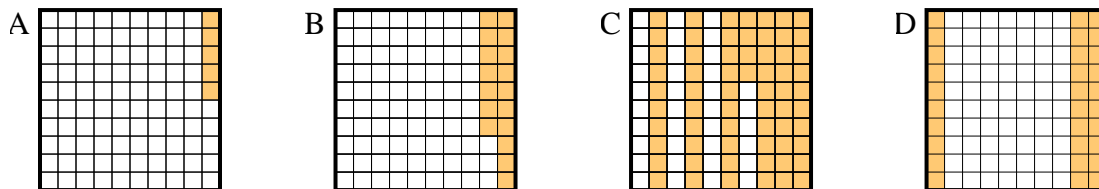
Answers

1) Which 10×1 grid is shaded to represent the decimal number that, when added to 0.9, results in a total of 1.00?



1. _____

2) Which 10×10 grid is shaded to represent the decimal number that, when added to 0.7, results in a total of 1.00?

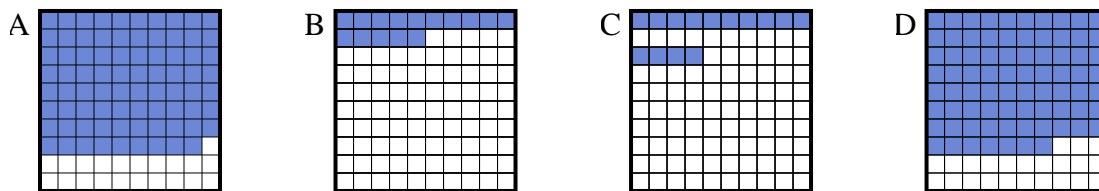


2. _____

3. _____

4. _____

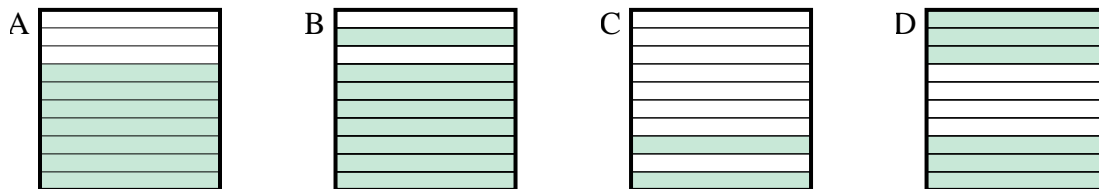
3) Which 10×10 grid is shaded to represent the decimal number that, when added to 0.21, results in a total of 1.00?



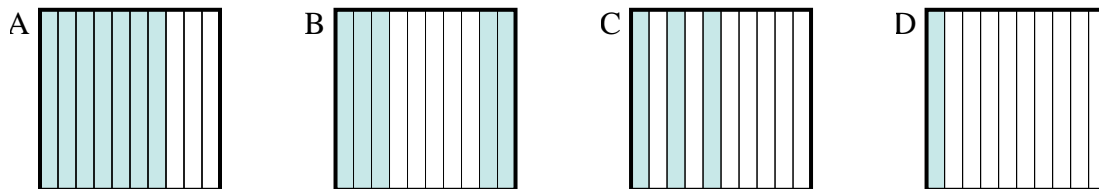
5. _____

6. _____

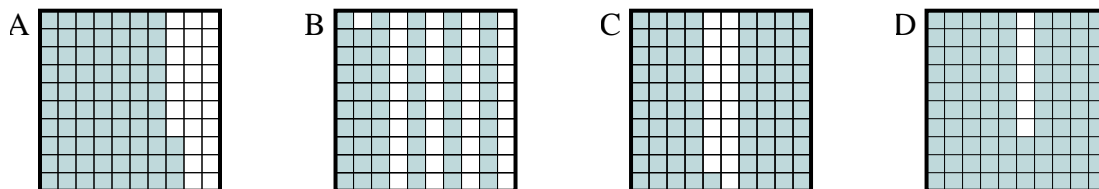
4) Which 10×1 grid is shaded to represent the decimal number that, when added to 0.3, results in a total of 1.00?



5) Which 10×1 grid is shaded to represent the decimal number that, when added to 0.5, results in a total of 1.00?



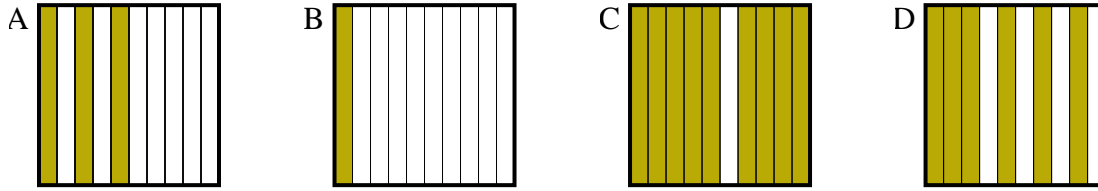
6) Which 10×10 grid is shaded to represent the decimal number that, when added to 0.07, results in a total of 1.00?



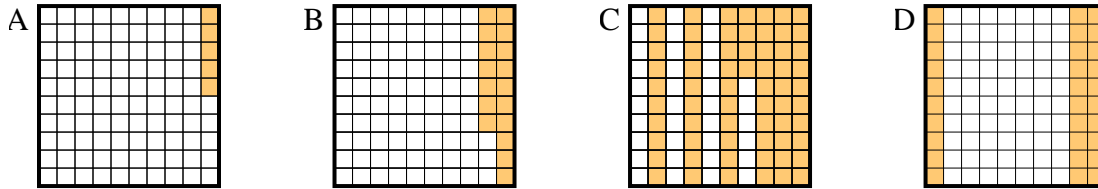


Determine which letter best answer the question.

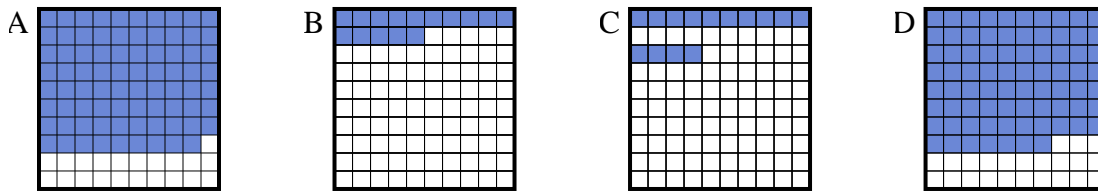
- 1) Which 10×1 grid is shaded to represent the decimal number that, when added to 0.9, results in a total of 1.00?



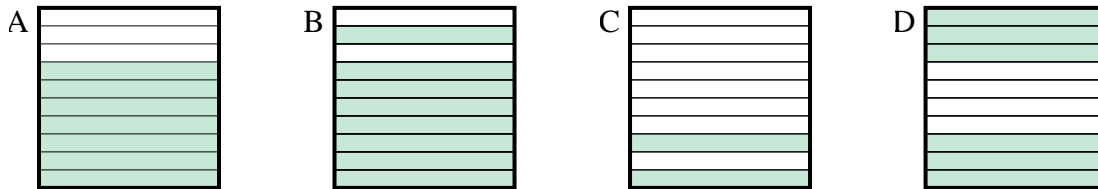
- 2) Which 10×10 grid is shaded to represent the decimal number that, when added to 0.7, results in a total of 1.00?



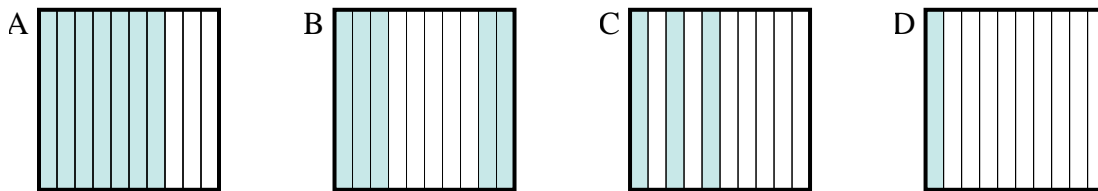
- 3) Which 10×10 grid is shaded to represent the decimal number that, when added to 0.21, results in a total of 1.00?



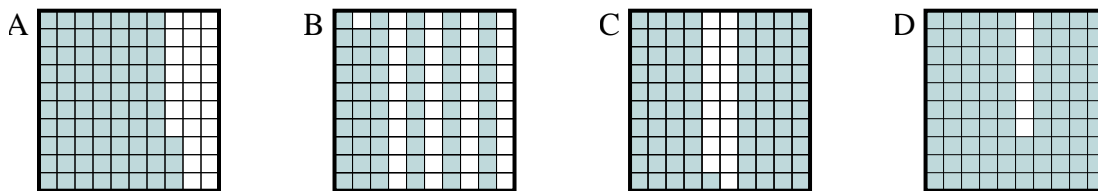
- 4) Which 10×1 grid is shaded to represent the decimal number that, when added to 0.3, results in a total of 1.00?



- 5) Which 10×1 grid is shaded to represent the decimal number that, when added to 0.5, results in a total of 1.00?



- 6) Which 10×10 grid is shaded to represent the decimal number that, when added to 0.07, results in a total of 1.00?



Answers

1. **B**

2. **D**

3. **A**

4. **A**

5. **B**

6. **D**